

G MAJOR MUSIC THEORY

MUSIC THEORY RESOURCES

MUSIC FUNDAMENTALS: WORKBOOKS

<https://www.gmajormusictheory.org/Fundamentals/workbooks.html>

MUSIC FUNDAMENTALS

 gmajormusictheory.org/Fundamentals/workbooks.html

Contents

Chapter 1.	The Keyboard and Treble Clef	1
Chapter 2.	Bass Clef	10
Chapter 3	Basic Rhythms	18
Chapter 4.	Major Scales and the Circle of Fifths	24
Chapter 4.	Expanded. Major Scales and the Circle of Fifths	35
Chapter 5.	Key Signatures	52
Chapter 6	Natural Minor Scales and Minor Key Signatures	63
Chapter 7	Writing Minor Scales with Key Signatures	71
Chapter 8	Intervals	78
Chapter 9	More about thirds and minor keys	89
Chapter 10	Triads	96
Chapter 10B	Triads: Comparing Non-major Triads to Major Ones	103
Chapter 11	Scale Degrees and Roman Numerals	109
Chapter 12	Triad Inversions, 1: Letters for Roots	117
Chapter 13	Triad Inversions, 2: Roman Numerals for Roots Writing	125
Chapter 14	Triads in Four Parts	131
Chapter 15	The Smoothest Voice Leading:	138
Chapter 16	CTS and CMN in Musical Phrases	146
Chapter 17	The Fundamental Harmonic Progression, I V I	155
Chapter 18	Harmonizing phrases with I and V; Cadences	163
Chapter 19	The Dominant Seventh Chord, V7	170
	Circles of Fifths	180
	Answers to Workbooks	193
	Templates for Tests	236
	Index of Terms	251

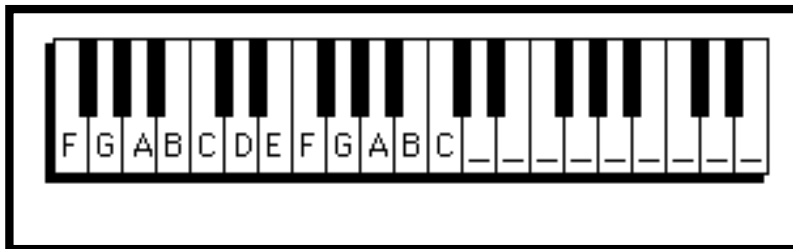
Chapter 1. The Keyboard and Treble Clef

In this chapter you will:

1. Play a tune on the keyboard
2. Identify notes on the keyboard
3. Write treble clefs on a staff
4. Review the material to here
5. Identify notes on the treble staff
6. Write notes on the treble staff
7. Identify whole, half and quarter notes, and draw stems on note-heads
8. Match notes on the keyboard with notes on the staff
9. Write a familiar song

Date:

1.1 Play a tune on the keyboard



- Harmony is the study of how pitches, or notes, are arranged to make music. In order to explain these arrangements it is convenient to show the keys on a piano keyboard. On the keyboard each key plays a certain pitch.
- Each white key corresponds to a letter A, B, C, D, E, F or G. The letters proceed alphabetically from A to G and then they go back to A.
- Black keys are arranged in alternating groups of twos and threes. All A's look alike in this pattern, all B's look alike and so on.

1. *LABEL* the remaining keys on the keyboard above.

2. *PLAY* "Mary Had a Little Lamb" as shown below. The note letters are above the words. You can begin on any E on the keyboard.

E D C D E E E D D D E G G

Mary had a little lamb, little lamb, little lamb,

E D C D E E E E D D E D C

Mary had a little lamb, its fleece was white as snow.

Pathways to Harmony, Chapter 1. The Keyboard and Treble Clef

Date:

1.2 Identify notes on the keyboard



- On the keyboard keys to the left sound low and keys to the right sound high.
- “Middle C” is often used as a reference note.
- The first G above middle C (to the right of middle C), and the first F below middle C (to the left of middle C) are also used as reference notes.


-
1. *WRITE* the letter name for each white key on the keyboard above.
This keyboard does not start in the same place as the keyboard on the previous page.
 2. *WRITE* “high” and “low” in the correct spaces on either side of the keyboard.
 3. *CIRCLE* the C which is closest to the middle of the keyboard.
 4. *CIRCLE* the first G above middle C, and the first F below middle C.
 5. *GO ONLINE* to www.gmajormusictheory.org
 - a. *CLICK* "Music Fundamentals"
 - b. *CLICK* in the "Virtual Flash Cards" column:
 - 1.1 White keys on the keyboard
 - c. *PRACTICE* the letter names you have learned on the keyboard.

Date:

1.3 Write treble clefs on a staff


- Music is written on staves. A staff is a set of five lines and four spaces.
- Lines and spaces on the staff are numbered from the bottom.
- Each line and space stands for a certain pitch or note, and is given a letter A through G. These letters refer to the letters for the keys on the keyboard.
- Each staff of music begins with a clef. A clef is a symbol which identifies a line and space with a letter.



- This symbol, , is a G or treble clef. The G or treble clef identifies the second line as the note G above the piano's middle C.

1. *NUMBER* the lines and spaces in the squares beside the staves at the top of the page.

2. *WRITE* five treble clefs on the staff below. After each clef put a dot on the G line.



Pathways to Harmony, Chapter 1. The Keyboard and Treble Clef

Date:

1.4 Review the material to here

COMPLETE the following sentences:


1. A staff is _____

2. The note letters are _____

3. A clef is _____

4. The G or treble clef identifies

5. Write two treble or G clefs. Put a dot on the second line.




6. Notes to the right on the keyboard sound (higher/lower) _____.

7. Notes to the left on the keyboard sound (higher/lower) _____.

Pathways to Harmony, Chapter 1. The Keyboard and Treble Clef

Date:

1.6 Write notes on the treble staff



There is a faster way to identify the letters on a staff with treble clef:

- Notes in the spaces, starting from the bottom, spell the word FACE.
- Notes on the lines, starting from the bottom, are E G B D and F, as in Every Good Boy Does Fine.

1. *IDENTIFY* the following notes, and learn to *PLAY* one of these phrases:



The Arkansas Traveler -- Traditional fiddle tune




2. *DRAW* a treble clef at the beginning of the staff below.

3. *DRAW* open note-heads (without stems) for the letters above the staff.

Draw a
treble
clef

Welsh Lullaby

C B A C D C B G A B B C



Sleep my child and peace at - tend thee, All Through the Night

4. *GO ONLINE* to www.gmajormusictheory.org

a. *CLICK* "Music Fundamentals"

b. *CLICK* in the "Virtual Flash Cards" column:

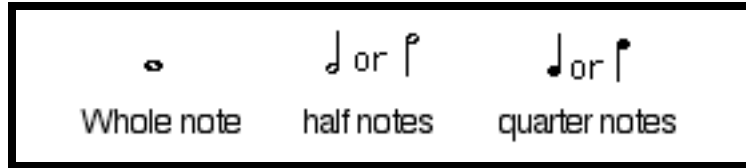
1.2 Treble Clef


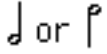

c. *PRACTICE* the letter names you have learned on the staff.

Pathways to Harmony, Chapter 1. The Keyboard and Treble Clef

Date:

1.7 Identify whole, half and quarter notes, and draw stems on note-heads



- A beat is a steady pulse which underlies the music. When you tap your foot to the music, you usually tap the beat.
- Stems are vertical lines which are frequently attached to the note-heads.
- Open note-heads without stems, , are usually four beats long. They are called whole notes.
- Open note-heads with stems, , are usually two beats long. They are half as long as whole notes, so they are called half notes.
- Filled in note-heads with stems, , are usually one beat long. They are one quarter as long as whole notes, and so they are called quarter notes.

IDENTIFY the numbered notes as whole, half or quarter notes:



1. _____ 3. _____
2. _____ 4. _____

- If a note-head is on the middle line or higher, the stem is on the left of the note-head. This stem goes down.
- If a note-head is on the second space or lower, the stem is on the right of the note-head. This stem goes up. See the above staff.

DRAW stems for these quarter notes and half notes.



Pathways to Harmony, Chapter 1. The Keyboard and Treble Clef

Date:

1.8 Match notes on the keyboard and the treble staff



1. *WRITE* letter names on each white key on the keyboard above.

2. *WRITE* quarter notes under each number according to where the number appears on the keyboard.

1 2 3 4 5 6 7 8

Praise God from Whom all bless-ings flow

3. *WRITE* on the keyboard the number for each note on the staff.

1 2 3 4 5 6 7

The first No - el

Pathways to Harmony, Chapter 1. The Keyboard and Treble Clef

Date:

1.9 Write a Familiar Song

1. *WRITE* the treble clefs and the notes to “Jingle Bells.”

For the notes, refer to the note letters and the durations above the staves.


Durations are on top. Use this code to write them correctly:

Q= quarter note, H=half note and W= whole note.

2. *PLAY* “Jingle Bells!”




Q	Q	H	Q	Q	H	Q	Q	Q	Q	W
B	B	B	B	B	B	B	D	G	A	B




Jin-gle bells, Jing-le bells, Jin-gle all the way,

Q	Q	Q	Q	Q	Q	Q	Q	Q	Q	Q	Q	H	H
C	C	C	C	C	B	B	B	B	A	A	B	A	D




Oh, what fun it is to ride a one horse o-pen sleigh—,

Q	Q	H	Q	Q	H	Q	Q	Q	Q	W
B	B	B	B	B	B	B	D	G	A	B



Jin-gle bells, Jing-le bells, Jin-gle all the way,

Q	Q	Q	Q	Q	Q	Q	Q	Q	Q	Q	Q	W
C	C	C	C	C	B	B	B	D	D	C	A	G



Oh, what fun it is to ride a one horse o-pen sleigh.

Chapter 2. Bass Clef

In this chapter you will:

1. Write bass clefs
2. Write some low notes
3. Match low notes on the keyboard with notes on the staff
4. Write eighth notes
5. Identify notes on ledger lines
6. Identify sharps and flats on the keyboard
7. Write sharps and flats on the staff
8. Write enharmonic equivalents


date:

2.1 Write bass clefs

The diagram shows a musical staff with a bass clef and a 4/4 time signature. The melody consists of eighth notes: F2, G2, A2, B2, C3, D3, E3, F3, G3, A3, B3, C4. A box labeled "F or bass clef" points to the clef symbol. A piano keyboard diagram shows "middle" C and the F key below it, with lines indicating their positions on the staff.

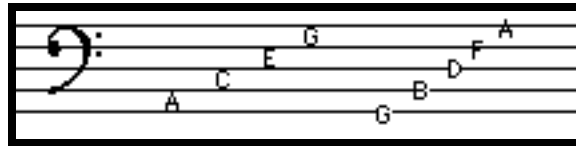
- The symbol at the beginning of the above staff, F , is an F or bass clef.
- The F or bass clef says that the fourth line of the staff is the F below the piano's middle C. This clef is used to write low notes.

DRAW five bass clefs. After each clef, which itself includes two dots, put another dot on the F line.



Pathways to Harmony, Chapter 1. The Keyboard and Treble Clef

2.2 Write some low notes



•The notes on the spaces of a staff with bass clef starting from the bottom space are:

A, C, E and G as in All Cows Eat Grass.

•The notes on the lines of a staff with bass clef starting from the bottom line are:

G, B, D, F and A as in Good Boys Do Fine Always.

1. *IDENTIFY* the notes in the song “This Old Man.” *PLAY* it.

This old man, He played one, He played nick nack on my thumb

2. *WRITE* the notes and bass clefs for the song, “Go Tell Aunt Rhodie”

Q = quarter note

H = half note

W = whole note

H Q Q H H H Q Q QQ H
E E D C C D D F E D C

Go tell Aunt Rhodie, Go tell Aunt Rhodie

H Q Q H Q Q Q Q Q W
G G F E E C D C D E C

Go tell Aunt Rhodie, The old grey goose is dead.

Write
bass
clefs

Pathways to Harmony, Chapter 1. The Keyboard and Treble Clef


2.3 Match low notes on the keyboard with notes on the staff



A. Bass clef and the keyboard

1. *WRITE* letters on the white keys of the above keyboard.
2. *WRITE*, on the keyboard below, the number of each note which appears on the staff to the left. Learn to play this phrase.

1 2 3 4 5 6 7 8



Deck the halls with boughs of hol-ly



B. Review

COMPLETE the following sentences

1. The phrase for remembering the lines for bass clef is

2. The spaces in treble clef spell

3. The phrase for remembering the lines for treble clef is

4. The phrase for remembering the spaces for bass clef is

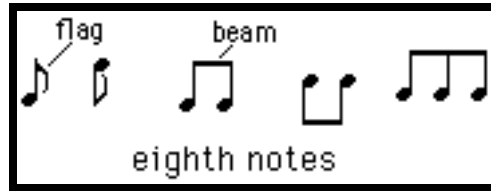
C. Practice

GO ONLINE to <http://www.classic.musictheory.net/>.

1. *SELECT* "Note Trainer" from the "Trainers" menu.
2. *CLICK* "Settings."
3. *HIGHLIGHT* bass clef only; *DRAG* notes to the top and bottom lines.
4. *CLICK* "Settings" again.
5. *REVIEW* treble clef notes as needed.

Pathways to Harmony, Chapter 1. The Keyboard and Treble Clef

2.4 Write eighth notes



- All the above notes are called eighth notes.
- When there is only a single eighth note, its stem has a flag.
- When two or more eighth notes appear together they are usually connected with a beam.
- Eighth notes are twice as fast as quarter notes. There are usually two eighth notes in one beat. There are eight eighth notes in a whole note.


1. *DRAW* these notes:

Eighth note 2 eighth notes connected with a beam Quarter note Half note Whole note

2. *WRITE* the notes to “Arkansas Traveler” on the staff below. Connect the eighth notes with a beam.

In the top line E = eighth note and Q = quarter note.

Q E E E E Q Q Q Q Q
G C E D C A A G G C
line space space line line



Pathways to Harmony, Chapter 1. The Keyboard and Treble Clef

2.5 Identify notes above and below the staff; ledger lines

Example 1. Treble clef: D E F...E F G. Bass clef: F G A...G A B.

Example 2. Treble clef: G A B C D (with ledger lines below the staff). Bass clef: B C D E (with ledger lines above the staff).

A box labeled "Leger lines" points to the lines below the staff in Example 2.

- Notes can be written above and below the staff. Their letter names continue in alphabetical order. See example 1 above.
- Staffs can be extended with ledger lines. Ledger lines are short lines above, below or through notes to show pitches beyond the staff. See example 2.

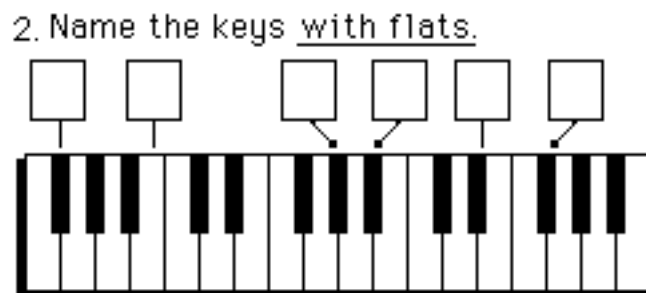
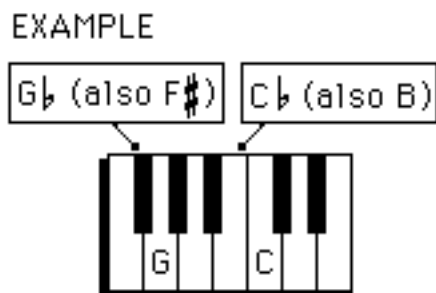
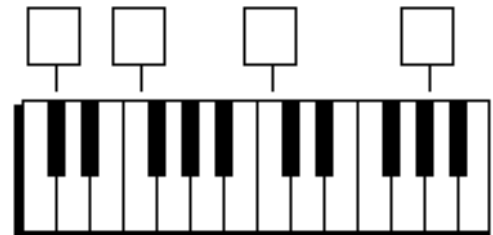
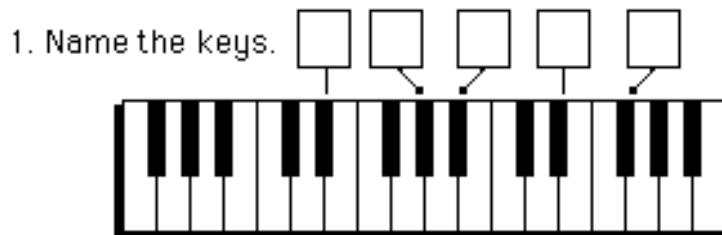
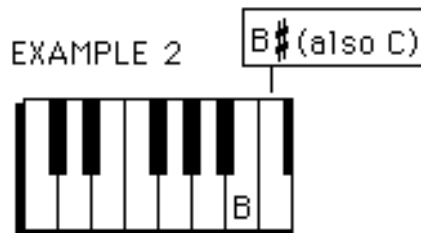
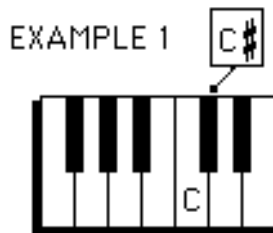
IDENTIFY the notes to Beethoven's "Ode to Joy."

Pathways to Harmony, Chapter 1. The Keyboard and Treble Clef

2.6 Identify sharps and flats on the keyboard



- A sharp, #, after a letter name means play the key to the right, or higher, on the keyboard without skipping over any keys, whether black or white. See example 1 below. C# is to the right of C.
- If the key to the right is white, give the key a new second name with a sharp. See example 2 below.
- A flat, b, after a letter means play the key to the left, or lower, on the keyboard without skipping over any keys, whether black or white.



Pathways to Harmony, Chapter 1. The Keyboard and Treble Clef

2.7 Write sharps and flats on the staff

Sharps and flats on the staff.

- When writing sharps and flats with letter names, write the sharp or flat after the letter--C \sharp .
- When writing sharps and flats with notes on a staff, write the sharp or flat before the note-- \sharp F.
- On the staff, the space in the middle of the sharp or flat should cover the same line or space as the note next to it.

1. *WRITE* sharps or flats in front of these notes.

The image shows a musical staff with a treble clef and a 4/4 time signature. The staff contains two musical phrases. The first phrase starts with a note on the second line (F4) with a sharp sign (#) written before it. Above this note is a box labeled 'EXAMPLE'. A bracket above the staff spans from this note to the next note (G4) and is labeled 'Add sharps'. The second phrase starts with a note on the second space (F4) with a flat sign (b) written before it. Above this note is a box labeled 'EXAMPLE'. A bracket above the staff spans from this note to the next note (G4) and is labeled 'Add flats'.

2. *REVIEW*

- Notes sound _____ on the right side of the keyboard.
(higher or lower)
- Notes sound _____ on the left side of the keyboard.
(higher or lower)
- A sharp means play the key to the _____ on the keyboard.
(right or left)
- A flat means play the key to the _____ on the keyboard.
(right or left)
- The key for D \sharp is to the _____ of D.
(right or left)
- The key for C \flat is to the _____ of C.
(right or left)
- D \sharp sounds _____ than D.
(higher or lower)
- C \flat sounds _____ than C.
(higher or lower)

3. *GO ONLINE* to <http://www.classic.musictheory.net/>.

- SELECT* "Keyboard Trainer" from the "Trainers" menu.
- CLICK* the "Black Keys" circle so it says "On."
- CHOOSE* the correct letters for the highlighted keys.

Chapter 3 Basic Rhythms

In this chapter you will:






1. Review some rhythmic notation
2. Draw bar lines to make measures
3. Write time signatures
4. Clap rhythms with sixteenth notes
5. Count the beats in phrases with dotted notes
6. Count the beats in phrases with rests

date:

3.1 Review some rhythmic notation



1. A beat is _____
(see worksheet 1.7)

2. *DRAW* lines to match items in column 1 with items in column 2,
AND *DRAW* lines to match items in column 2 with items in column 3.

1. Note symbol	2. Note Name	3. Usual number of beats
	2 eighth notes	1
	a quarter note	2
	a whole note	4
	an eighth note	1
	a half note	one half




3. *DRAW* the note in the box which makes one side of the “equation” equal the other side.

a.  = 

d.  = 

b.  = 

e.   = 

c.   = 

Date:

3.2 Draw bar lines to make measures

Hebrew melody

Who can re-tell the things that be-fell us? Who can count them?

bar lines

double bar

- Vertical lines on the staff are called bar lines.
- The spaces between the bar lines are called measures.
- The first measure in a staff does not usually have a left bar line.
- Each measure has the same number of beats.
- Measures show the regular pattern of strong and weak beats in music.
The first beat of every measure is strong.
- The double bar at the end of the above staff signals the end of the music

1. *HOW MANY* measures are there in the phrase above? _____
2. *DRAW* bar lines in the following phrases. Each measure should have the number of quarter note beats which are shown in the box on the left. End the phrases with a double bar.

EXAMPLE 2 ♩ ♩ | ♩ ♩ | ♩ | ||

4 ♩ ♩ ♩ ♩ ♩ ♩ ♩ ♩ ♩ ♩ ♩ ♩ ♩ ♩ ♩ ♩

3 ♩

5 ♩ ♩ ♩ ♩ ♩ ♩ ♩ ♩ ♩ ♩ ♩ ♩ ♩ ♩ ♩ ♩

3 ♩ ♩ ♩ ♩ ♩ ♩ ♩ ♩ ♩ ♩ ♩ ♩ ♩ ♩ ♩ ♩

Clap these rhythms.

Date:

3.3 Write time signatures

Who can re-tell the things that be-fell us? Who can count them?

- The numbers at the beginning of a piece, the two fours after the clef in the above phrase, are called a time signature. The time signature tells how long each measure is.
- The top number tells how many counts there are in each measure. The bottom number tells what kind of note to count. If there is a 4 on the bottom, count the time in terms of quarter notes.

1. *HOW MANY* quarter notes long is a measure of $\frac{3}{4}$ (that is, a measure preceded by a time signature of $\frac{3}{4}$)?

2. *HOW MANY* quarter notes long is a measure of $\frac{6}{4}$?

3. WRITE the time signatures in the boxes. Count the length of each measure in terms of quarter notes.

EXAMPLE $\frac{6}{4}$
1 2 3 4 5 6

1.

2.

3.

4. DRAW bar lines according to the time signatures. End with a double bar.

EXAMPLE $\frac{4}{4}$

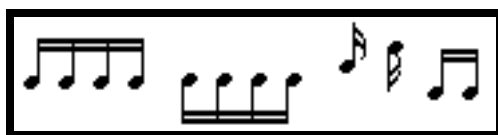
1. $\frac{3}{4}$

2. $\frac{2}{4}$

3. $\frac{4}{4}$

Date:

3.4 Clap rhythms with sixteenth notes

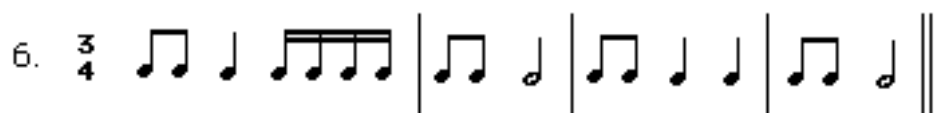


- All the notes above are called sixteenth notes. Sixteenth notes either have two flags or are connected by two beams.
- There are four sixteenth notes in a quarter note, the usual beat.

$$\text{Quarter Note} = \text{Four Sixteenth Notes}$$











- There are 16 sixteenth notes in a whole note.

CLAP these rhythms:







Date:






3.6 Count the beats in phrases with rests




	whole note	} 4 beats
	whole rest	
	half note	} 2 beats
	half rest	
	quarter note	} 1 beat
	quarter rest	
	eighth note	} 1/2 beat (2 per beat)
	eighth rest	
	sixteenth note	} 1/4 beat (4 per beat)
	sixteenth rest	





- Rests tell how long silences are in music.
 - Each note has a rest which stands for the same length of time as the note.
- See the chart above.

1. *DRAW* rests in the boxes so that both sides of the “equations” add to the same length of time.

1.   =  

2.  =    

3.    =

4.  =   

5. =         

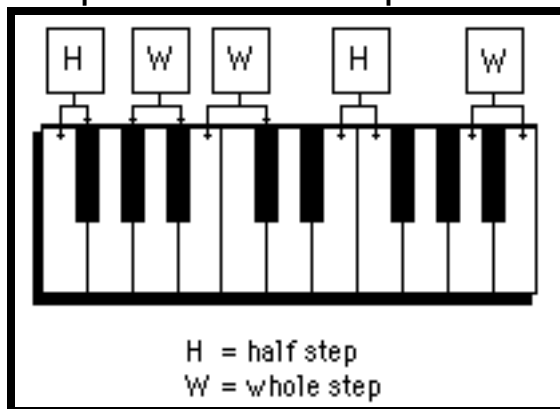
2. *GO ONLINE* to www.gmajormusictheory.org
- CLICK* "Music Fundamentals"
 - CLICK* in the "Virtual Flash Cards" column:
 - 3.1 Note & Rest Durations
 - PRACTICE* the durations you have learned.

Chapter 4. Major Scales and the Circle of Fifths

In this chapter you will:

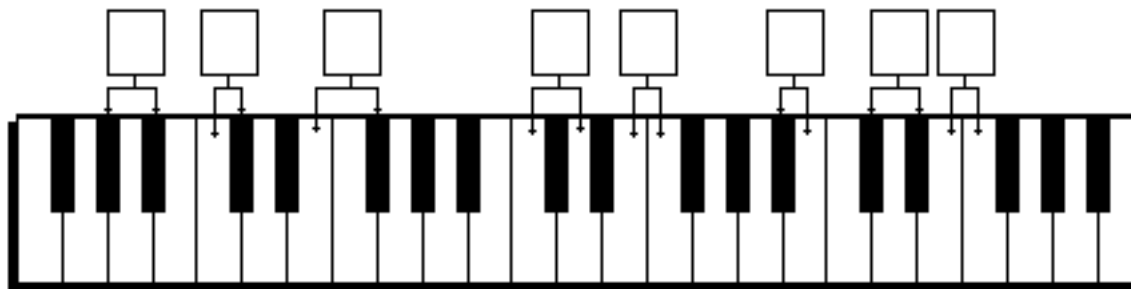
1. Identify half steps and whole steps on the keyboard
2. Identify half steps and whole steps on the staff
3. Write half steps and whole steps on the staff
4. Mark the notes of major scales on the keyboard
5. Mark the notes of major scales on a keyboard in the circle of fifths
6. Write phrases to memorize keynotes in the circle of fifths
7. Fill in the keys, in order, on the circle of fifths.
8. Write major scales on the staff
9. Write the sharp scales on a staff in the circle of fifths
10. Write the flat scales on a staff in the circle of fifths

4.1 Identify half steps and whole steps on the keyboard




- A half step is the closest possible distance between two notes. There can be no notes in between two notes which are separated by a half step.
- A whole step is a distance between two notes such that there is one and only one note between those two notes. A whole step equals two half steps.

IDENTIFY the distances on the keyboard below as “H” for half step or “W” for whole step.



4.2 Identify half steps and whole steps on the staff



- The staff by itself does not show half step and whole step relationships. See the illustration above. To find half steps and whole steps on the staff, refer to the keyboard.

1. *FILL IN* the letter names for the white keys on this keyboard.



2. *IDENTIFY* the pairs of notes as separated by either a half step (H), or a whole step (W), or as being enharmonic equivalents (E).

Example

The example shows two staves of music. The top staff is in treble clef with a key signature of one sharp (F#). The notes are G4, A4, B4, C5, and D5. Below the first interval (G-A) is a line with 'W' written above it. Below the other intervals (A-B, B-C, C-D, D-E) are blank lines. The bottom staff is in bass clef with a key signature of one sharp (F#). The notes are F3, G3, A3, B3, and C4. Below the intervals (F-G, G-A, A-B, B-C, C-D) are blank lines.

4.4 Mark the notes of major scales on the keyboard

J. S. Bach: Minuet in G

key note

key note

W W H W W W H

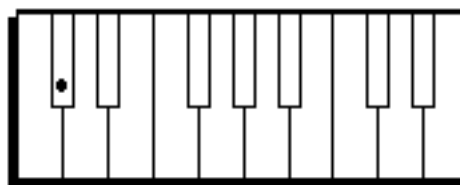
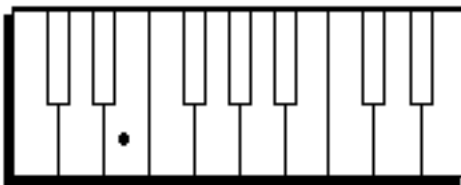
W = whole step
H = half step

W W H W W W H

- A key note is the most important note of a piece of music. Pieces almost always end on the key note.
- If eight notes of a piece are arranged in order without skipping lines or spaces and if the first note is the key note, then the notes form a scale.
- A major scale is eight note in ascending order which are separated from each other according to this pattern:

1	2	3	4	5	6	7	8
whole	whole	half	whole	whole	whole	whole	half
step	step	step	step	step	step	step	step

DRAW dots on the following keyboards for each note of a major scale. The key note is given.



4.5 page 1 Mark scale degrees on a keyboard in the circle of fifths
TURN THE BOOK (OR THE NEXT PAGE) UPSIDE-DOWN!

- Each note of a scale is called a scale degree. Scale degree 1 is the key note.
- If scales are written clockwise on a circular keyboard or staff, and if the keynote of each scale begins on scale degree 5 of the previous scale, then the keynotes follow an order called the circle of fifths.

DRAW dots for the notes of every scale on the circular keyboard on the next page. The C major scale has already been marked where it says “START HERE.” Notice that if the key note is C, then the major scale pattern

1 2 3 4 5 6 7 8
W W H W W W H

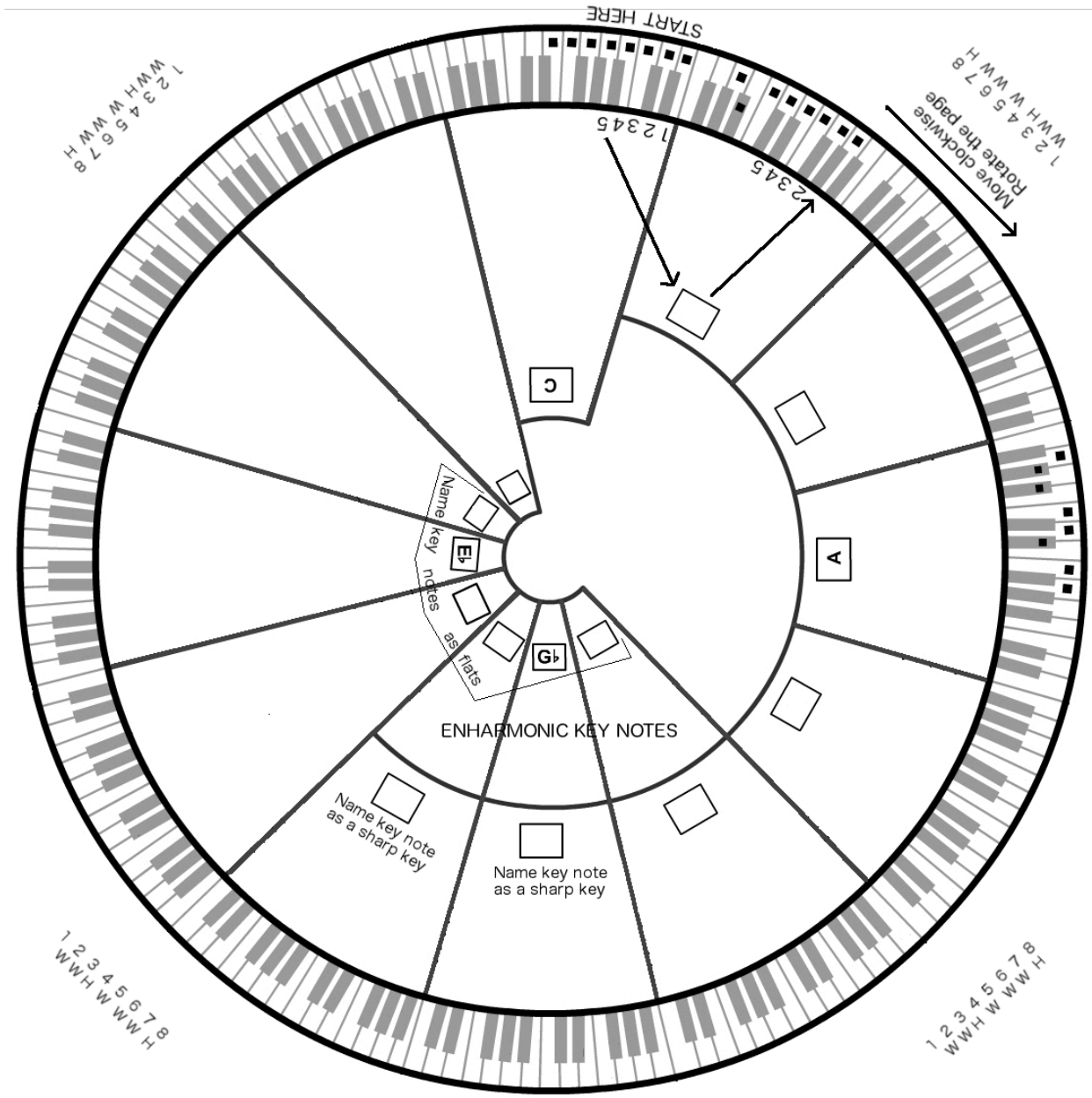
results in all white keys.

1. The key note of the next scale to the left (be sure you have turned the page upside-down) is scale degree 5 of the C major scale. *WRITE* the letter name for this note in the box in the next section to the left. Its scale has also already been filled in.
2. *COUNT* to the fifth note in the new scale, *WRITE* its letter name in the next box and *MARK* the notes of its scale with dots on the keyboard. *CHECK* to see that the first note is the same as the last.
3. *PROCEED* in this way until you have gone all the way around the circle and arrived at the C scale again. *ROTATE* the book as you work. When you reach sections of the circle with two boxes for key notes, *FILL IN* enharmonically equivalent key notes.

Incredibly all 12 different notes on the keyboard will have been used once and only once as key notes, and the original key note, C, will be the fifth note of the previous scale. In this way you will have completed a true circle—the circle of fifths.

4.5 page 2

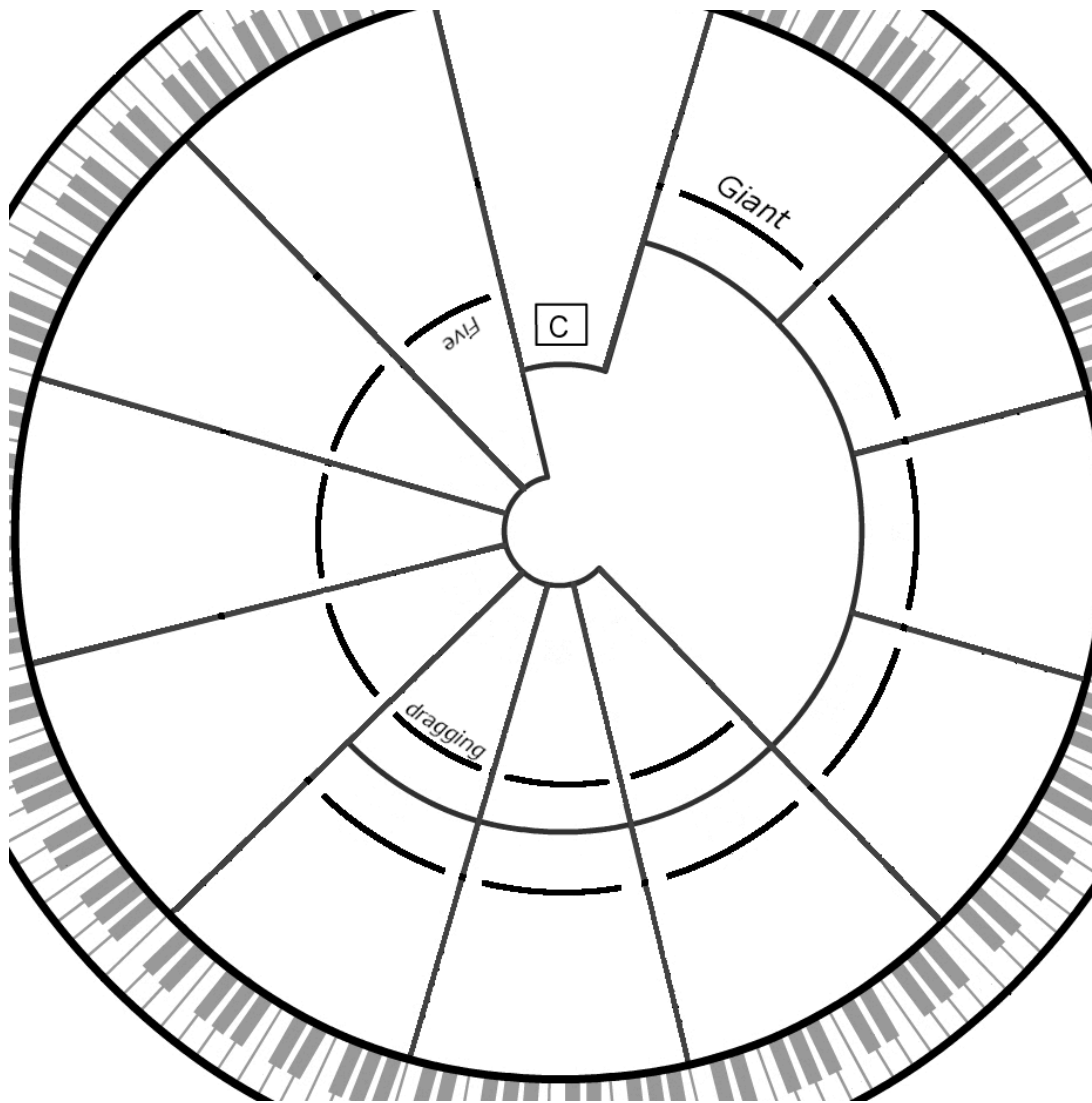
TURN THE PAGE UPSIDE-DOWN!



4.6 Write phrases to memorize keynotes in the circle of fifths

- A piece based on a certain scale and key note is said to be in a certain key. The terms “key” and “key note” are often interchangeable.
- Memorize the order of keys in the circle of fifths by remembering the two phrases below. The first letter of each word is the letter of a key.

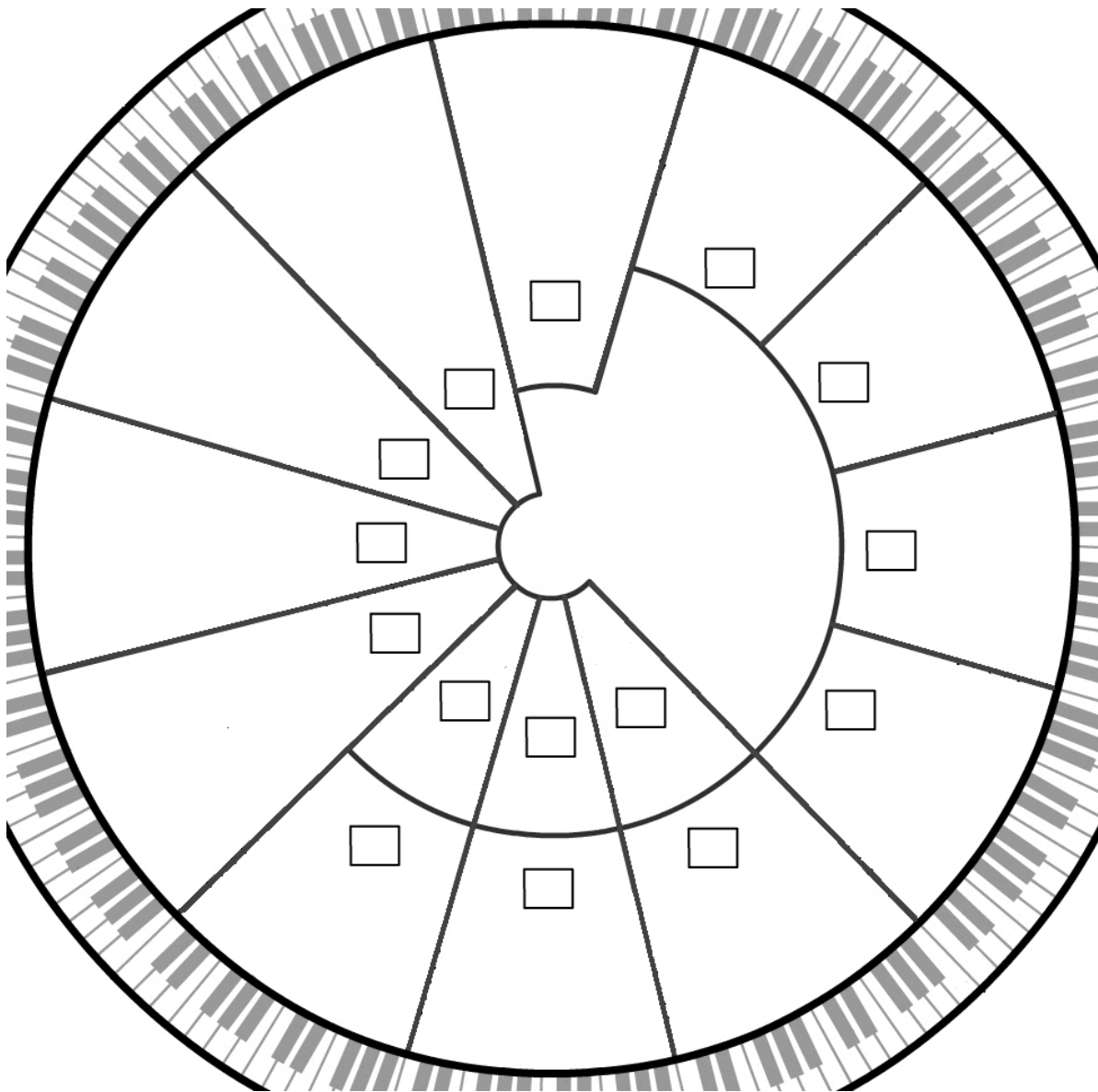
1. *COMPLETE* the phrases, “Giant Dogs Always Eat Before Furry Cats” and
“Five Big Elephants Are Drugging Garbage Cans”
which begin in the top right and left portions of the circle below.
DO NOT DRAW dots on the keyboard.



4.7 Fill in the keys, in order, on the circle of fifths

REWRITE the keys in the circle of fifths as you did on worksheet 4.5. This time use the phrases on worksheet 4.6 to help. Also remember that many keys have flats or sharps next to them.

DO NOT DRAW dots on the keyboard.



4.8 Write major scales on the staff

Writing a D \flat Major scale

Step 1 Step 2

Step 3 Step 4

1 2 3 4 5 6 7 8
W W H W W W H

1 2 3 4 5 6 7 8
W W H W W W H

- Given a key note, be able to write its major scale on a staff.

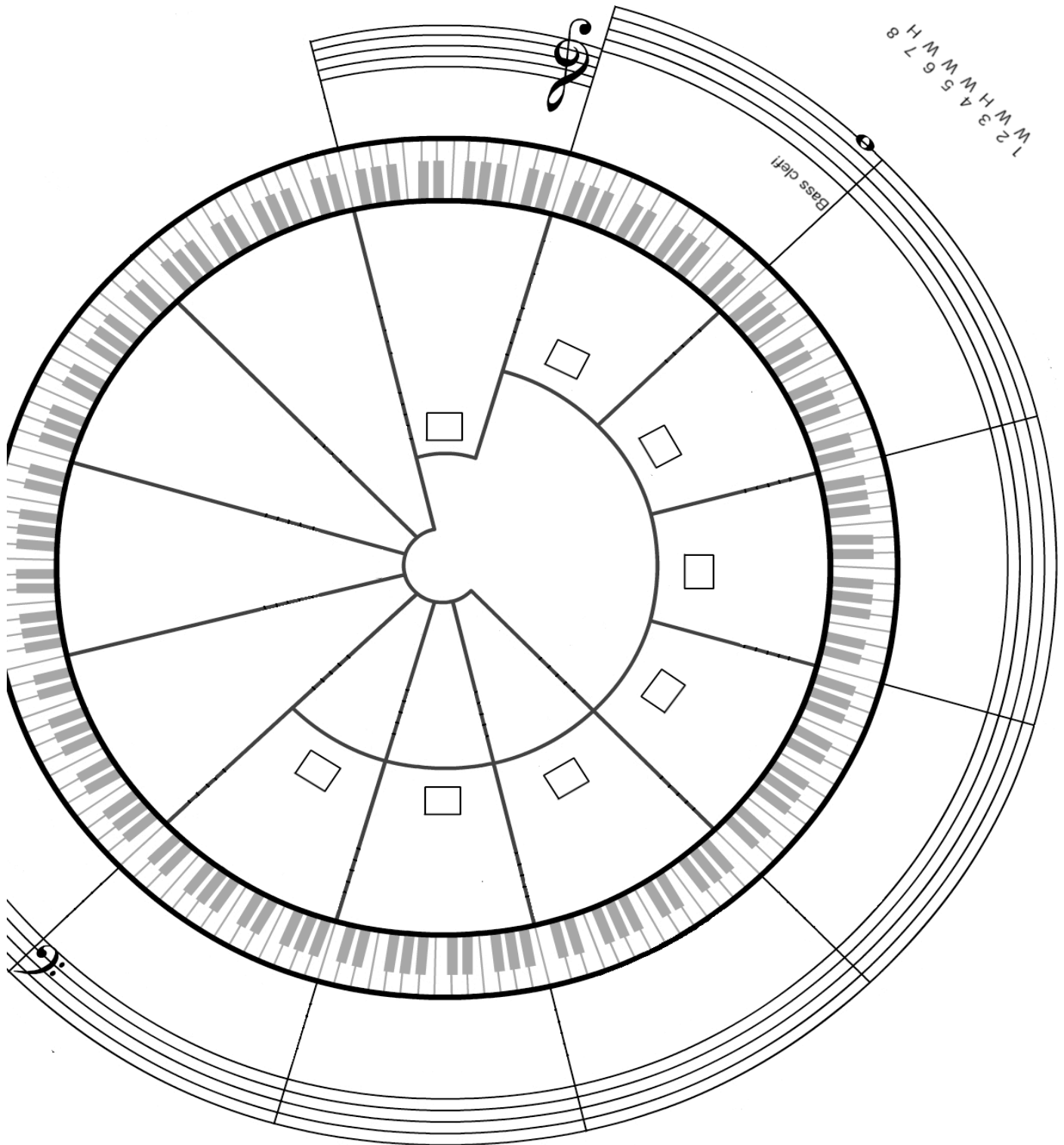
- DRAW* eight note heads in ascending order beginning with the key note. Do not skip any lines or spaces. Leave enough room between notes to insert sharps or flats.
 - CHECK* that the first note has the same letter name as the last.
 - If the key note has a sharp or flat, *DRAW* a sharp or flat to the left of the first and last notes.
- WRITE* the numbers 1 to 8 below the notes.
- WRITE* W's and H's between the numbers in the pattern of whole and half steps which you have learned for major scales.
- DRAW* a sharp or flat in front of each note, if needed, to correspond to the pattern of whole and half steps between the numbers.

WRITE these scales.

4.9 Write the sharp scales on a staff in the circle of fifths

- The scales on the right and bottom of the circle of fifths have sharps

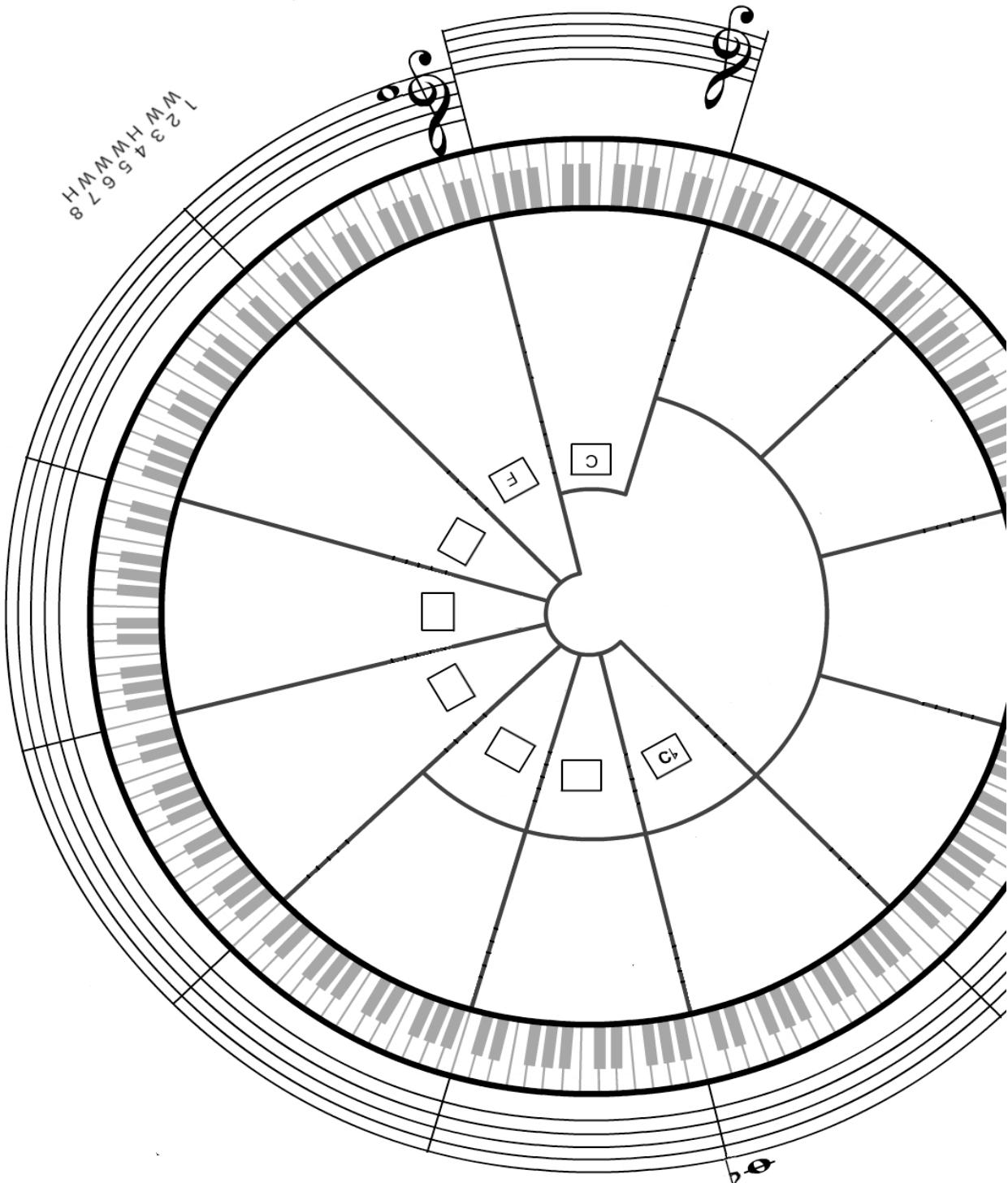
WRITE scales on the circular staff. Arrange scales according to keys on the circle of fifths. You may use dots on the keyboard. Notice the number of sharps in each scale.



4.10 Write the flat scales on a staff in the circle of fifths

- The scales on the left and bottom of the circle of fifths have flats.

WRITE the scales which have flats on the circular staff. Arrange scales according to keys on the circle of fifths. Notice how many flats are in each scale.



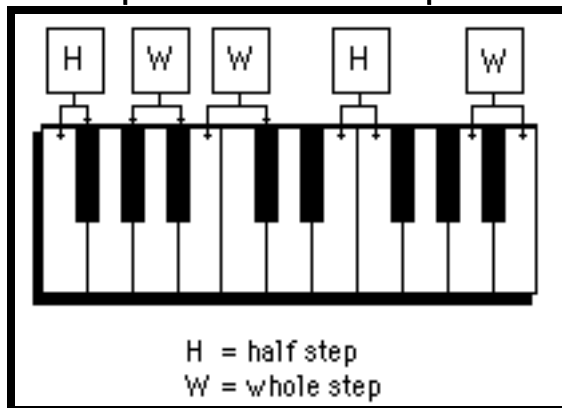
Chapter 4 Expanded. Major Scales and the Circle of Fifths

In this chapter you will:

1. Identify half steps and whole steps on the keyboard
2. Identify half steps and whole steps on the staff
3. Write half steps and whole steps on the staff
4. Mark the notes of major scales on the keyboard
5. Mark the notes of major scales on a keyboard in the circle of fifths
6. Write phrases to memorize keynotes in the circle of fifths
7. Fill in the keys, in order, on the circle of fifths
8. Write major scales on the staff
9. Write the sharp scales on a staff in the circle of fifths
10. Write the flat scales on a staff in the circle of fifths

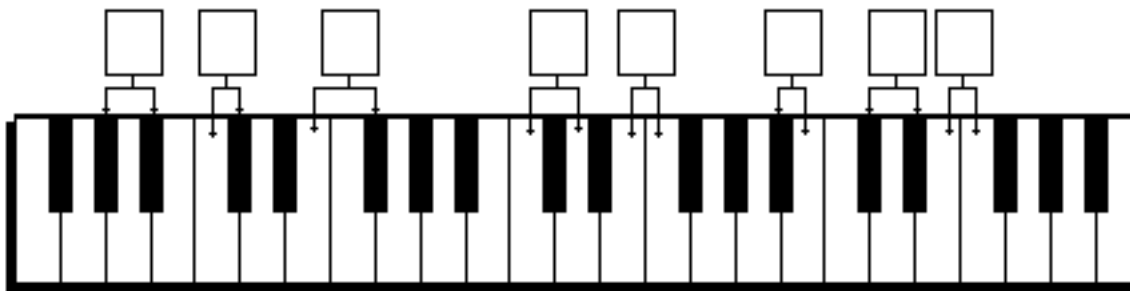
Note: Extra pages have been inserted in this expanded version of Chapter 4.

4Ex.1 Identify half steps and whole steps on the keyboard




- A half step is the closest possible distance between two notes. There can be no notes in between two notes which are separated by a half step.
- A whole step is a distance between two notes such that there is one and only one other note between those two notes.

IDENTIFY the distances on the keyboard below as “H” for half step or “W” for whole step.



Chapter 4, Expanded: Major Scales and the Circle of Fifths

4Ex.2 Identify half steps and whole steps on the staff



• The staff by itself does not show half step and whole step relationships. See the illustration above. To find half steps and whole steps on the staff, refer to the keyboard.

1. FILL IN the letter names for the white keys on this keyboard.



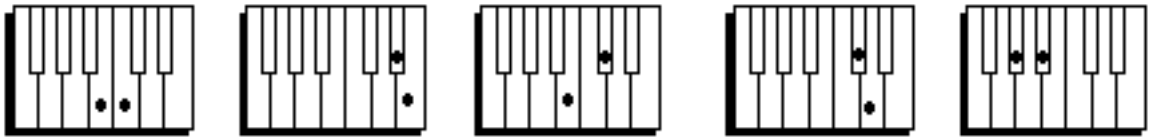
2. IDENTIFY the pairs of notes as separated by either a half step (H), or a whole step (W), or as being enharmonic equivalents (E).

Example

Chapter 4, Expanded: Major Scales and the Circle of Fifths

4Ex.3 Practice recognizing whole steps and half steps

1. a. Label the pairs of notes on the keyboards as separated by half or whole steps.
- b. Write the letter names for both notes, including flats and sharps.
- c. Draw the notes on the staves below.



a. half or whole? _____

b. letters: _____



2. a. Write the letters, including flats and sharps, for the pairs of notes on the staff.
If the two notes refer to the same key, put two dots on that key.
- b. Draw dots on the keyboard for each note.
- c. Identify the pair of notes as enharmonics (E) or as separated by a half step (H), a whole step (W).



a. letters: _____



c. half, whole or enharmonic? _____

3. Identify the following pairs of notes as separated by whole steps (W), half steps (H) or as being enharmonics (E). You must refer to a keyboard.



Chapter 4, Expanded: Major Scales and the Circle of Fifths

4Ex.4 Write half steps and whole steps on the staff

- A sharp or flat applies to the note which follows it AND all the following notes of the same letter name in the measure.

1. IDENTIFY the bracketed pairs of notes as separated by either a half step (H), or a whole step (W). Refer to the keyboard.

Joy to the world, the Lord is come. Let earth re-ceive her king.

The staff shows a sequence of notes with brackets above them. A box labeled "still sharp" points to a sharp sign on a note.



2. WRITE notes which are a half step up or down, or a whole step up or down from the given note.

Example

half step up half step down whole step up whole step down half step up

half step down whole step up whole step down half step up half step up

Chapter 4, Expanded: Major Scales and the Circle of Fifths

4Ex.6 Mark the notes of major scales on the keyboard

J. S. Bach: Minuet in G

key note

key note

W W H W W W H

W = whole step

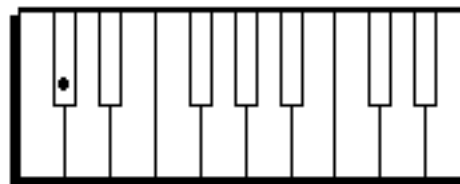
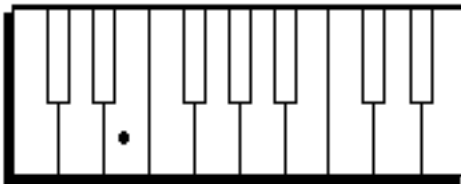
H = half step

W W H W W W H

- A key note is the most important note of a piece of music. Pieces almost always end on the key note.
- If eight notes of a piece are arranged in order without skipping lines or spaces and if the first note is the key note, then the notes form a scale.
- A major scale is eight notes in ascending order which are separated from each other according to this pattern:

1	2	3	4	5	6	7	8
whole	whole	half	whole	whole	whole	whole	half
step	step	step	step	step	step	step	step

DRAW dots on the following keyboards for each note of a major scale. The key note is given.

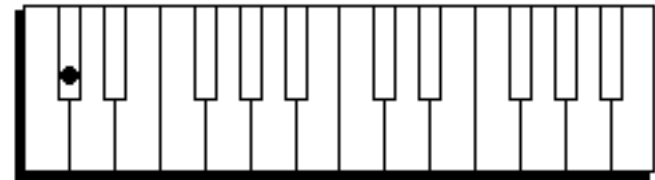
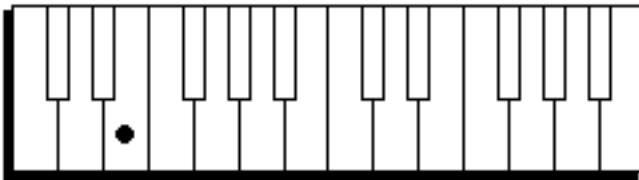
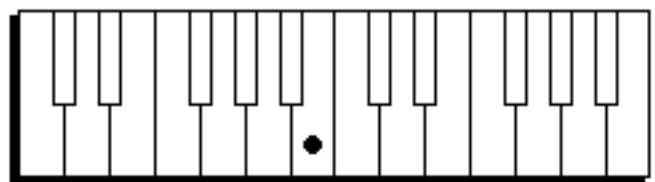
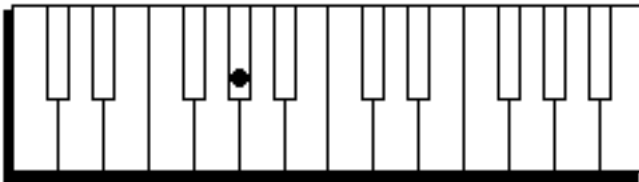


4Ex.7 Practice marking major scales on the keyboard

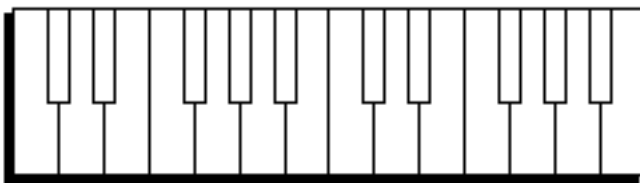
1. Write the sequence of whole steps (W) and half steps (H) between the numbers for the notes of the scale:

1 2 3 4 5 6 7 8

2. Write dots on the keys for the notes of scales. The given dot is the first note.



3. Write a scale beginning with the note A.



♪ Chapter 4, Expanded: Major Scales and the Circle of Fifths ♪
4Ex.8, page 1 Mark scale degrees on a keyboard in the circle of fifths
TURN THE BOOK (OR PAGE 7) UPSIDE-DOWN!

- Each note of a scale is called a scale degree. Scale degree 1 is the key note.
 - If scales are written clockwise on a circular keyboard or staff, and if the keynote of each scale begins on scale degree 5 of the previous scale, then the keynotes follow an order called the circle of fifths.
-

DRAW dots for the notes of every scale on the circular keyboard on the next page. The C major scale has already been marked where it says “START HERE.” Notice that if the key note is C, then the major scale pattern

1	2	3	4	5	6	7	8
W	W	H	W	W	W	H	

results in all white keys.

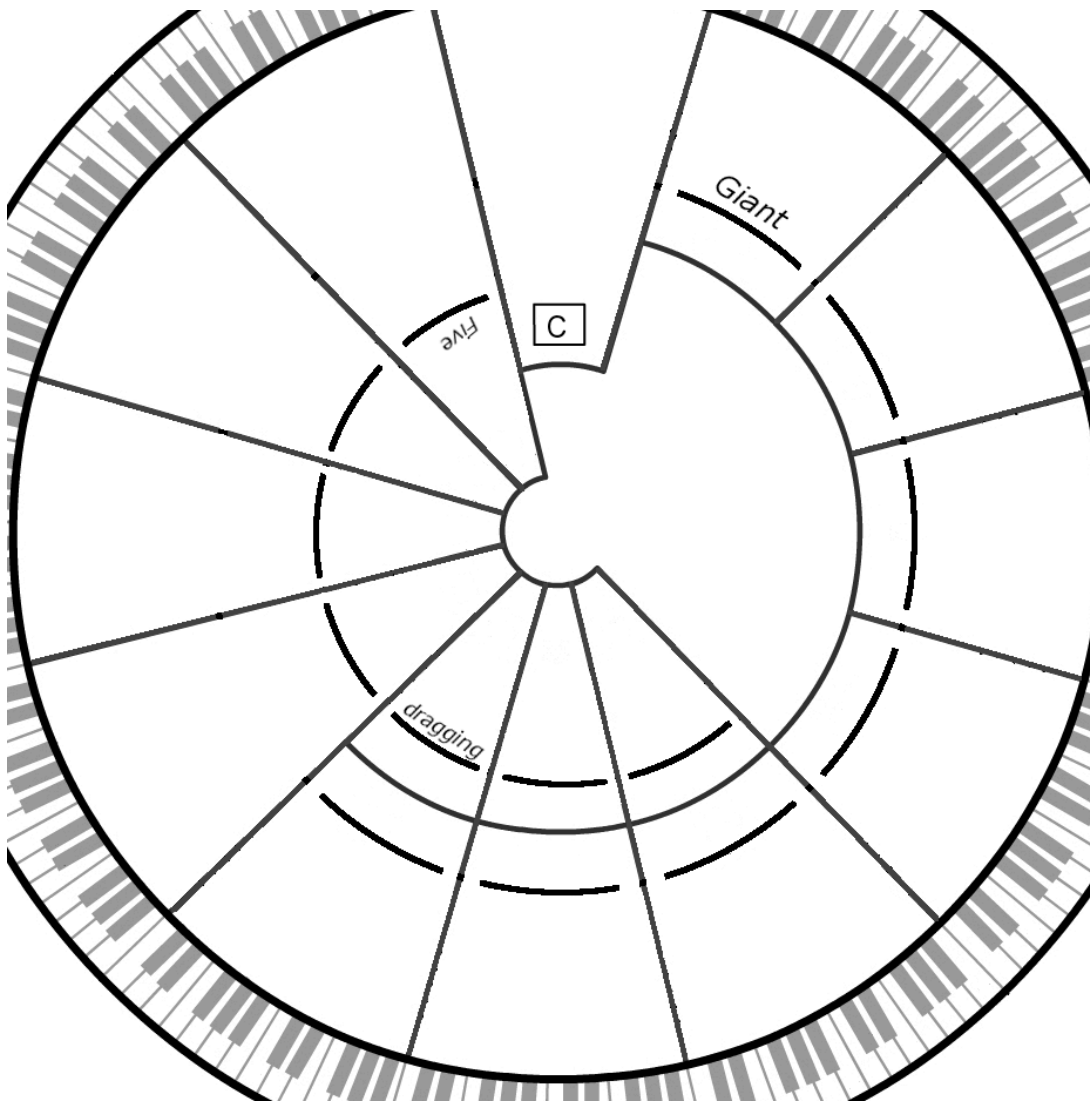
1. The key note of the next scale to the left (be sure you have turned the page upside-down) is scale degree 5 of the C major scale. WRITE the letter name for this note in the box in the next section to the left. Its scale has also already been filled in.
2. COUNT to the fifth note in the new scale, WRITE its letter name in the next box and MARK its scale with dots on the keyboard. CHECK to see that the first note is the same as the last.
3. PROCEED in this way until you have gone all the way around the circle and arrived at the C scale again. ROTATE the book as you work. When you reach sections of the circle with two boxes for key notes, FILL IN enharmonically equivalent key notes.

Incredibly all 12 different notes on the keyboard will have been used once and only once as key notes, and the original key note, C, will be the fifth note of the previous scale. In this way you will have completed a true circle—the circle of fifths.

Chapter 4, Expanded: Major Scales and the Circle of Fifths
4Ex.9 Write phrases to memorize keynotes in the circle of fifths

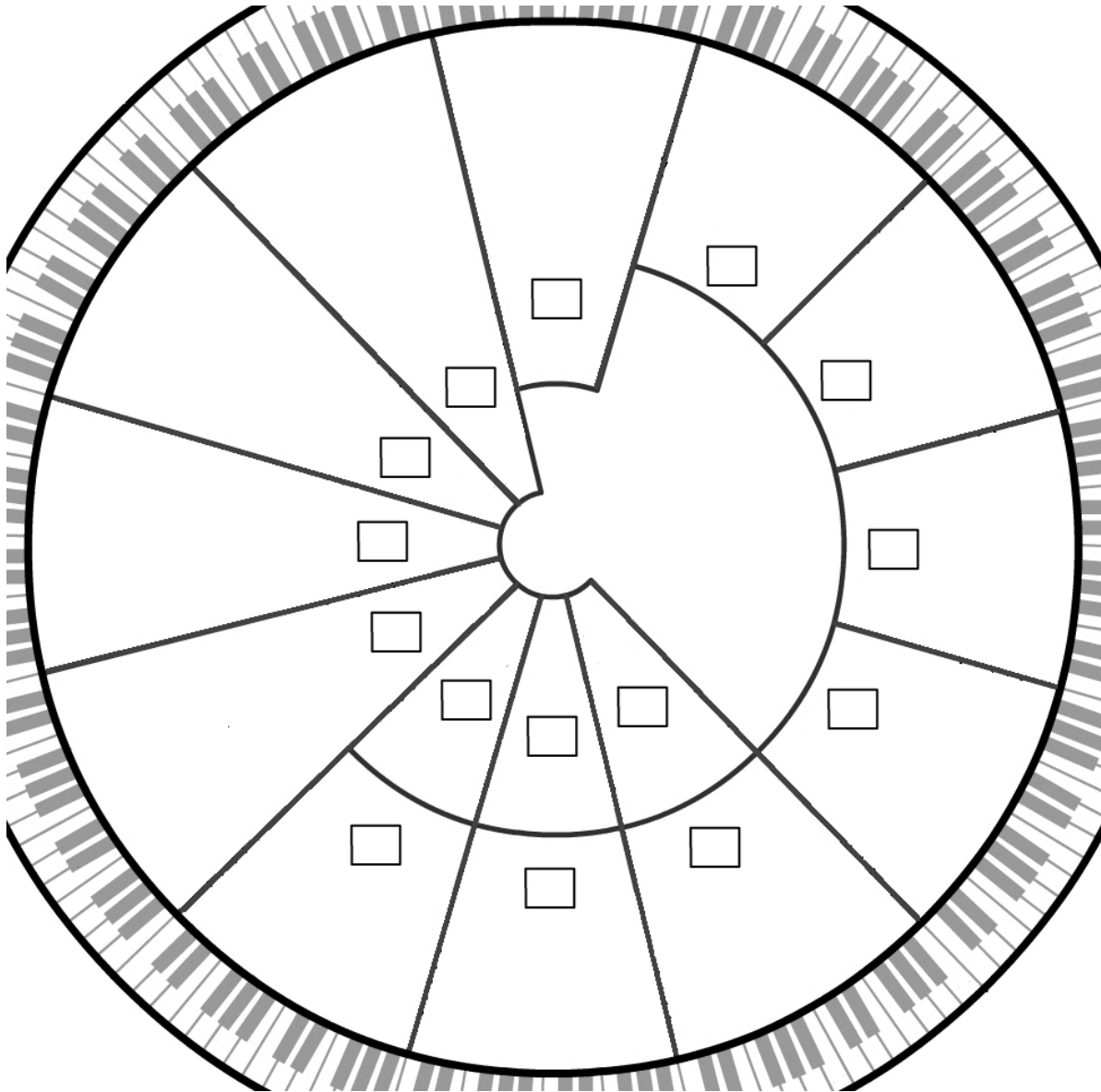
- A piece based on a certain scale and key note is said to be in a certain key. The terms “key” and “key note” are often interchangeable.
- Memorize the order of keys in the circle of fifths by remembering the two phrases below. The first letter of each word is the letter of a key.

1. COMPLETE the phrases, “Giant Dogs Always Eat Before Furry Cats” and
“Five Big Elephants Are Drugging Garbage Cans”
which begin in the top right and left portions of the circle below.
DO NOT DRAW dots on the circular keyboard.



4Ex.10 Fill in the keys, in order, on the circle of fifths

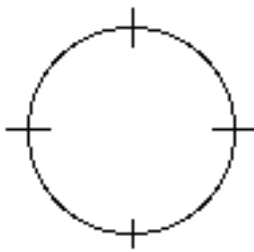
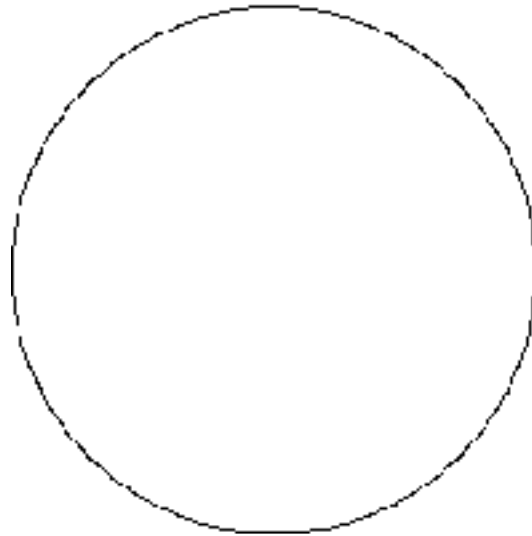
REWRITE the keys in the circle of fifths as you did on worksheet 4.5. This time use the phrases on worksheet 4.6 to help. Also remember that many keys have flats or sharps next to them.



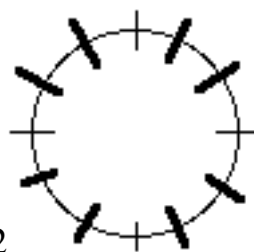
Chapter 4, Expanded: Major Scales and the Circle of Fifths

4Ex.11 Make your own circle of fifths

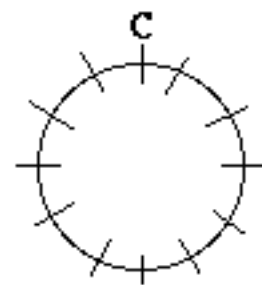
Draw a circle of fifths on the circle below. See instructions at the bottom of the page.



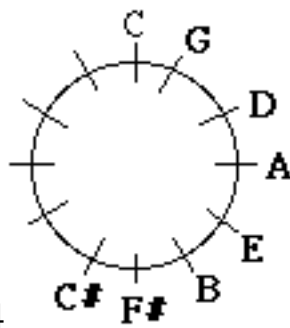
Step 1



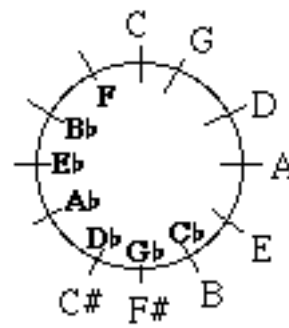
Step 2



Step 3



Step 4



Step 5

Instructions. Imagine the circle is a clock and refer to the above drawings.

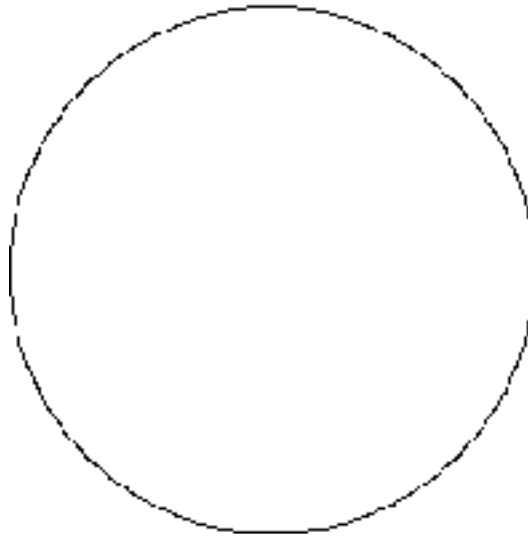
1. Draw slashes on the circle at 12:00, 3:00, 6:00 and 9:00.
2. Put two more slashes evenly spaced between each of the slashes you have just drawn.
3. Write a “C” above the slash at the top--at 12:00.
4. Write the sharp keys around the outside of the circle. G is at 1:00 and C# is at 7:00.
5. Write the flat keys inside the circle. F is at 11:00 and Cb is at 5:00.

4Ex.12 Review your work to here

1. Write the saying for memorizing the sharp keys on the circle of fifths.

2. Write the saying for memorizing the flat keys on the circle of fifths.

3. Draw a circle of fifths.



Review

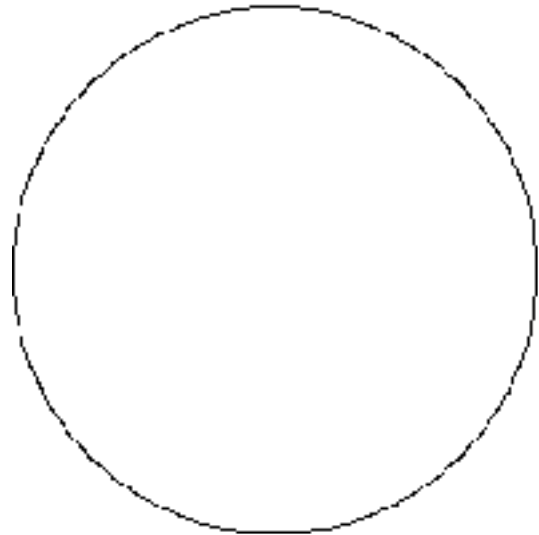
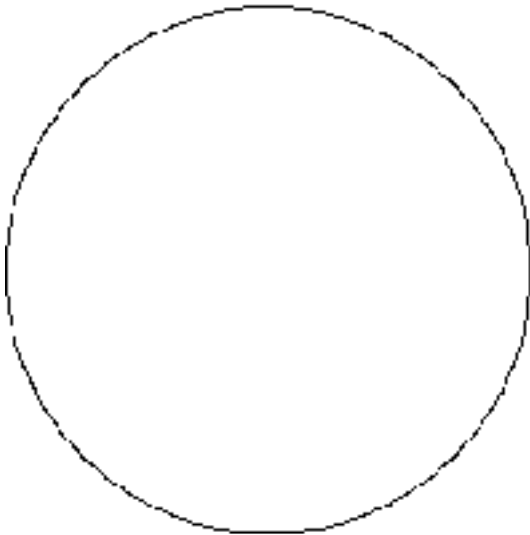
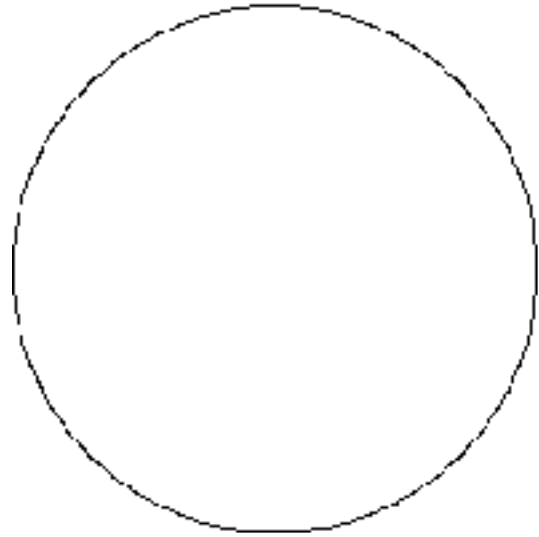
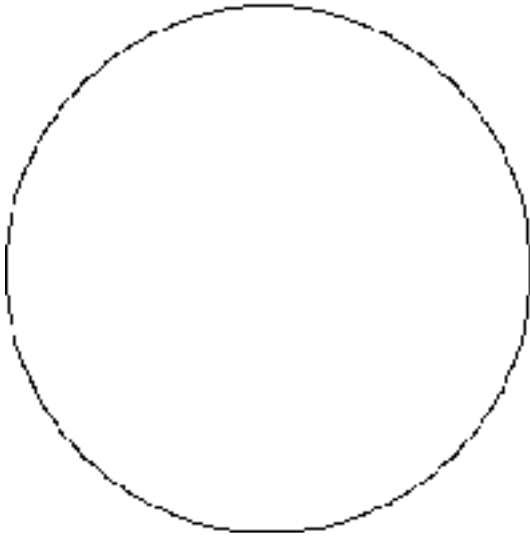
1. Write the saying for memorizing the lines on treble clef.

2. Write the word for memorizing the spaces on treble clef

3. Write the saying for memorizing the lines on bass clef

4. Write the saying for memorizing the spaces on bass clef


4Ex.13 Practice drawing circles of fifths




Chapter 4, Expanded: Major Scales and the Circle of Fifths
 4Ex.14 Write major scales on the staff

Writing a D \flat Major scale

Step 1




Step 2



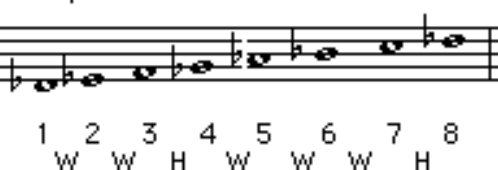
1 2 3 4 5 6 7 8

Step 3




1 2 3 4 5 6 7 8
 W W H W W W H

Step 4



1 2 3 4 5 6 7 8
 W W H W W W H



- Given a key note, be able to write its major scale on a staff.

- DRAW eight note heads in ascending order beginning with the key note. Do not skip any lines or spaces. Leave enough room between notes to insert sharps or flats.
 - CHECK that the first note has the same letter name as the last.
 - If the key note has a sharp or flat, DRAW a sharp or flat in front of the first and last notes.
- WRITE the numbers 1 to 8 below the notes.
- WRITE W's and H's between the numbers in the pattern of whole and half steps which you have learned for major scales.
- DRAW a sharp or flat in front of each note, if needed, to correspond to the pattern of whole and half steps between the numbers.

WRITE these scales.

B



E \flat

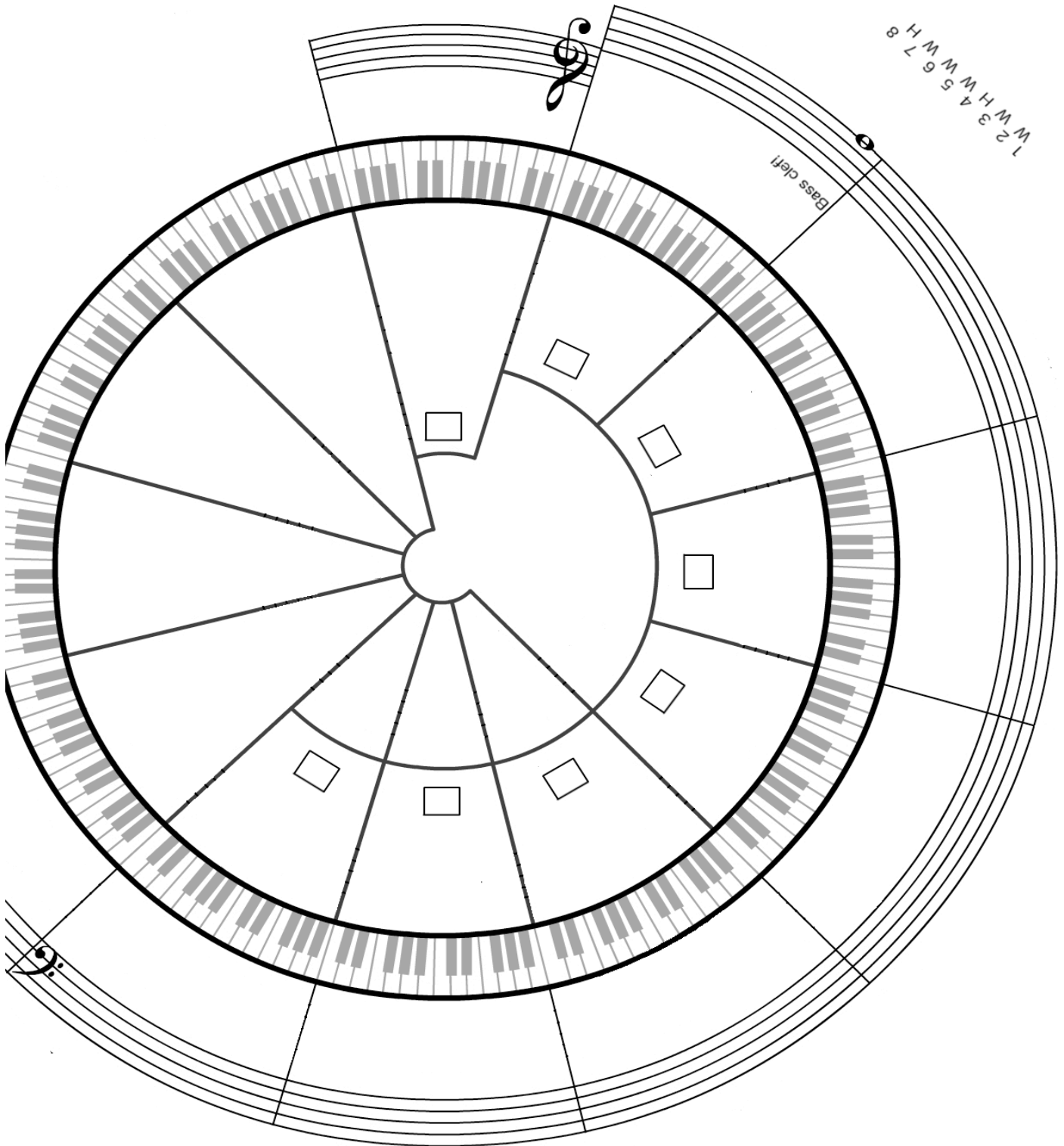


Chapter 4, Expanded: Major Scales and the Circle of Fifths

4Ex.15 Write the sharp scales on a staff in the circle of fifths

- The scales on the right and bottom of the circle of fifths have sharps

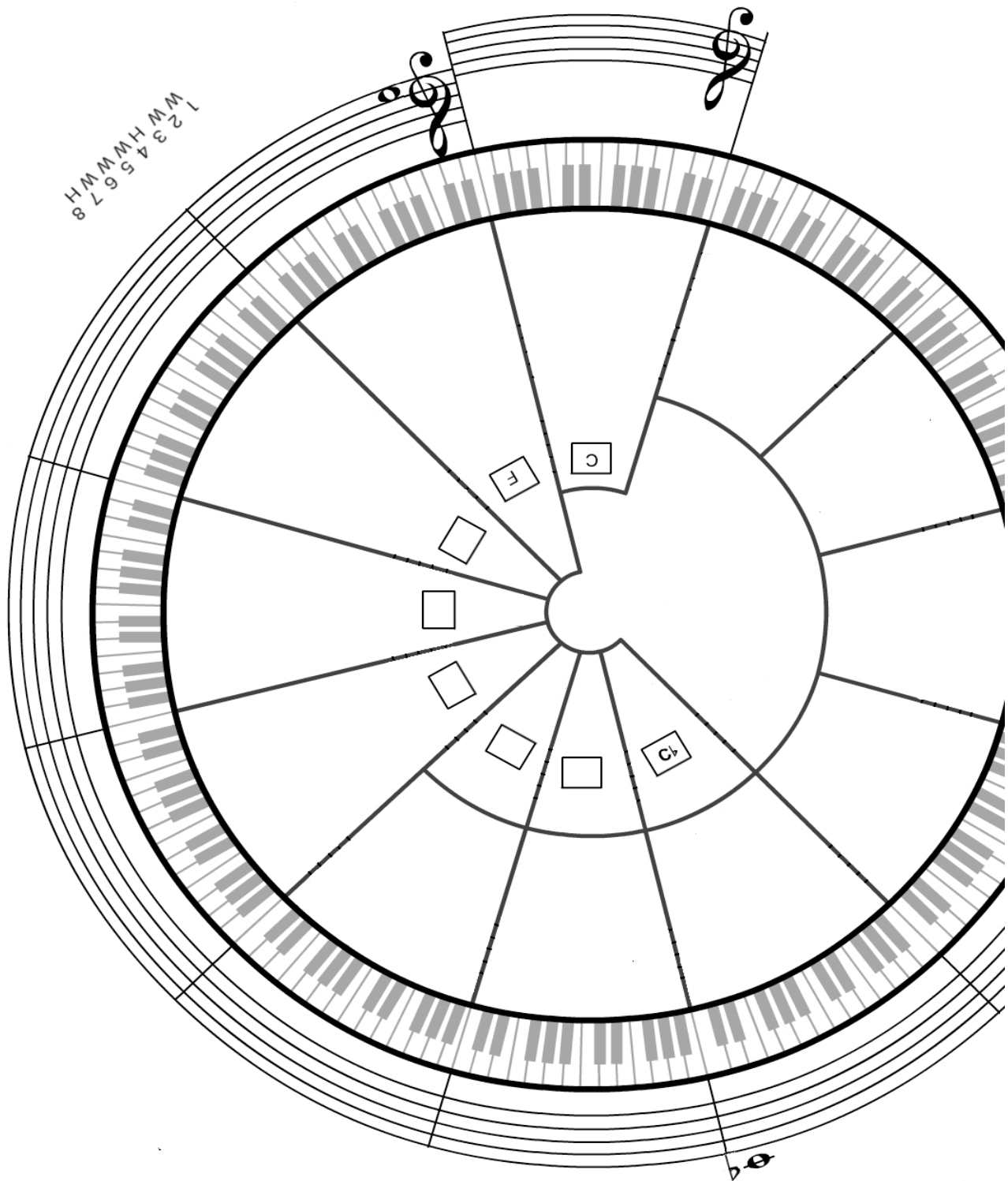
WRITE scales on the circular staff. Arrange scales according to keys on the circle of fifths. You may use dots on the keyboard. Notice the number of sharps in each scale.



Chapter 4, Expanded: Major Scales and the Circle of Fifths
4Ex.16 Write the flat scales on a staff in the circle of fifths

- The scales on the left and bottom of the circle of fifths have flats.

WRITE the scales which have flats on the circular staff. Arrange scales according to keys on the circle of fifths. Notice how many flats are in each scale.



Chapter 5. Key Signatures

In this chapter you will:

- | | |
|---|--|
| 1. Identify the notes affected by a key signature | 6. Relate the order of sharps to the order of keys |
| 2. Number the sharps and flats in each key | 7. Relate the order of flats to the order of keys |
| 3. Name the key given its key signature | 8. Write key signatures in treble clef |
| 4. Use some tricks to find the key | 9. Write key signatures in bass clef |
| 5. Write scales given their key signatures | 10. Write scales given their key note |

Date:

5.1 Identify the notes affected by a key signature

key signature

America the Beautiful

The above is played with the sharps shown below.

still sharp

• Sharps and flats are not usually written next to every note which is played sharp or flat. Instead these sharps and flats are indicated by a key signature. A key signature is a group of sharps or flats at the beginning of a staff which indicates the notes which are to be played sharp or flat in the following music. See the illustration above.

- The sharps or flats in a key signature are the same as those of a scale.
- Sharps and flats in the key signature apply to all notes with the same letter name regardless of octave.
- Recall that in the second measure of the bottom staff above, the second middle C is still sharp. See worksheet 4.3.

DRAW flats to the left of notes which are to be played flat according to the key signature.

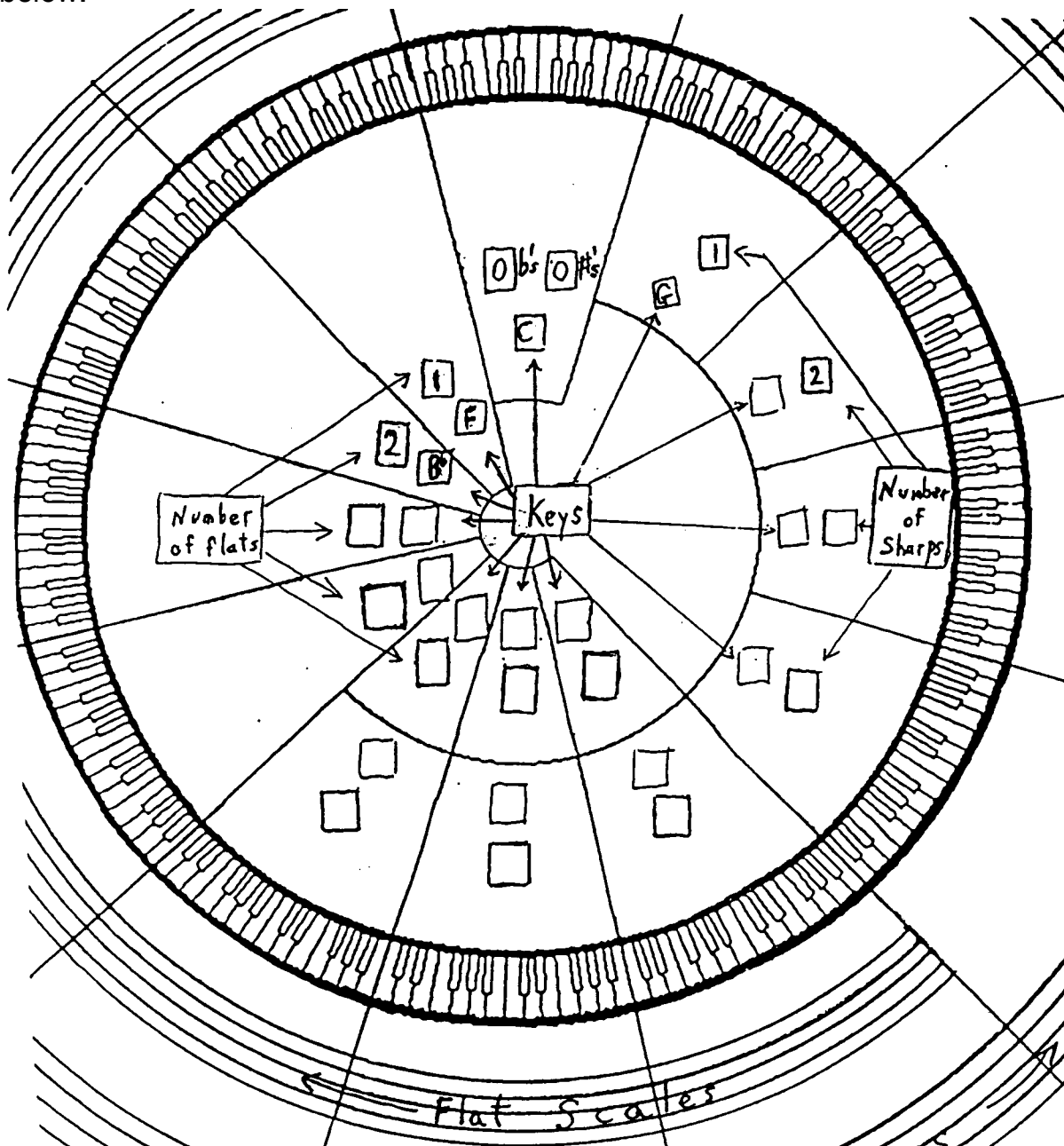
flat not needed

Date:

5.2 Number the sharps and flats in each key

- The number of sharps in a scale increases by one proceeding clockwise around the circle of fifths, and
- The number of flats in a scale increases by one proceeding counter-clockwise around the circle of fifths. See worksheets 4.9 and 4.10.

FILL IN the keys and the number of sharps or flats for each key in the boxes below.



Date:

5.3 Name the key given its key signature

Name the key:

The image shows a musical staff with six flats (Bb, Eb, Ab, Db, Gb, Cb). Below the staff, the words "Funny Boys Eat Apples During Geometry..." are written, with numbers 1 through 6 above each word. An arrow points from the number 6 to the text "= 6 flats" and another arrow points from the number 6 to the text "The key is G flat."

- To name a key given its key signature:
 - a. COUNT the number of flats or sharps in the key signature.
 - b. SAY the phrase “Five Big Elephants ...” for flats, or “Giant Dogs Always ...” for sharps while counting the words on your fingers.
 - c. STOP when you have said as many words as there are sharps or flats in the key signature. The last word gives the key.

1. NAME the keys for the following key signatures.

A musical staff showing five key signatures: one sharp (F#), two sharps (F#, C#), two flats (Bb, Eb), three flats (Bb, Eb, Ab), and two sharps (F#, C#).

A musical staff showing six key signatures: one flat (Bb), two flats (Bb, Eb), three flats (Bb, Eb, Ab), two sharps (F#, C#), three sharps (F#, C#, G#), and two flats (Bb, Eb).

2. For the following, say one of the two phrases while counting on your fingers until you have reached the appropriate word.

a. How many sharps are there in the key of B? _____

b. How many flats are there in the key of G ? _____

Date:

5.4 Use some tricks to find the key

- For flat key signatures the key is the next-to-the-last flat.
- For sharp key signatures the key is a half step above the last sharp.

1. *CIRCLE* the next to the last flat and NAME the key.

Example

2. *WRITE* the note above the last sharp and NAME the key.

Example

This note and
this key are sharp

3. *GO ONLINE* to www.gmajormusictheory.org

- CLICK* "Music Fundamentals"
- CLICK* in the "Virtual Flash Cards" column:
5.3 Key Signatures, All Major Keys
- PRACTICE* the key signatures you have learned.

Date:

5.5 Write scales given their key signatures

- When the key signature is given, there is no need to figure out half steps and whole steps to write scales.

WRITE these scales

- FIND the key note and WRITE it on the staff with its sharp or flat if needed.
- DRAW the other seven note heads in ascending order. Do not skip any lines or spaces. Leave enough room between notes to insert sharps or flats.
- CHECK that the first note has the same letter name as the last note.
- If the key note has a sharp or flat, DRAW a sharp or flat in front of the last note as well.
- INSERT, next to the affected notes, the sharps or flats which appear in the key signature.

Example



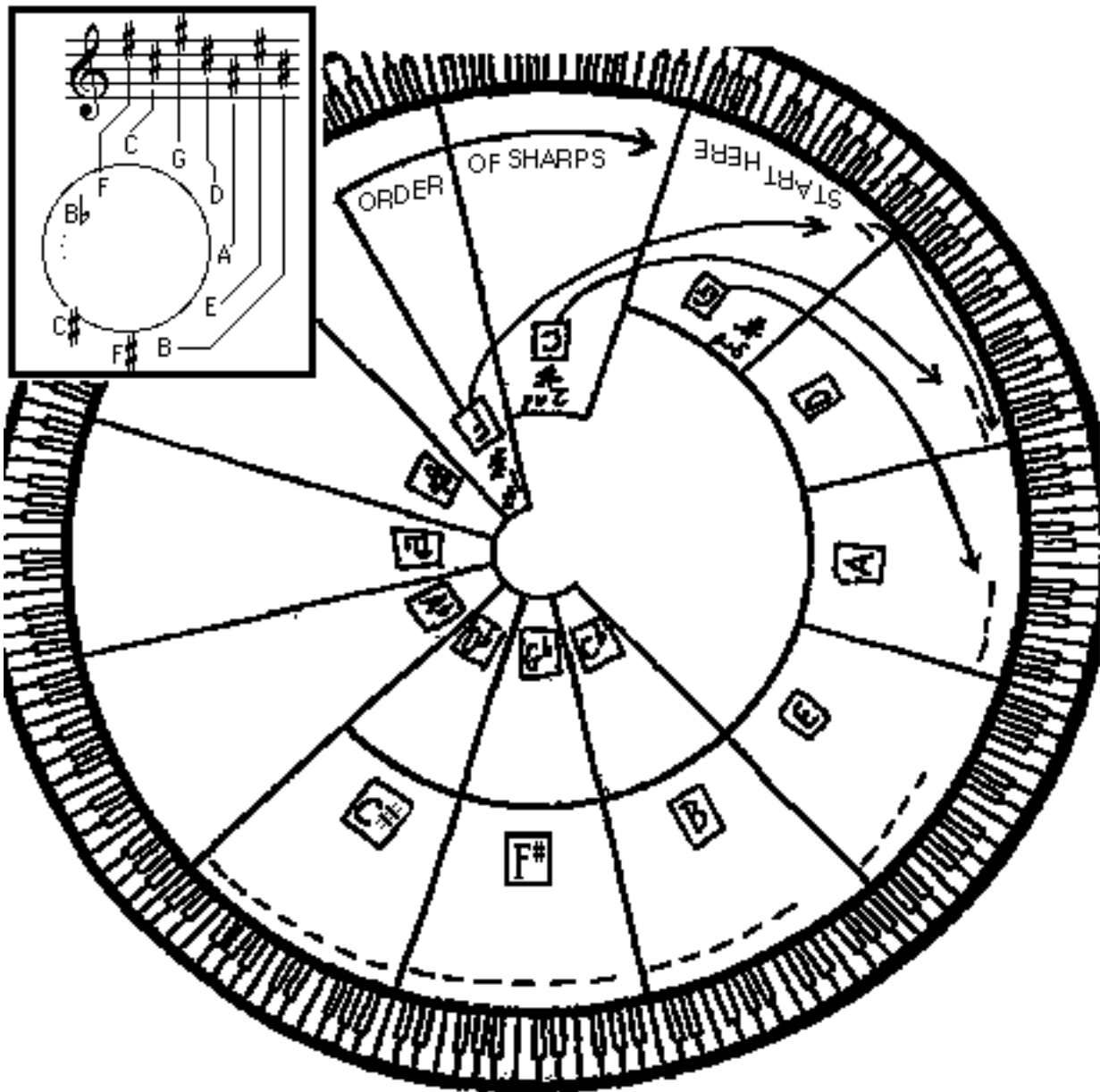
1.	7.
2.	8.
3.	9.
4.	10.
5.	11.
6.	12.

Date:

5.6 Relate the order of sharps to the order of keys

- The order of sharps in key signatures follows the order of keys in the circle of fifths. The letter for the first sharp, F, can be found as a key in the upper left of the circle. The letter for the next sharp, C, can be found as the key next to F proceeding clockwise.

FILL IN the sharps for each sharp key consulting the keys in the circle of fifths.



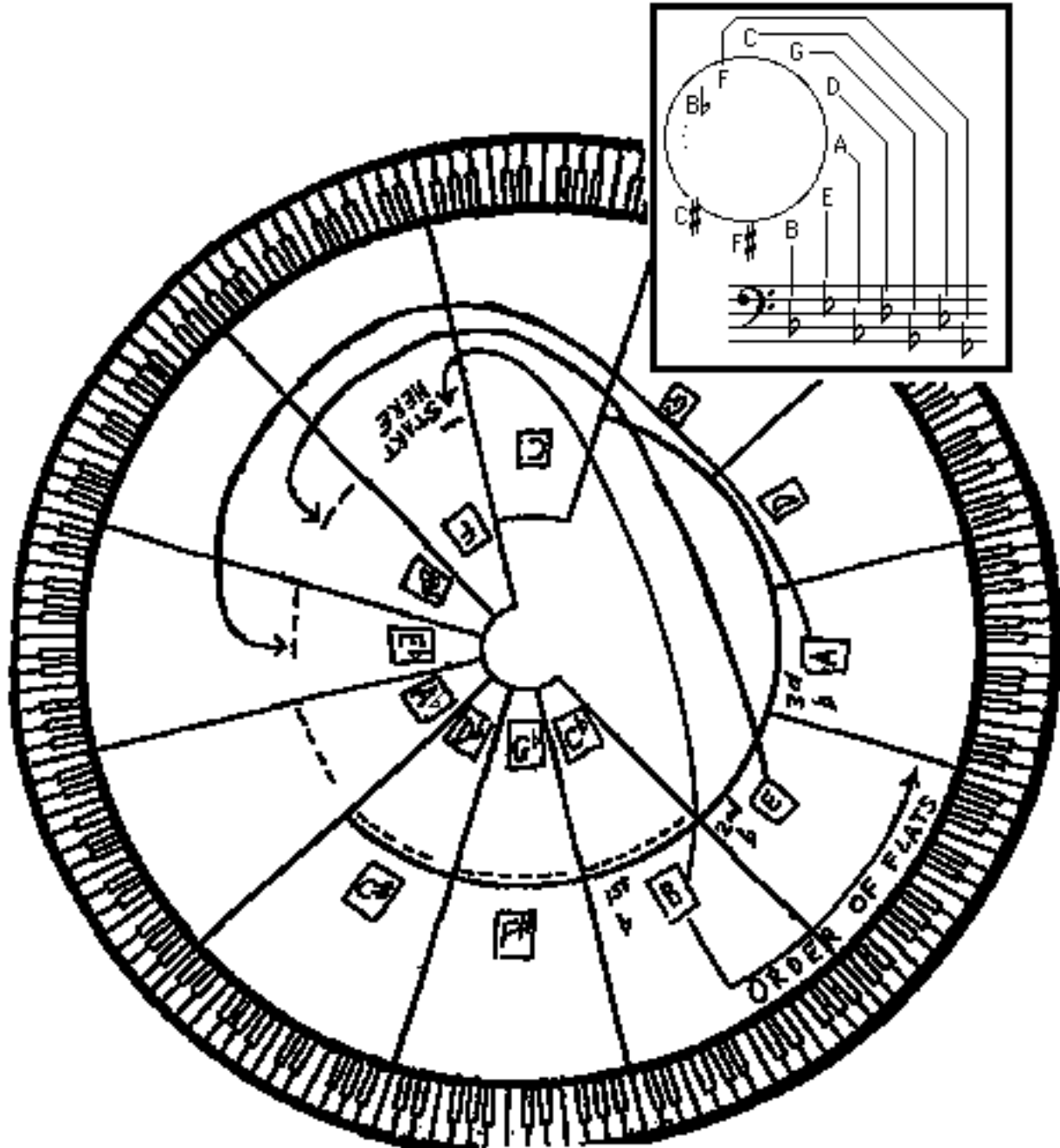
Date:

5.7 Relate the order of flats to the order of keys



- The order of flats in key signatures also follows the order of keys in the circle of fifths.

The letter for the first flat, B, can be found as a key in the lower right of the circle. The letter for the next flat, E, can be found as the key next to B proceeding counter-clockwise.

FILL IN the flats for each flat key consulting the keys in the circle of fifths.



5.8 page 1 Write key signatures in treble clef

C flat key signature	C sharp key signature
	

- Key signatures are ultimately derived from a pattern of whole steps and half steps. This is because key signatures are based on scales, and scales are based on the pattern,

whole whole half whole whole whole half

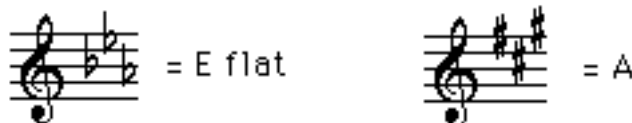
- Sharps and flats in key signatures must be placed in the proper octave on the staff. This placement is illustrated above for the keys of C flat and C sharp.
- The flats can be visualized in pairs, each pair going down a line or space.



- The sharps can be visualized as groups of 2, 3 and 2, each group going up a line or space.



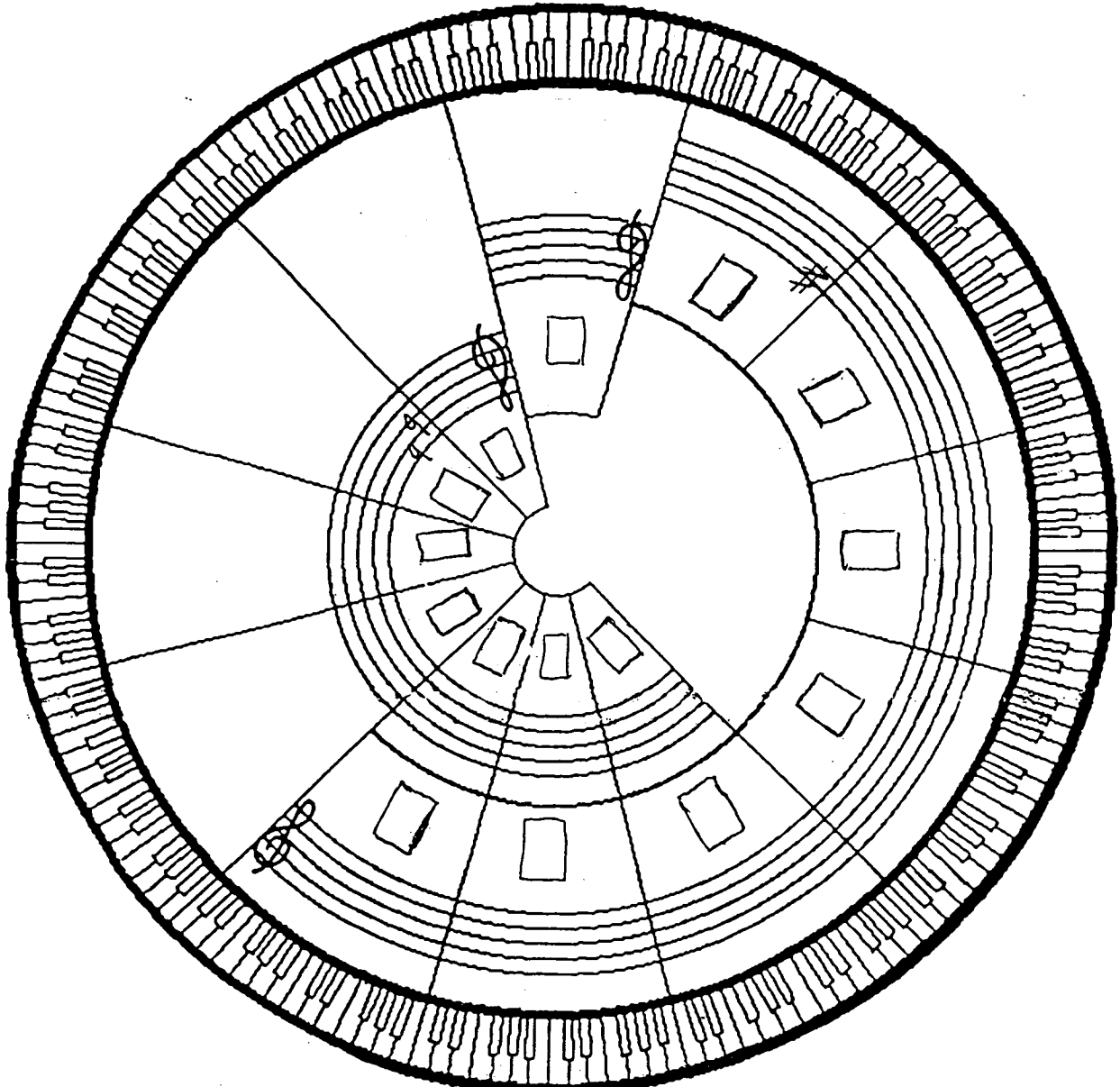
- The placement of sharps and flats is the same for key signatures other than C sharp and C flat.



Date:

5.8 page 2 Write key signatures in treble clef

WRITE all keys in the boxes and all key signatures on the staves. Use the previous page as a guide.

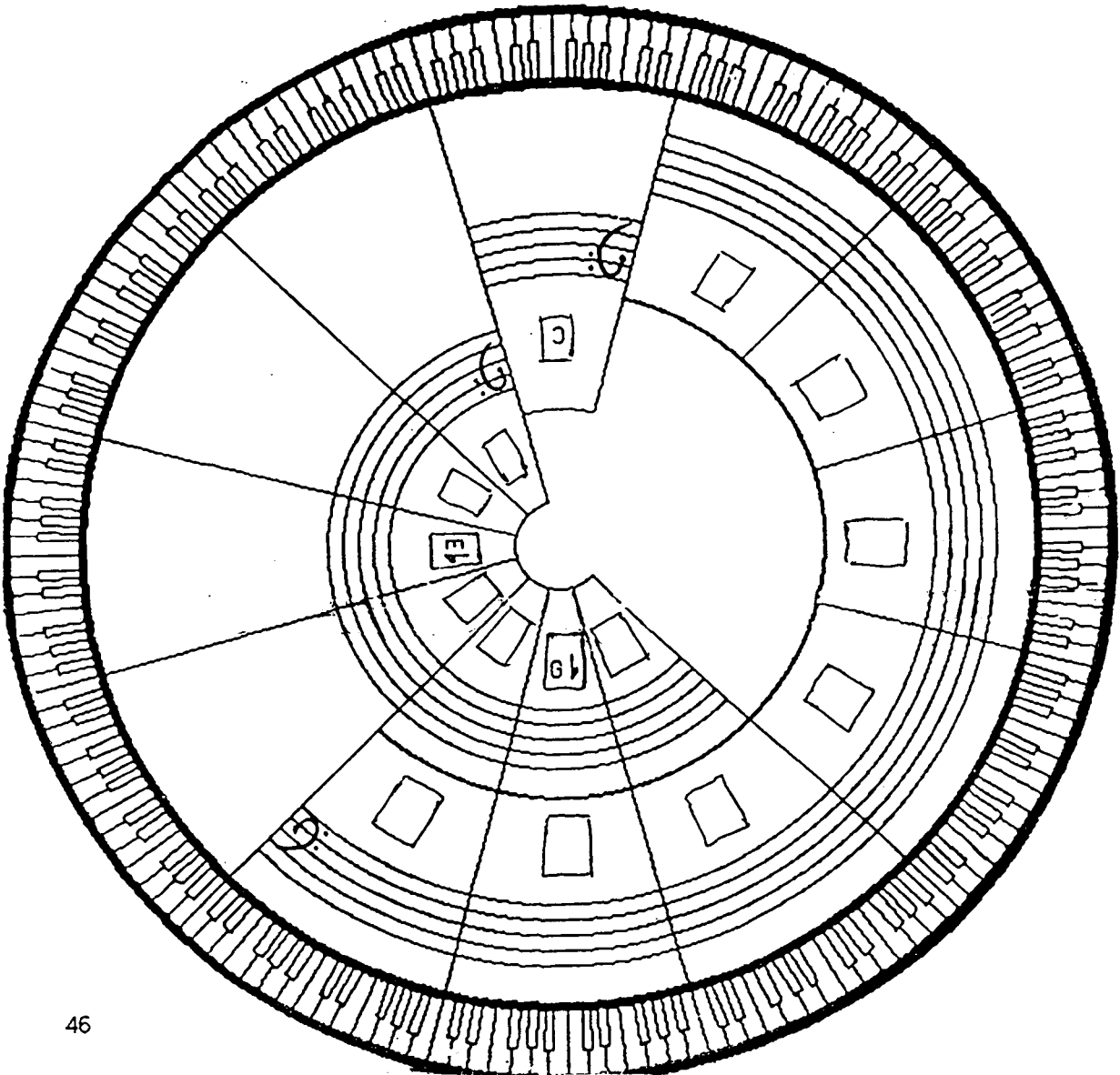


Date:

5.9 Write key signatures in bass clef

	= C flat		= C sharp
--	----------	--	-----------

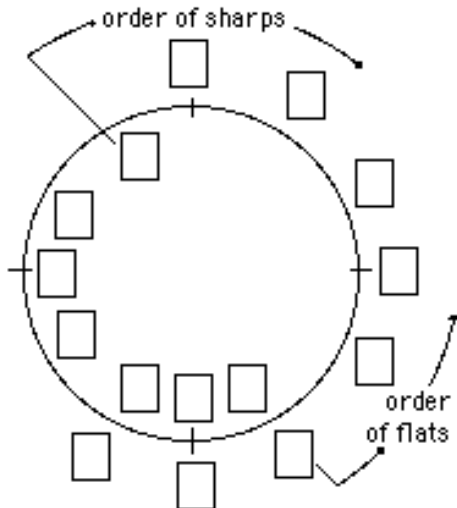
WRITE all keys in the boxes and all the key signatures on the staves. Use the key signatures above, for C flat and C sharp, as a guide.



Date:

5.10 Write scales given their key note

1. FILL IN the keys in the circle of fifths.
2. WRITE the key signatures and scales.



Example: B \flat



4. B

5. A \flat

6. F

7. D

1. E

8. F \sharp

2. G \flat

9. D \flat

3. A

10. E \flat

3. GO ONLINE to www.gmajormusictheory.org
 - a. CLICK "Music Fundamentals"
 - b. CLICK in the "Virtual Flash Cards" column:
 - 5.6 Sharps and Flats in Major Keys
 - c. PRACTICE the key signatures you have learned.

Chapter 6 Natural Minor Scales and Minor Key Signatures

In this chapter you will:

- | | |
|--|--|
| 1. Write the first five notes of a minor scale | 5. Write some minor key signatures |
| 2. Write a natural minor scale | 6. Find relative major and minor keys |
| 3. Write natural minor scales on the circle of fifths, 1 | 7. Write major and minor key signatures |
| 4. Write natural minor scales on the circle of fifths, 2 | 8. Write minor keys on the circle of fifths: |

6.1 Write the first five notes of minor scales

- The Christmas Carol, “We Three Kings” is in a minor key and its notes are taken from a minor scale. Music in minor keys often seems darker, more serious or more exotic than music in major keys.
- There are three minor scales: natural, harmonic and melodic.
- All three minor scales have the same pattern of whole steps and half steps for the first five notes: whole, half, whole, whole (see above).
- As a result of the half step between scale degrees 2 and 3, rather than between 3 and 4 as in major, scale degree 3 is lower in minor than in major. The lower third scale degree gives minor scales their character.

1. *PLAY* the first part of “We Three Kings” in the illustration above. Do you hear a darker, more exotic mood than in previous examples?
2. *WRITE* the first five notes of the following minor scales.
 - a. *DRAW* five notes in ascending order beginning with the key note
 - b. *WRITE* the numbers 1 through 5 beneath the notes.
 - c. *WRITE* the pattern W H W W between the numbers.
 - d. *INSERT* flats or sharps between notes according to the pattern.


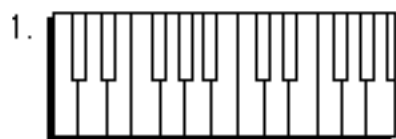
Date:

6.2 Write a natural minor scale

- The notes of “Greensleeves” are taken from the natural minor scale.
- The natural minor scale has this pattern of half steps and whole steps:

1 2 3 4 5 6 7 8
 W H W W H W W

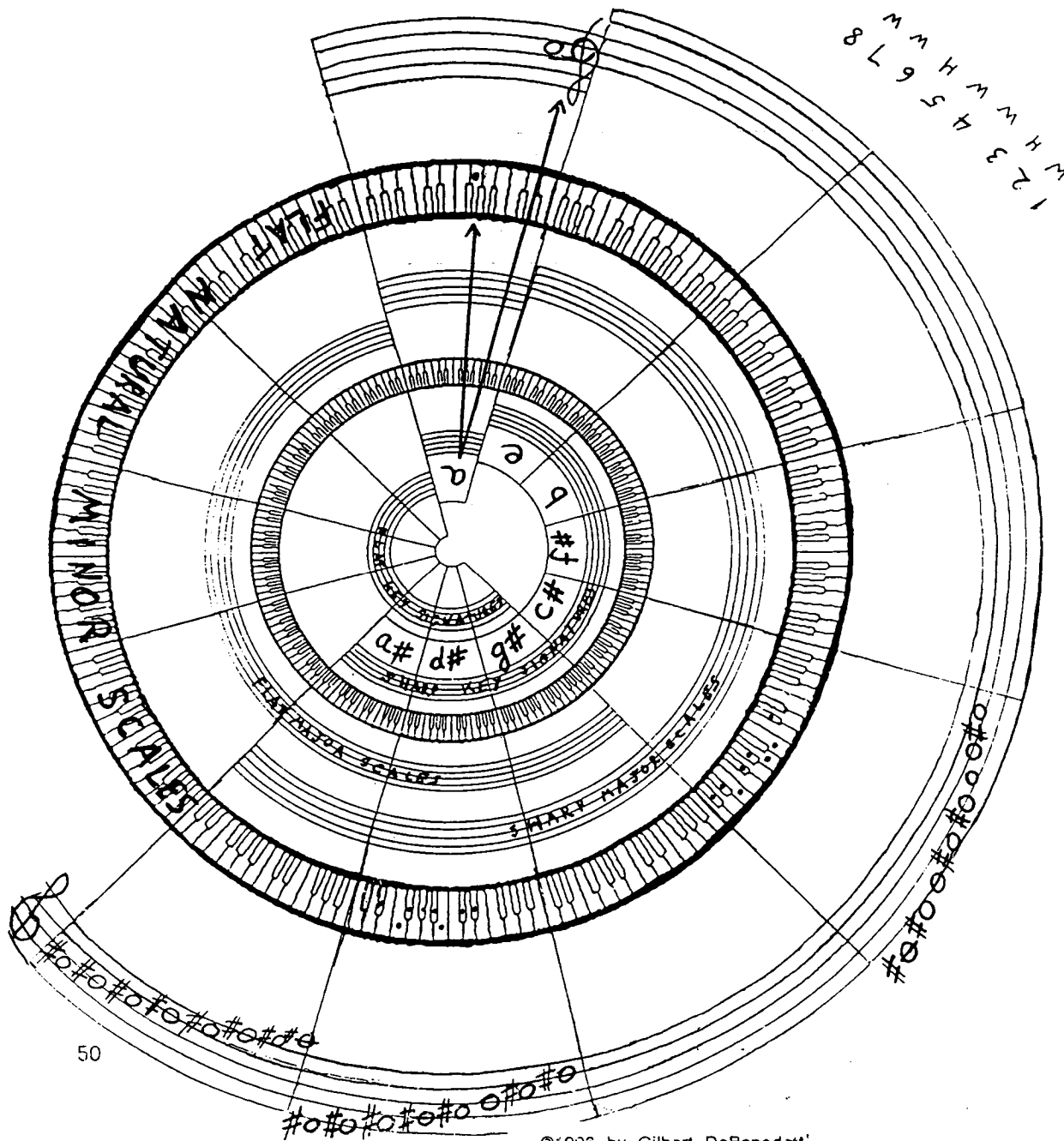
1. *DRAW* dots for a natural minor scale on the keyboard below beginning with the key note C.
2. *WRITE* the notes for a natural minor scale on the staff below beginning with the key note B.
 - a. *DRAW* eight notes beginning and ending on the note B
 - b. *NUMBER* the notes from 1 to 8
 - c. *WRITE* W’s and H’s between the numbers in the pattern shown above
 - d. *INSERT* sharps or flats between the notes so the distances between the notes correspond to the pattern of half steps and whole steps.



Date:

6.3 Write natural minor scales on the circle of fifths, 1

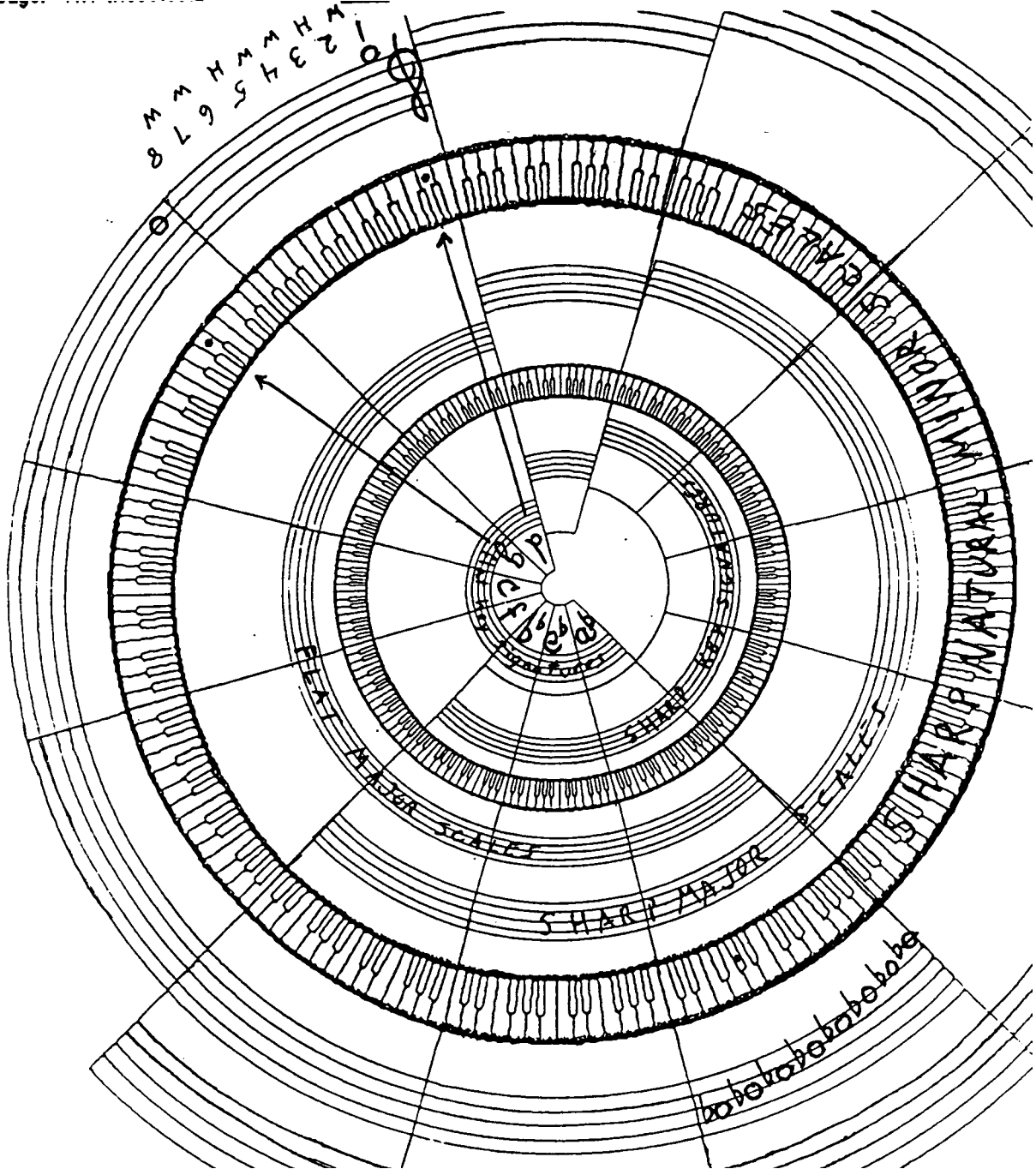
1. *DRAW* dots for the notes of the missing natural minor scales on the outside keyboard. Only use the key notes shown inside the innermost keyboard.
2. *WRITE* notes for the missing natural minor scales on the outside staff. All these scales, except the one on top (a natural minor), will have sharps.



Date:


6.4 Write natural minor scales on the circle of fifths, 2

1. *DRAW* dots for the notes of the missing natural minor scales on the outside keyboard. Only use the key notes shown inside the innermost keyboard.
2. *WRITE* notes for the missing natural minor scales on the staff to the left and bottom of the page. All these scales will have flats.



Date:

6.5 Write some minor key signatures



- Sharps and flats in natural minor scales are the same as sharps and flats in major scales and major key signatures. In the example above, the flats in the c natural minor scale are the same as the flats in the E flat major key signature (and in the E flat major scale).
 - Key signatures for minor keys are derived from natural minor scales.
 - Therefore, all key signatures have both a major and a minor key.
- Three flats is the key signature for both E flat major and for c minor.

1. *WRITE* the following natural minor scales. Use the procedure on worksheet 6.2.
2. *WRITE* their key signatures.
3. *IDENTIFY* the major keys which have the same key signatures.

a. b natural minor

Two musical staves in bass clef. The first staff is empty. The second staff contains the key signature for b minor, which consists of two flats (Bb and Eb).

same as
major

b. f natural minor

Two musical staves in treble clef. The first staff is empty. The second staff contains the key signature for f minor, which consists of one flat (Fb).

same as
major

c. f# natural minor

Two musical staves in bass clef. The first staff is empty. The second staff contains the key signature for f# minor, which consists of one sharp (F#).

same as
major

Date:

6.6 Find relative major and minor keys

In f minor:

Key note F. Same key signature as A \flat

half steps
1 2 3

F G A

Skip over one letter:
The major key is A \flat , not G \sharp

- Major and minor keys are related to each other when they have the same key signature. When there is such a relationship the keys are called relative major and minor keys. F minor is the relative minor of A flat, and A flat is the relative major of f minor.
- Minor keys are three half steps down from their relative major key. Major keys then must be three half steps up from their relative minor key. The keyboard above shows this distance between F and A flat.
- There must be one letter in between the letter names for relative major and minor keys. For the keys of f minor and A flat there is one letter, G, in between.
- Minor keys are written lower case to distinguish them from major keys.

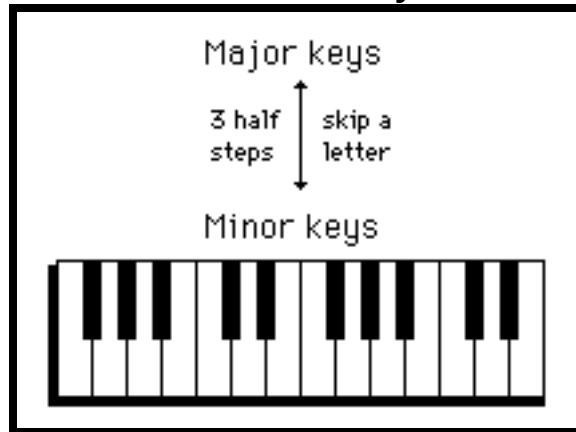
WRITE the relative major and minor keys. Use the keyboard above.

Example

Major keys	<u>B\flat</u>	<u>A</u>	<u>G</u>	<u>E</u>	<u> </u>	<u> </u>	<u> </u>
3 half steps	↑	↓	↓	↓	↑	↑	↑
skip a letter	↓	↓	↓	↓	↓	↓	↓
Minor keys	<u>f</u>	<u> </u>	<u> </u>	<u> </u>	<u>b</u>	<u>d\sharp</u>	<u>c</u>

Date:

6.7 Write key signatures for relative major and minor keys



1. *WRITE* the relative major and minor keys for these key signatures

Example

Musical notation example showing key signatures: F major (one flat), D minor (two flats), C major (no sharps or flats), E minor (three sharps), A major (three sharps), G minor (two flats), B minor (two sharps).

Maj. key

min. key

2. *WRITE* the relative major keys and the key signatures for the minor keys below.

Example

Musical notation example showing minor keys: Gb minor (two flats), e minor (no sharps or flats), a# minor (one sharp), f minor (no sharps or flats), c# minor (one sharp), a minor (no sharps or flats), g# minor (one sharp).

Maj. key

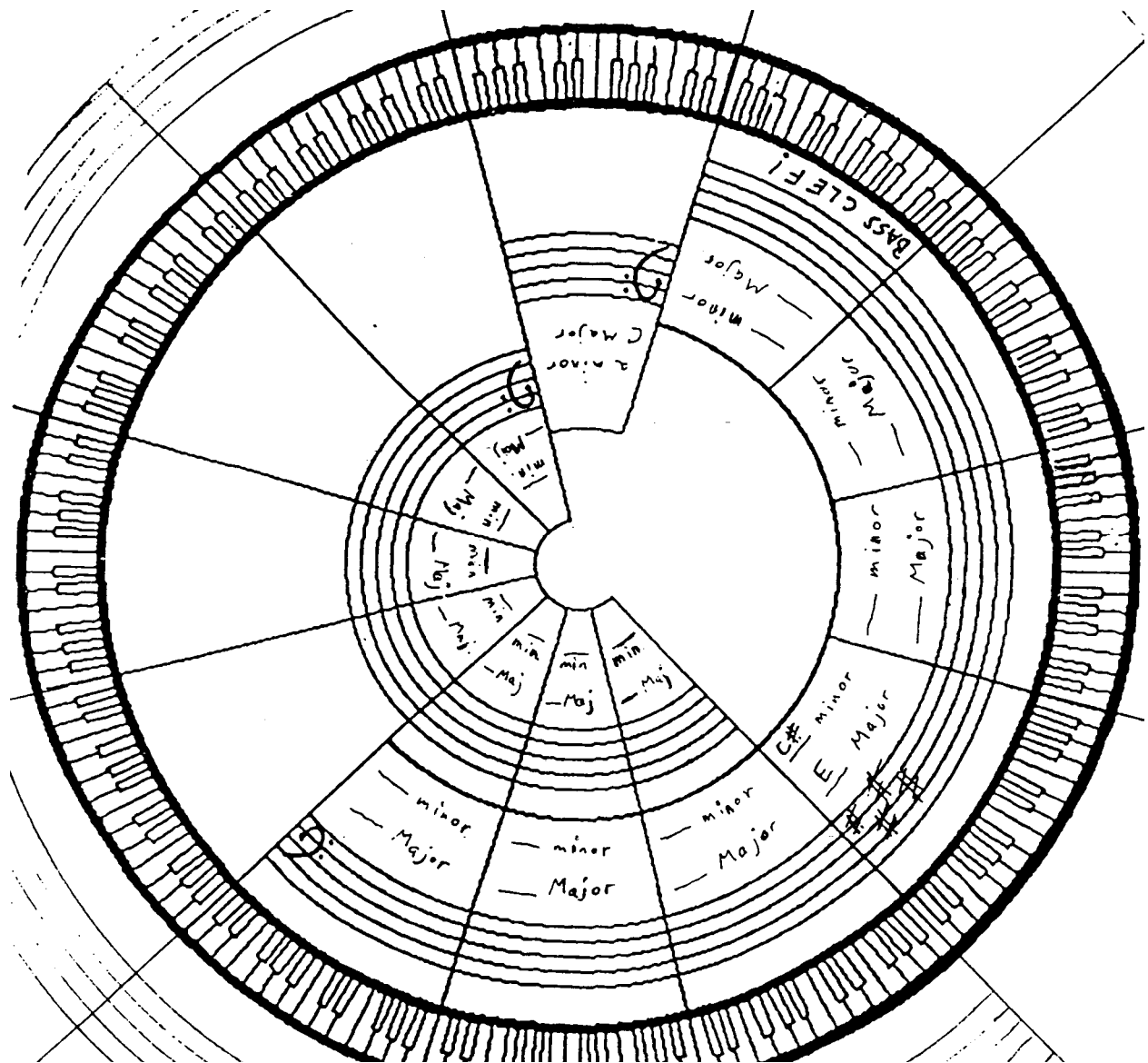
min. key

3. *GO ONLINE* to www.gmajormusictheory.org

- a. *CLICK* "Music Fundamentals"
- b. *CLICK* in the "Virtual Flash Cards" column:
 - 6.1 Key Signatures for Minor keys *AND...*
 - 6.2 Sharps and Flats in Minor Keys
- c. *PRACTICE* the minor key signatures you have learned.

6.8 Write keys and key signatures on the circle of fifths

WRITE: 1) minor keys, 2) major keys, and 3) key signatures on the circle of fifths.



Chapter 7 Writing Minor Scales with Key Signatures

In this chapter you will:

1. Identify notes with double sharps
2. Identify notes with double flats
3. Identify notes with natural signs
4. Write natural minor scales with key signatures
5. Write harmonic minor scales with key signatures
6. Write melodic minor scales with key signatures
7. Review writing all minor scales

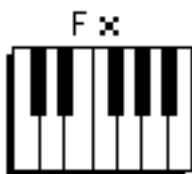
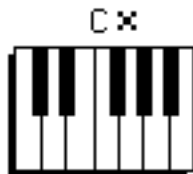
Date: _____

7.1 Identify notes with double sharps

- A double sharp, \times , raises a note two half steps.

1. DRAW a dot on the keyboard which corresponds to the letter name.

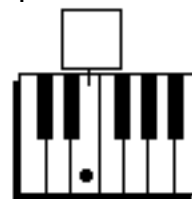
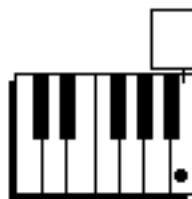
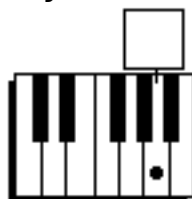
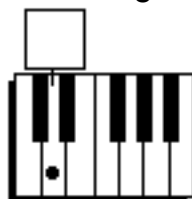
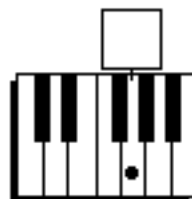
Example: A \times



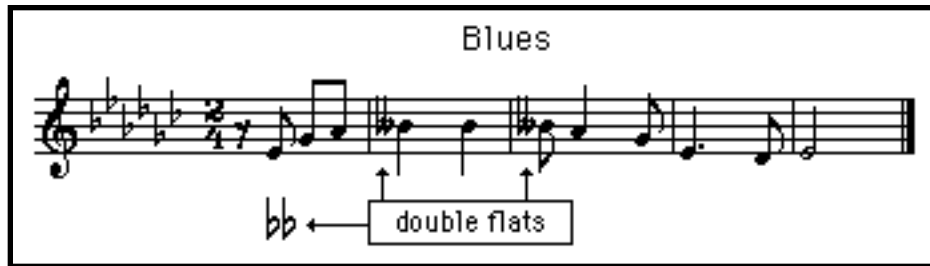
2. DRAW a dot on the keyboard which corresponds to the note on the staff.
CAREFUL: These keyboards begin differently than those above.



3. IDENTIFY the following notes by a letter with a double sharp.



7.2 Identify notes with double flats



- A double flat, bb , lowers a note two half steps.

1. Draw a dot on the keyboard which corresponds to the letter name.

Example: A bb



E bb



B bb




G bb



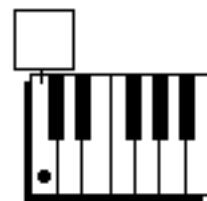
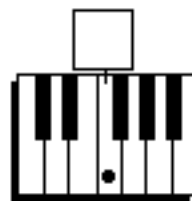
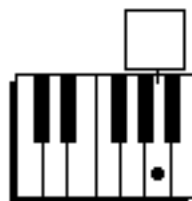
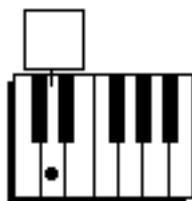
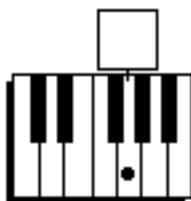
D bb



2. Draw a dot on the keyboard which corresponds to the note on the staff.



3. Identify the following notes by a letter with a double flat.



Pathways to Harmony Ch 7. Writing Minor Scales with Key Signatures

Date: _____

7.3 Identify notes with natural signs

Ex. 1. Fiddle Tune

Ex. 2. "Walking" Bass Pattern

Fare thee well Old Joe Clark, Fare thee well I say

natural signs → ♮

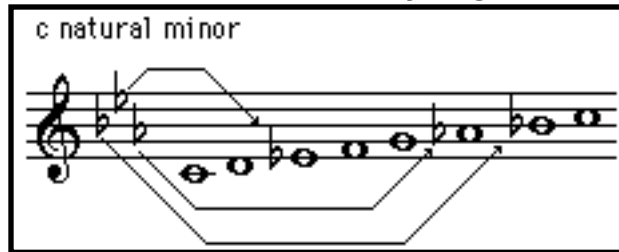
The image shows two musical examples. Example 1 is a fiddle tune in G major (one sharp) and 4/4 time, with lyrics 'Fare thee well Old Joe Clark, Fare thee well I say'. Example 2 is a 'Walking' Bass Pattern in G major, 4/4 time. A box labeled 'natural signs' with an arrow points to a natural sign (♮) placed over a note in the bass line.

- Recall that a note with a sharp or flat next to it remains sharp or flat if it is repeated in the same measure (worksheet 4.3).
- Recall that key signatures show which notes are to be played sharp or flat in the music. These sharps and flats do not normally appear next to the notes themselves (worksheet 5.1).
- Natural signs, ♮, cancel sharps, flats double sharps and double flats which appear in the key signature (Example 1 above), or which appear earlier in the measure (Example 2). A note marked with a natural sign is always a white key on the keyboard.
- The natural sign affects repeated notes for the remainder of the measure.

IDENTIFY the notes which have blanks underneath in the following phrase.

A musical phrase in G major (one sharp) and 2/4 time, consisting of four measures of eighth notes. The notes are: G4, A4, B4, C5 (first measure); D5, E5, F5, G5 (second measure); A5, B5, C6, D6 (third measure); E6, F6, G6, A6 (fourth measure). Below the staff, there are four dashed lines corresponding to the notes in each measure for identification.

7.4 Write natural minor scales with key signatures



- It is faster to write minor scales by using their key signatures, once they are known, than by using half steps and whole steps between notes.
- The natural minor scale conforms to its key signature note for note. The key signature is in fact derived from the natural minor scale. See worksheet 6.5.


1. WRITE the natural minor scales for these key signatures.

- a. FIND the minor key note by:
first finding the relative major key, and then
count down three half steps and skip over a letter name.
- b. DRAW eight note heads beginning with the minor key note.
- c. INSERT flats or sharps from the key signature between note heads



2. WRITE the natural minor scales for these key notes.

- a. FIND the relative major key by going up 3 half steps and skipping a letter.
- b. WRITE the key signature for these relative major and minor keys
- c. PROCEED as in b. and c. above



Pathways to Harmony Ch 7. Writing Minor Scales with Key Signatures

Date: _____

7.5 Write harmonic minor scales with key signatures

- In the harmonic minor scale, scale degree 7 is a half step higher than indicated in the key signature.
 - When scale degree 7 is not in the key signature add a sharp (example 1 above).
 - When scale degree 7 is flatted by the key signature add a natural (example 2).
 - When scale degree 7 is sharped by the key signature add a double sharp (example 3).
- Raising scale degree 7 creates a whole step plus a half step between degrees 6 and 7. This part of the scale sounds particularly exotic.

1. WRITE the harmonic minor scales for these key signatures.



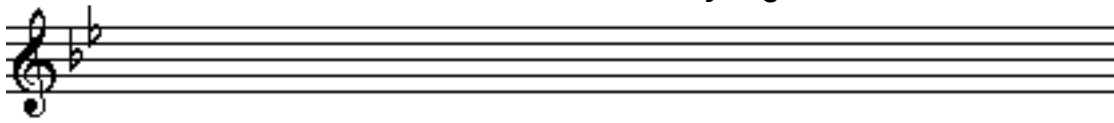
2. WRITE the harmonic minor scales for these key notes.

7.6 Write melodic minor scales with key signatures






- The melodic minor scale goes both up and down.
 - On the way up, scale degrees 6 and 7 are a half step higher than indicated in the key signature. These notes always require a natural, a sharp or a double sharp. See the above illustration.
 - On the way down this scale conforms to the key signature exactly.
- For clarity, sharps, flats and naturals should be written on scale degrees 6 and 7 when the scale goes down as well as up. See the above illustration.
- Raising scale degrees 6 and 7 on the way up in the melodic minor scale makes those notes “lead” to scale degree 1. That is, raising these notes makes listeners anticipate that scale degree 1 will follow.

1. WRITE melodic minor scales for these key signatures.



2. WRITE melodic minor scales for these key notes.



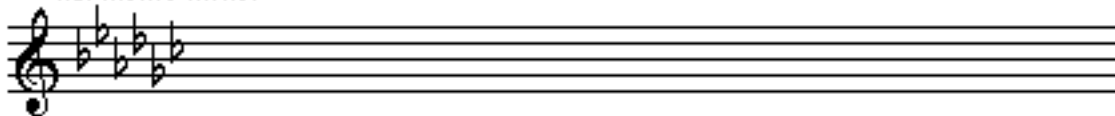
Pathways to Harmony Ch 7. Writing Minor Scales with Key Signatures

Date: _____


7.7 Review writing all minor scales

1. WRITE the following scales.


harmonic minor



natural minor




melodic minor




2. WRITE the following scales. INCLUDE the key signatures.


d# melodic minor



f natural minor



c# harmonic minor



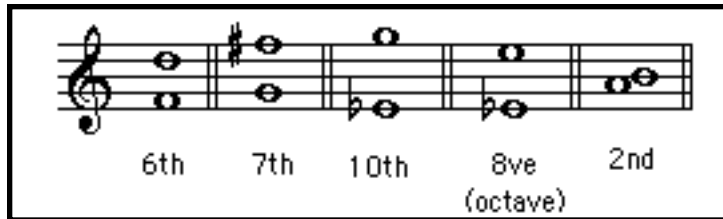
Chapter 8 Intervals

In this chapter you will:

- | | |
|--|---|
| 1. Identify intervals by general names | 6. Identify 2nds, 3rds, 6ths and 7ths |
| 2. Review key signatures in bass clef | 7. Write 2nds, 3rds, 6ths and 7ths |
| 3. Review key signatures in treble clef | 8. Identify 4ths, 5ths and 8ves |
| 4. Identify major intervals by writing scales | 9. Write the top notes of intervals |
| 5. Write major intervals by remembering key signatures | 10. Identify intervals whose bottom notes are not key notes |
| | 11. Identify intervals in musical phrases |

Date: _____

8.1 Identify intervals by general names



- An interval is the relationship between two notes.
- Intervals have two names, a general name and a specific name.
- The general name is usually an ordinal number (2nd, 3rd, 4th and so on).
- To find the general name of an interval, call the bottom note “one” and count the lines and spaces to the top note. Remember to count both the bottom and the top notes.
- A distance of 8 notes counted in this way is called an octave (8ve).
- The notes of a 2nd are written beside each other, not on top of each other.

WRITE letter names for the top and bottom notes. Then write the interval’s general name.



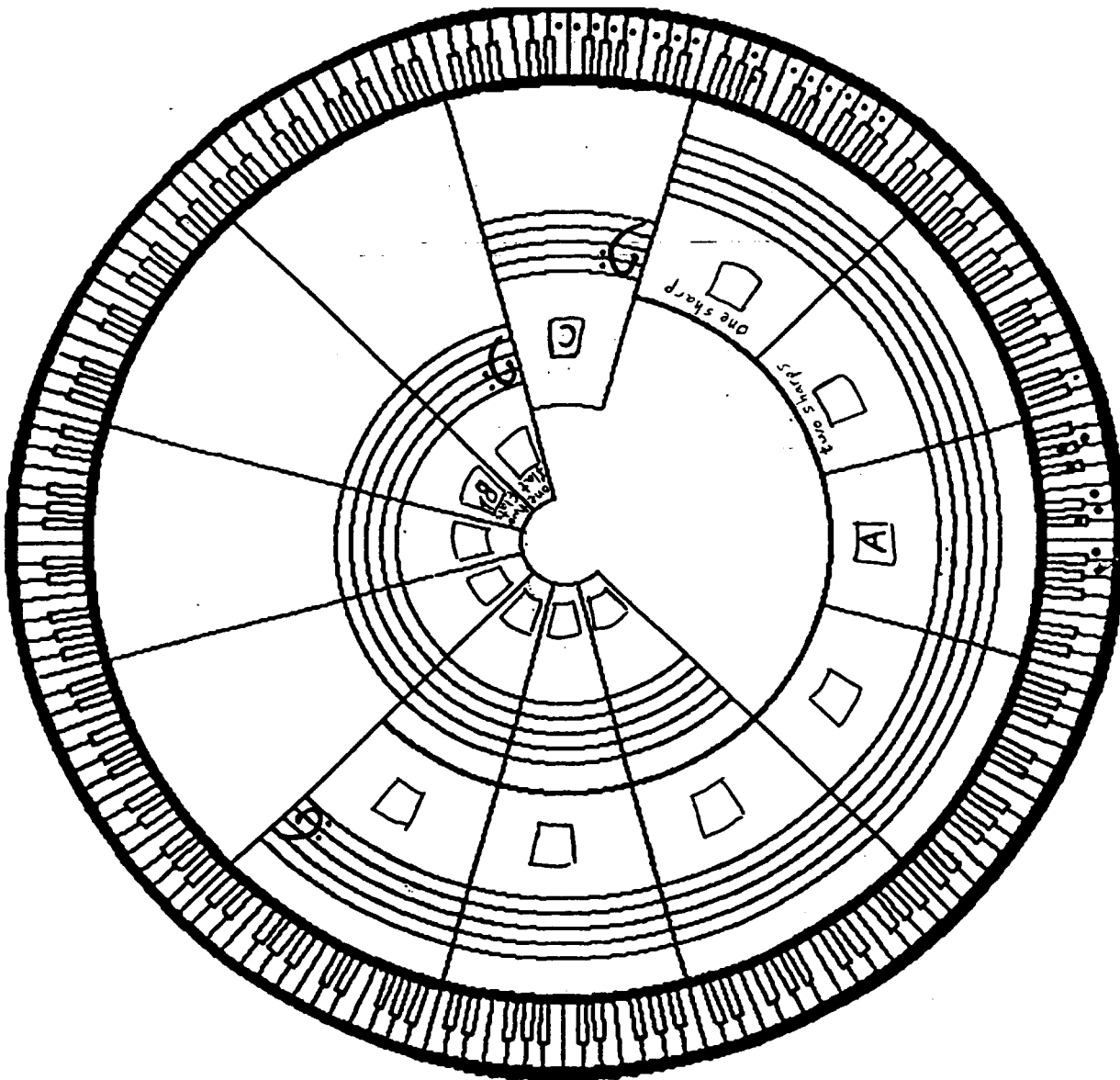
top note	___	___	___	___	___	___	___	___
bottom note	___	___	___	___	___	___	___	___
interval general name	___	___	___	___	___	___	___	___

Date: _____

8.2 Review key signatures in bass clef



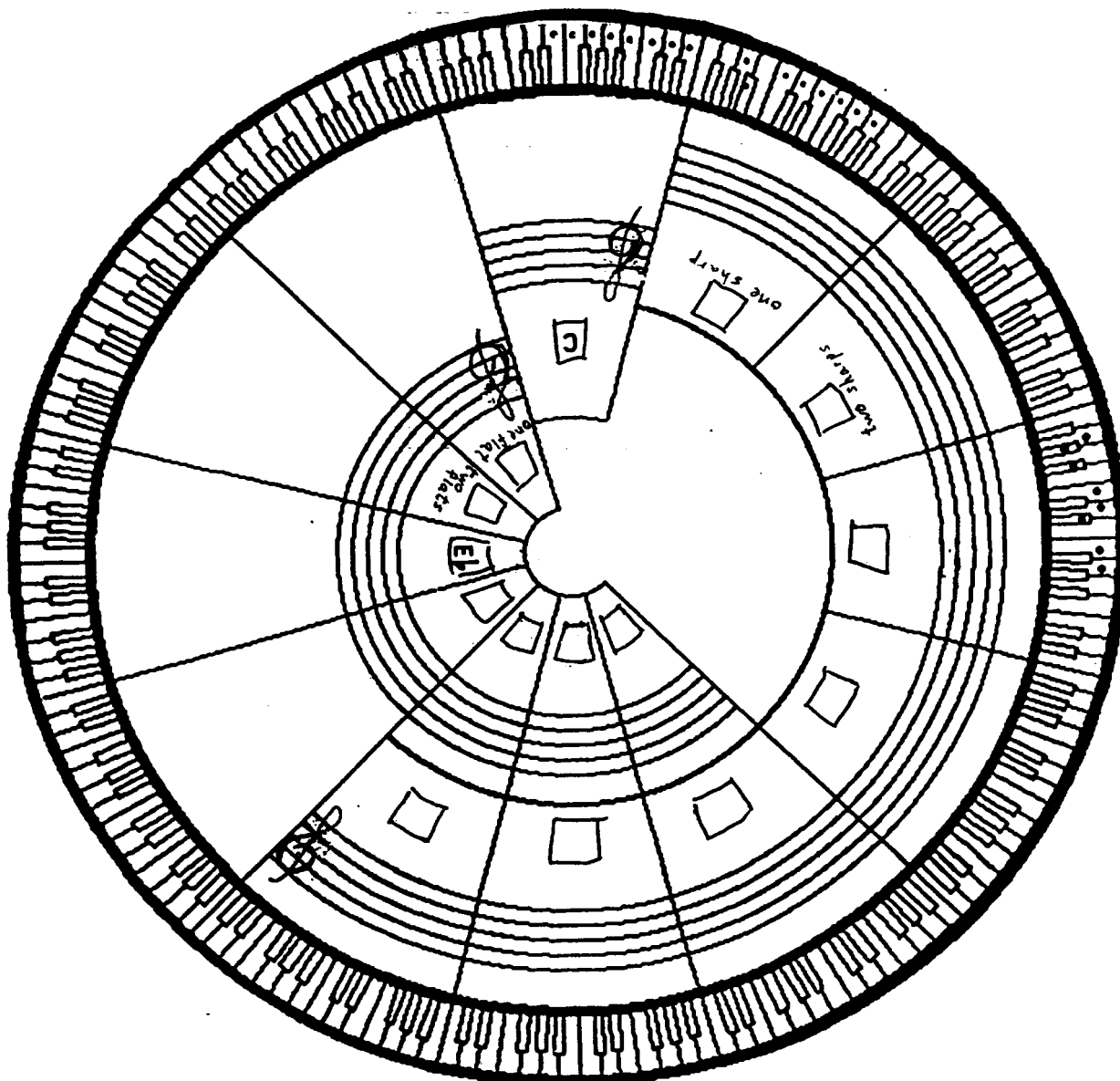
1. NAME the major keys in the boxes according to the circle of fifths.
2. WRITE the key signatures for all major keys on the staffs.
Use the key signatures for C sharp and C flat as a guide (see above).



8.3 Review key signatures in treble clef



FOLLOW directions for the previous page except write the key signatures in treble clef.



Pathways to Harmony Ch. 8. Intervals

Date: _____

8.4 Identify major intervals by writing scales

• A major interval is an interval of a 2nd, 3rd, 6th or 7th in which the top note is in the scale (or key) of the bottom note. In the illustration above E to G# is a major interval because G# occurs in the E scale. Eb to Db is not a major interval because Db does not occur in the Eb scale. D natural occurs in that scale instead.

1. WRITE the key signature for the bottom note of each interval.
2. WRITE a shortened major scale for the bottom note. Write the scale only up to the letter name of the top note of the interval.
3. Under the interval, WRITE “M”, for major, if the top note of the shortened scale matches the top note of the interval, OR WRITE “NM”, for not major, if the top note of the shortened scale does not match the top note of the interval.

key signature	shortened scale
 _____	 _____
 _____	 _____
 _____	 _____

8.5 Write major intervals by remembering key signatures

<p>match — D is sharp</p> <p>major</p>	<p>no match — no D sharp</p> <p>not major</p>	<p>match — no C flat</p> <p>major</p>
--	---	---------------------------------------

- To quickly find if an interval is major, remember the sharps and flats in the key signature of the bottom note. Then decide if the top note of the interval occurs in that scale.
- Only 2nds, 3rds, 6ths and 7ths can be major.
Fourths, 5ths and octaves are never major.

1. IDENTIFY these intervals as major (M) or not major (NM).

Example

NM _____ _____ _____ _____ _____

_____ _____ _____ _____ _____ _____

2. WRITE major intervals above the given note.

Example

Maj. 3rd Maj. 3rd Maj. 7th Maj. 6th Maj. 2nd Maj. 6th

Maj. 7th Maj. 6th Maj. 3rd Maj. 7th Maj. 6th Maj. 2nd

Pathways to Harmony Ch. 8. Intervals

Date: _____

8.6 Identify 2nds, 3rds, 6ths and 7ths

major 3rd augmented 3rd minor 3rd diminished 3rd

Compared to a major interval with the same letter names...

- an augmented interval is a half-step larger
- a minor interval is a half-step smaller, and
- a diminished interval is two half-steps smaller.

IDENTIFY the interval on the right side of each problem:

1. WRITE a major interval above the note on the left.
2. COMPARE the interval on the right to the major one you just wrote.

Sample Problem

Maj. 7th _____

STEP 1.

Maj. 7th _____

STEP 2.

Maj. 7th dim. 7th

Maj. 6th _____

Maj. 3rd _____

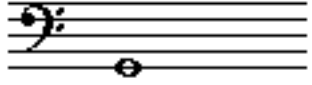


Maj. 7th _____

Maj. 2nd _____

Maj. 6th _____

Maj. 3rd _____

8.7 Write 2nds, 3rds, 6ths and 7ths

<p><u>Example:</u> Write the interval above this note:</p>	<p><u>Solution:</u> One half-step smaller than major with <u>same</u> letter names.</p>	<p><u>Incorrect:</u> One half-step smaller than major with <u>different</u> letter names.</p>
		
<p>minor 3rd</p>	<p>minor 3rd</p>	<p><u>not</u> a 3rd</p>

- To write an augmented, minor or diminished interval above a 2nd, 3rd, 6th or 7th:
 - find the major interval above the note
 - adjust the top note, without changing the letter name, to make the interval larger or smaller.

1. REVIEW this vocabulary:

- An interval one half-step larger than major is _____
- An interval one half step smaller than major is _____
- An interval two half-steps smaller than major is _____

2. REVIEW IDENTIFYING intervals:

Example



2. WRITE the top note of these intervals.

(still bass clef)



min 7th aug 2nd dim 6th aug 7th min 3rd dim 6th

Pathways to Harmony Ch. 8. Intervals

Date: _____

8.8 Identify 4ths, 5ths and 8ves

R E V I E W	2nds 3rds 6ths & 7ths	Description	4ths, 5ths and 8ves	N E W
	augmented	one half-step larger than major or perfect	augmented	
	major	the top note is in the scale of the bottom note	perfect	
	minor	one half step smaller than major or perfect	diminished	
	diminished	two half-steps smaller than major or perfect	X	

• A perfect interval is a 4th, 5th or 8ve in which the top note is in the scale (or key) of the bottom note.

Compared to a perfect interval with the same letter names...

- an augmented interval is a half-step larger than the perfect interval
- a diminished interval is a half-steps smaller than the perfect interval

Notice from the above chart that:

“diminished” means one half step smaller than perfect, BUT

“diminished” means two half steps smaller than major.

“perfect” is never used for 2nds 3rds 6ths and 7ths AND

“major” and “minor” are never used for primes, 4ths, 5ths and 8ves.

“perfect” means the same as “major” except “perfect” is only used for 4ths, 5ths and 8ves.

1. IDENTIFY these 4ths 5ths and 8ves:



2. IDENTIFY these intervals:

Example



Perf. 8ve



8.9 Write the top notes of intervals

1. FILL IN the blanks in this interval chart.

2nds 3rds 6ths & 7ths	Description	Primes, 4ths 5ths & 8ves
	one half-step larger than major or perfect	
	the top note is in the scale of the bottom note	
	one half step smaller than major or perfect	
	two half-steps smaller than major or perfect	X

2. WRITE the top notes of these intervals:

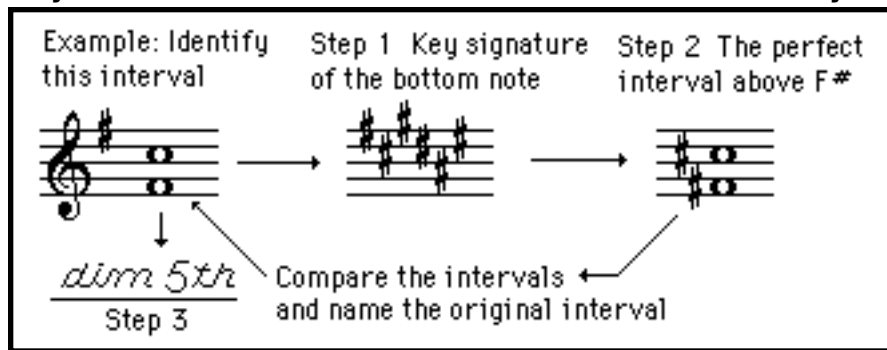
Example

The example shows two staves of musical notation. The top staff is in treble clef and contains six intervals: a diminished 6th (Bb4 to F5), a diminished 5th (Bb4 to F5), an augmented 3rd (Bb4 to D5), a diminished 3rd (Bb4 to D5), an augmented 4th (Bb4 to E5), and a perfect 5th (Bb4 to F5). The bottom staff is in bass clef and contains six intervals: an augmented 4th (Bb2 to E3), a diminished 8ve (Bb2 to F3), a minor 3rd (Bb2 to D3), a diminished 7th (Bb2 to G3), a diminished 3rd (Bb2 to D3), and an augmented 8ve (Bb2 to F3).

Pathways to Harmony Ch. 8. Intervals

Date: _____

8.10 Identify intervals whose bottom notes are not key notes



- When intervals occur in music, they do not usually have bottom notes which are the key notes of the piece. That is, the key signature of the piece is not usually the key signature of the bottom note.
- To identify an interval whose bottom note is not a key note:
 1. Write a new key signature--the key signature of the bottom note. Remember that notes may be sharp or flat as a result of the key signature.
 2. Find the major or perfect interval above the bottom note.
 3. Compare the intervals and name the original interval.

IDENTIFY these intervals:

<p>Step 1. Step 2.</p> <p>compare</p> <p>Step 3.</p>	<p>Step 1. Step 2.</p> <p>compare</p> <p>Step 3.</p>
<p>Step 1. Step 2.</p> <p>compare</p> <p>Step 3.</p>	<p>Step 1. Step 2.</p> <p>compare</p> <p>Step 3.</p>

8.11 Identify intervals in musical phrases

- When intervals appear in a piece of music, identify the intervals by using the key of the bottom note, not the key of the piece.
- Specific names of intervals may be abbreviated as follows:

A = augmented	M = major
P = perfect	m = minor
d = diminished	

1. IDENTIFY the intervals in this version of “Silent Night.”

Si - lent Night! Ho - ly Night! All is calm, All is bright.

2. IDENTIFY the intervals in this version of “The Battle Hymn of the Republic.”

Mine eyes have seen the glo - ry of the com - ing of the Lord.

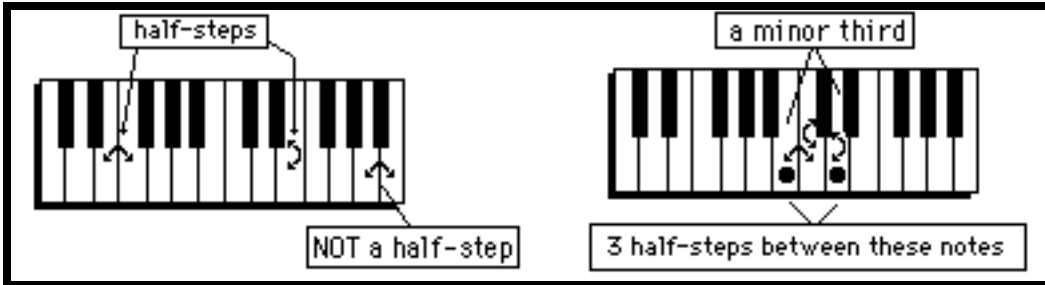
3. IDENTIFY the intervals in this version of “America the Beautiful.”

O beau - ti-ful for spa - cious skies, for am - ber waves of grain.

Chapter 9 More about thirds and minor keys

In this chapter you will:

- | | |
|---|---|
| 1. Count the half-steps in major and minor thirds | 5. Write minor scales |
| 2. Write major and minor thirds | 6. Write minor key signatures and scales |
| 3. Identify and write 3rds with key signatures | 7. Write minor keys on the circle of fifths |
| 4. Write relative major and minor key signatures | |



9.1 Count the half-steps in major and minor thirds

- Recall from Book 1 that a half-step is the distance between two notes which have no notes in between on the keyboard, whether black or white (worksheet 4.1).
- A major third always has a distance of 4 half steps
- A minor third always has a distance of 3 half-steps.

1. WRITE the number of half-steps between the notes marked with dots.



How many? _____

2. WRITE letter names on the white keys of this keyboard.



3. IDENTIFY these thirds as major or minor by counting half steps on the above keyboard.

The image shows two staves of musical notation. The top staff is a treble clef with a 2/4 time signature, containing five chords: C4-E4, D4-F4, E4-G4, F4-A4, and G4-B4. The bottom staff is a bass clef with a 3/4 time signature, containing a sequence of chords: C4-E4, D4-F4, E4-G4, F4-A4, G4-B4, and C5. Below the bottom staff are several blank lines for writing answers. To the right of the bottom staff is the text 'Play this!'.

Pathways to Harmony, Chapter 3. Basic Rhythms

9.2 Write major and minor thirds

Diagram illustrating three intervals on a staff, corresponding to the same notes on a keyboard (G, F, E):

- Maj 3rd:** Interval between G (line) and E (line). 1 letter in between.
- Not a 3rd:** Interval between G (space) and E (line). 2 letters in between.
- Not a 3rd:** Interval between G (line) and F (space). no letters in between.

- The distance of a third on the staff is always line to line or space to space.
- There is one and only one letter between the two letter names in a third.
All three intervals in the above example are played the same and sound the same. Yet only the first interval is written as a third.
- When writing thirds by figuring out half steps,
first write the noteheads as thirds
then add sharps or flats

1. WRITE the missing notes for each third. Find them by counting half-steps on the keyboard on the previous page.

A down arrow means write a note below the given note.

An up arrow means write a note above the given note.

Five musical intervals for completion:

- Maj 3rd ↑
- min 3rd ↑
- Maj 3rd ↓
- min 3rd ↓
- min 3rd ↑

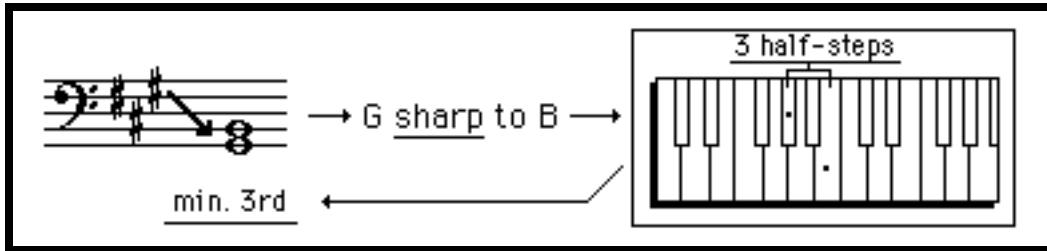
2. WRITE the noteheads next to the stems in this tune.

FILL THEM IN if you are given quarter notes.

Musical notation for a tune in 4/4 time. The staff shows stems and flags for quarter notes. The intervals between notes are:

- min 3rd ↓
- min 3rd ↑
- min 3rd ↓
- min 3rd ↑
- Maj 3rd ↓
- min 3rd ↑

9.3 Identify and write 3rds with key signatures



- Recall that the sharps and flats in a key signature alter the notes on the staff.
- To cancel a sharp or flat which appears in the key signature, use a natural sign, \natural , next to the note.

1. IDENTIFY these thirds as major or minor. Use the keyboard above.

Deck the halls with boughs of hol - ly.

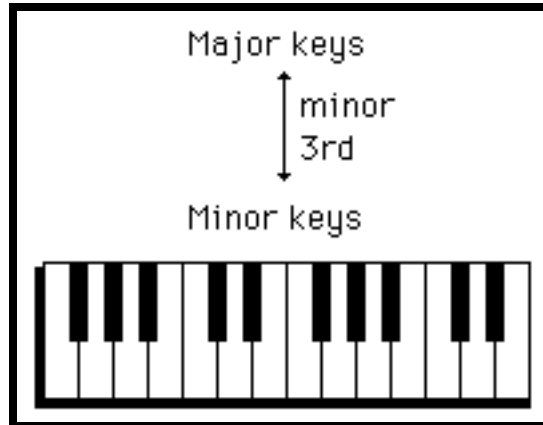
2. WRITE these thirds.

min 3rd ↑ Maj 3rd ↑ min 3rd ↓ Maj 3rd ↓

min 3rd ↓ Maj 3rd ↑ min 3rd ↓ Maj 3rd ↓

Pathways to Harmony, Chapter 3. Basic Rhythms

9.4 Write relative major and minor keys



- Minor keys are a minor third below their relative major keys. Recall from Book 1 (Worksheet 6.8) that minor keys are three half-steps and three letter names below their relative major keys. In this chapter this distance has been named a minor third.

1. WRITE the major and minor keys for each key signature. Write the major keys with capital letters and the minor keys lower case.

Example

Maj. key Ab _____ _____ _____ _____ _____ _____

min. key f _____ _____ _____ _____ _____ _____

2. WRITE the major key and the key signature for each minor key.

Example

Maj. key D _____ _____ _____ _____ _____ _____

min. key b g f# c d# d bb

9.5 Write minor scales

- To write a minor scale given the key signature:
 1. find the major key
 2. go down a minor third to find the relative minor key (and key note)
- Recall from Book 1 that:
 - in natural minor scales, the notes conform to the key signature
 - in harmonic minor scales, scale degree 7 is raised a half-step
 - in melodic minor scales, scale degrees 6 and 7 are raised a half-step when the scale goes up, and they are lowered to match the key signature when the scale comes down

WRITE these minor scales.

natural minor


melodic minor

harmonic minor

natural minor

melodic minor

9.6 Write minor key signatures and scales



- To write a minor scale given the minor key:
 1. find the relative major key by going up a minor third
 2. write the key signature and scale beginning on the minor key note

WRITE these minor scales

f melodic minor

f# harmonic minor

c natural minor

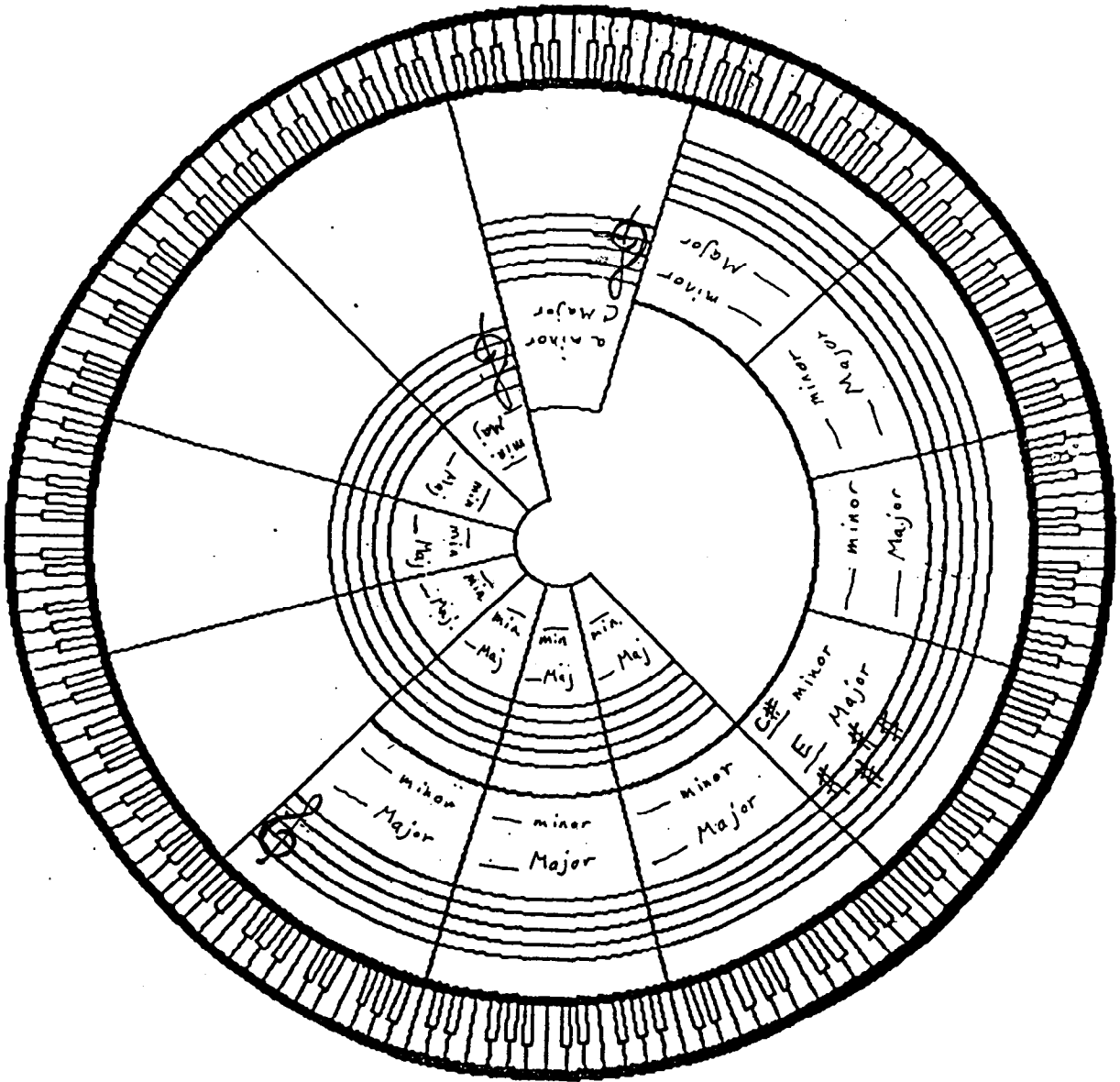
g# melodic minor

e harmonic minor

eb natural minor

9.7 Write minor keys in the circle of fifths

WRITE the major keys, minor keys and key signatures on this circle of fifths.



Chapter 10 Triads

In this chapter you will:

1. Identify major and minor triads
2. Write major and minor triads
3. Identify all four types of triads
4. Identify triads by sound and write triads given the root
5. Identify triads with key signatures
6. Write triads given the third or fifth
7. Review the four triads

10.1 Identify major and minor triads

The diagram shows two triads on a bass clef staff. The first is a major triad with a 'maj 3rd' interval between the bottom and middle notes, and a 'min 3rd' interval between the middle and top notes. The second is a minor triad with a 'min 3rd' interval between the bottom and middle notes, and a 'maj 3rd' interval between the middle and top notes. To the right, a table shows the 'type of triad' based on the 'interval' between notes.

interval	type of triad	
	major	minor
top 3rd	minor	major
bottom 3rd	major	minor
5th	perfect	perfect

- A chord is three or more notes played together.
 - A triad is a three note chord which is written in thirds.
 - There are four types of triads. This worksheet presents two of these:
 - A major triad has a major third on the bottom and a minor third on top.
 - A minor triad has a minor third on the bottom and a major third on top.
- The 5ths, from the bottom notes to the top notes, in both triads are perfect, so 5ths cannot be used to distinguish these two triads.
 “Major” and “minor” are used to describe both intervals and triads.
 Major and minor triads are named after their bottom thirds.

1. IDENTIFY the bottom third of the triad as major or minor.

A musical staff in treble clef with a key signature of one sharp (F#). It contains six triads: 1. C major (C-E-G), 2. D minor (D-F-A), 3. E major (E-G-B), 4. F major (F-A-C), 5. G minor (G-B-D), 6. A major (A-C-E).

2. IDENTIFY the top third of the triad as major or minor.

A musical staff in treble clef with a key signature of one sharp (F#). It contains six triads: 1. C major (C-E-G), 2. D minor (D-F-A), 3. E major (E-G-B), 4. F major (F-A-C), 5. G minor (G-B-D), 6. A major (A-C-E). The text "Play this!" is written to the right of the staff.

3. IDENTIFY the triad as major or minor.

A musical staff with six triads: 1. C major (C-E-G) in bass clef, 2. D minor (D-F-A) in bass clef, 3. E major (E-G-B) in bass clef, 4. F major (F-A-C) in treble clef, 5. G minor (G-B-D) in bass clef, 6. A major (A-C-E) in bass clef.

10.3 Identify all four types of triads

		TYPE OF TRIAD (with distances in half-steps)			
		Major	Minor	Diminished	Augmented
Interval:	Top 3rd	minor (3)	major (4)	minor (3)	major (4)
	Bottom 3rd	major (4)	minor (3)	minor (3)	major (4)
	5th	perfect	perfect	diminished	augmented

- Diminished triads have two minor thirds and a diminished fifth.
- Augmented triads have two major thirds and an augmented fifth.
- Diminished and augmented triads are named after their fifth. (Recall that major and minor triads are named after their bottom third.)
- All four types of triads can be distinguished by their thirds alone.
Recall that minor thirds are 3 half-steps and major thirds are 4 half-steps.

1. MEMORIZE the chart above.

2. IDENTIFY these triads BY COUNTING half-steps on the keyboard below.

Example

Aug

3. IDENTIFY the triads on the bottom staff.



10.4 Identify triads by sound and write triads given the root

- To identify triad types by their sound, these associations might be helpful:
Major: Birthday party Diminished: Halloween
Minor: Funeral Augmented: Science Fiction Film
 - Recall from worksheet 10.2 to write the noteheads in thirds before altering notes.
-

1. IDENTIFY triad types played by your teacher or friend.

2. WRITE triads above these roots.


Example



maj maj maj maj maj maj

Detailed description: This musical staff contains six measures, each with a single notehead representing a root. The notes are: G4 (treble clef, F# key signature), A4 (treble clef, no key signature), Bb4 (treble clef, Bb key signature), C4 (bass clef, no key signature), D#4 (treble clef, D# key signature), and Eb4 (treble clef, Eb key signature). Each measure is labeled 'maj' below the notehead.

Example



min min min min min min

Detailed description: This musical staff contains six measures, each with a single notehead representing a root. The notes are: Bb4 (treble clef, Bb key signature), C4 (treble clef, no key signature), D4 (treble clef, no key signature), E4 (bass clef, no key signature), F#4 (treble clef, D# key signature), and G#4 (treble clef, G# key signature). Each measure is labeled 'min' below the notehead.


Example



dim dim dim dim dim dim

Detailed description: This musical staff contains six measures, each with a single notehead representing a root. The notes are: Bb4 (treble clef, Bb key signature), C4 (treble clef, no key signature), D4 (treble clef, no key signature), E4 (bass clef, no key signature), F#4 (treble clef, D# key signature), and G#4 (treble clef, G# key signature). Each measure is labeled 'dim' below the notehead.


Example



aug aug aug aug aug aug

Detailed description: This musical staff contains six measures, each with a single notehead representing a root. The notes are: Bb4 (treble clef, Bb key signature), C4 (treble clef, no key signature), D4 (treble clef, no key signature), E4 (bass clef, no key signature), F#4 (treble clef, D# key signature), and G#4 (treble clef, G# key signature). Each measure is labeled 'aug' below the notehead.

10.5 Identify types of triads with key signatures



- Recall that the key signature will affect some notes on the staff.

IDENTIFY these triads.

This keyboard is not the same as that on page 23.



10.6 Write triads given the 3rd or 5th

Problem: Complete this triad

Step 1

Step 2a

Step 2b

dim

dim

dim

dim

- The middle note of a triad is called the 3rd. It is a 3rd above the root.
- The top note of a triad is called the 5th. It is a 5th above the root.
- To write a triad given the 3rd or 5th:
 1. Write the noteheads in 3rds. At least one notehead will be below the given note.
 2. Figure out major and minor thirds starting from the given note, not the root. Do not change the given note.

COMPLETE these triads. The given notes are either 3rds and 5ths.

major major major major major

minor minor minor minor minor

diminished diminished diminished diminished diminished

augmented augmented augmented augmented augmented

10.7 Review triad types

1. COMPLETE this chart.

		type of triad			
		major	minor	diminished	augmented
interval	top 3rd			minor	
	bottom 3rd				
	5th				

2. IDENTIFY these triads.



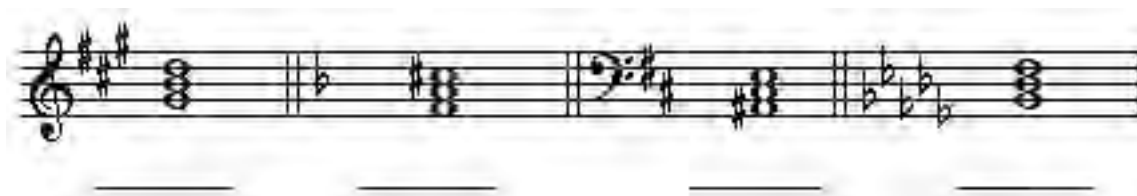
3. WRITE triads above these roots.



4. WRITE these triads given the 3rd or 5th.



5. IDENTIFY these triads.

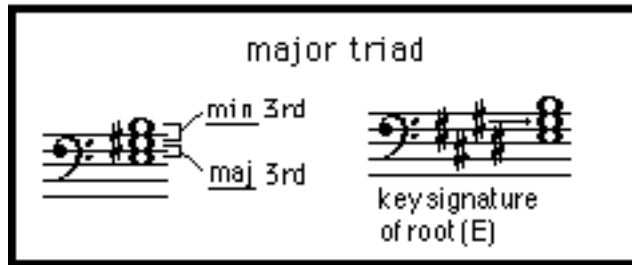


Chapter 10B Triads: Comparing Non-major Triads to Major Ones

In this chapter you will:

- | | |
|---|---|
| 1. Review major triads | 4. Write major triads quickly |
| 2. Write major triads on the circle of fifths | 5. Compare non-major triads to major ones |
| 3. Group triads and relate the groups to each other | 6. Review relationships between triads and their thirds |


10B.1 Review major triads



- Once major triads are recognized quickly, other triads can be identified and written by comparing them to the major ones.
- Major triads:
 1. have a major third on the bottom and a minor third on top (see Chapter 10) AND
 2. have top notes that are in the major scale (or key) of the bottom noteThese two definitions are equivalent.

ADD A SHARP OR FLAT TO THE THIRD OR FIFTH, where necessary, to make each triad MAJOR.

CIRCLE the triads that need no sharps or flats.



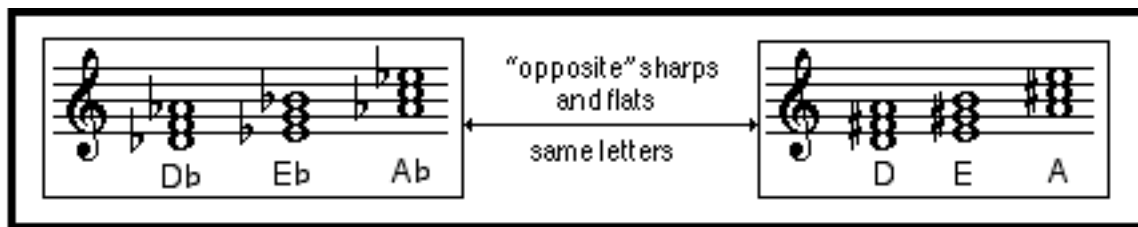
10B.2 Write major triads on the circle of fifths

- Patterns of sharps and flats emerge if major triads are arranged around the circle of fifths.

1. ADD sharps and flats to these triads to make them all MAJOR. Roots are written below the chords and are arranged according to the circle of fifths. Remember to ADD accidentals to roots if needed.
2. NOTICE patterns in the accidentals used.

The image displays 12 major triads arranged in a circle of fifths around a central piano keyboard diagram. Each triad is shown in a treble clef on a five-line staff. The roots of the triads are labeled below the staffs and arranged in the following order: F, C, G, Bb, D, Eb, A, Ab, E, Db, B, C#, Gb, and F#.

10B.3 Group triads and relate the groups to each other



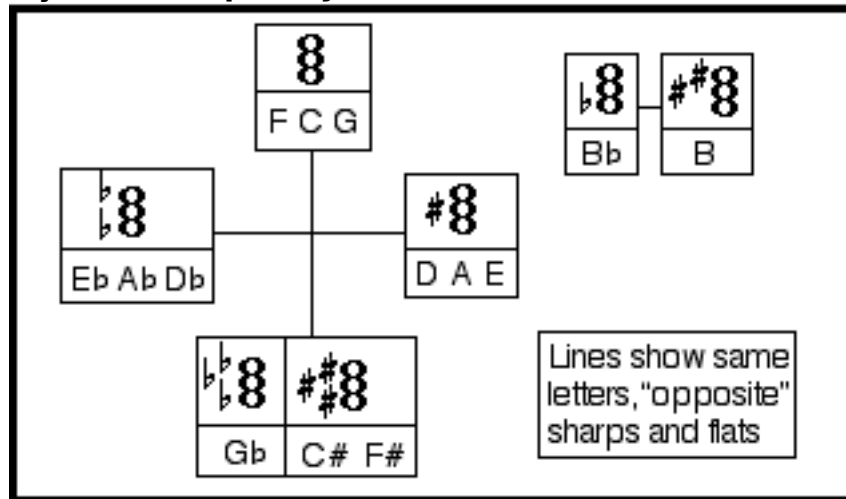
- Triads with the same patterns of sharps and flats are arranged together on the circle of fifths. Those with no sharps and flats are on top, those with a sharp on the third of the chord are on the right, and so on.*
- Groups with the same letter names have "opposite" sharps and flats. For example: Db, Eb and Ab have flats "on the outside," while D, E and A have sharps "in the middle."
F, C, and G have no flats or sharps at all, while F#, C# and Gb have a flat or sharp on every note.

ON THE PREVIOUS PAGE...

1. DRAW LARGE CIRCLES all the way around these GROUPS of triads:
 - a. those with no accidentals
 - b. those in which the third is sharp only
 - c. those in which all notes have a sharp or flat
 - d. those whose root and fifth, only, are flat
2. DRAW A CIRCLE around each of the two odd triads, B and Bb.
3. DRAW LINES between groups which have the same letter names, disregarding flats and sharps. NOTICE that the sharps and flats in each group are in some way "opposite" each other. DRAW these lines THROUGH the keyboard:
 - a. between the F, C, G group and the C#, Gb, F# group
 - b. between the D, A, E group and the Db, Ab, Eb group
 - c. between the two odd triads, B and Bb.

* These patterns also apply to a triad's black and white keys on the piano, except for the C# triad. Unlike Gb and F#, the third of C# is a white key (E#).

10B.4 Write major triads quickly



- The above chart summarizes the material on the previous pages.
- The clef does not affect the patterns of sharp and flats in major triads.

1. TIME YOURSELF as you ADD sharps or flats to these triads to make them major. CIRCLE the triads with no sharps or flats.
2. WRITE YOUR TIME at the end of each line. 15 seconds per line is a very fast time.

Treble clef staff with 8 triads: D, F, Gb, B, E, Eb, Db, G. 15 secs.

Bass clef staff with 8 triads: C#, F#, D, Ab, G, Bb, B, Db. 15 secs.

Treble clef staff with 8 triads: C#, B, C, A, Db, F, F#, E. 15 secs.

Bass clef staff with 8 triads: A, F#, Bb, G, F, C#, B, C. 15 secs.

10B.5 Compare non-major triads to major ones

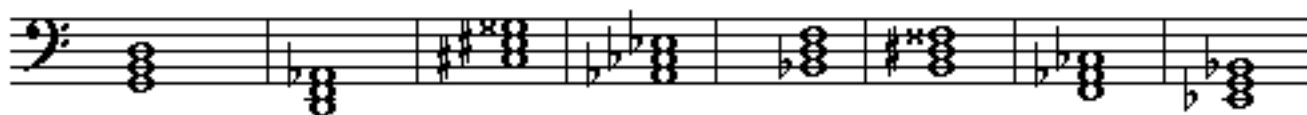


Compared to major triads:

- minor triads have a third a half-step lower
- diminished triads have a third and fifth a half-step lower
- augmented triads have a fifth a half-step higher
- letter names must remain the same; triads must be built in thirds.


1. IDENTIFY the following triads as major, minor, diminished or augmented.









2. WRITE the specified triad.



F# dim D Aug Bm Fm Abm F# B dim A Aug



Bm C dim B dim Bb dim Cm C# A Aug Bb

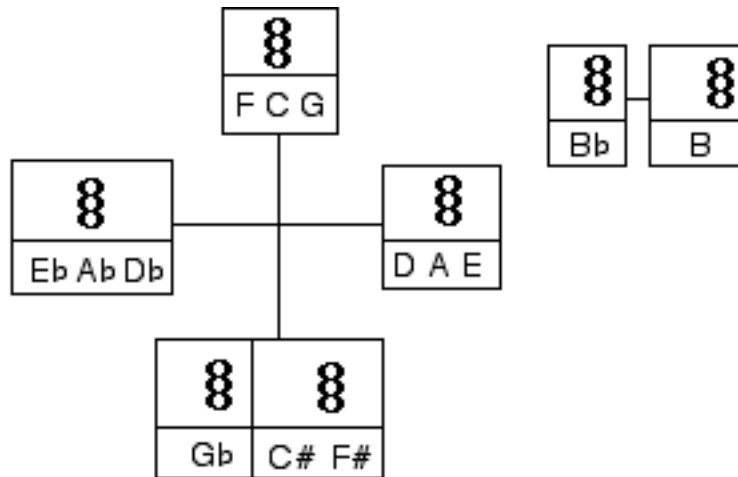


Fm Ab Aug F# C# Aug G C dim F# dim C#m

10B.6 Review relationships between triads and their thirds

• Some unusual major triads such as those built on A#, G# or Fb are not on the circle of fifths as given on 10B.2. To write triads with these roots, use the method described in *chapter 10* involving the top and bottom thirds.

1. WRITE sharps and flats next to the appropriate notes in this chart.



2. Compared to major triads

- augmented triads have _____
- diminished triads have _____
- minor triads have _____

3. IDENTIFY the thirds in each kind of triad as described in Chapter 10.

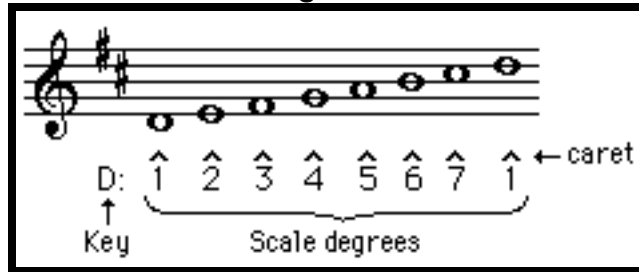
	type of triad			
	major	minor	diminished	augmented
top 3rd			minor	
bottom 3rd				

Chapter 11 Scale Degrees and Roman Numerals

In this chapter you will:

- | | |
|--|--|
| 1. Identify notes with scale degree numbers | 5. Identify triads in order by Roman numerals: major keys |
| 2. Draw notes given their scale degree numbers | 6. Identify triads in order by Roman numerals: minor keys |
| 3. Identify notes by scale degree names | 7. Identify triads, on random roots, by Roman numerals |
| 4. Identify triads by scale degree of the root | 8. Review and write triads given the key and Roman numeral |

11.1 Identify notes with scale degree numbers



- A scale degree is a number or name of a note in a scale.
- Scale degree numbers are written with carets (^) on top.
- To identify notes as scale degrees in a certain key:
 1. Write the key under the key signature followed by a colon.
 2. Count the key note as 1.
 3. Then EITHER
 - a. Count lines and spaces up to the note to be identified. OR
 - b. count down the staff and backwards, "1, 7, 6..."
 4. Under the note, write the number with a caret on top.

1. IDENTIFY the keys and scale degrees.



Ch. 11. Scale Degrees and Roman Numerals

11.3 Identify notes by scale degree names

1̇	tonic
2	supertonic
3	mediant
4	subdominant
5̂	dominant
6̂	submediant
7̂	in major and when raised in minor.....	leading tone

- Each scale degree has a name as well as a number. Refer to the above chart to identify scale degrees by name.

IDENTIFY the notes in the following phrase by their scale degree names.

1 2 3 4 5 6 7 8 9 10 11

- | | |
|----------------|-----------|
| 1. Tonic _____ | 7. _____ |
| 2. _____ | 8. _____ |
| 3. _____ | 9. _____ |
| 4. _____ | 10. _____ |
| 5. _____ | 11. _____ |
| 6. _____ | |

Ch. 11. Scale Degrees and Roman Numerals

11.4 Identify triads by scale degree of the root

1. IDENTIFY the key and the scale degree name of the root of each triad.

March

key _____

super-

tonic

2. IDENTIFY the key, the scale degree number of the root, and the type of triad (major, minor, diminished or augmented). Abbreviate the triad type.

MAJOR KEYS:

Example

F: $\hat{3}$ min. _____

MINOR KEYS:

Example

d: $\hat{5}$ Maj. _____

min. key min. key min. key min. key

Ch. 11. Scale Degrees and Roman Numerals

11.5 Identify triads in order by their Roman numerals: major keys

Ex. 1 Ex. 2 Ex. 3 Ex. 4

F: IV F: iii F: vii° f: III⁺

The image shows four musical examples of triads on a treble clef staff with a key signature of one flat (F major or f minor).
 Ex. 1: F major triad (F4, A4, C5) labeled F: IV.
 Ex. 2: F minor triad (F4, A♭4, C5) labeled F: iii.
 Ex. 3: F diminished triad (F4, A♭4, B♭4) labeled F: vii°.
 Ex. 4: F augmented triad (F4, A4, C♯5) labeled f: III⁺.

- A triad's Roman numeral shows both the scale degree of the root and the type of triad (major, minor, diminished or augmented).
- The scale degree of the root is shown by the Roman numeral itself. The numbers 1 – 7 in capital Roman numerals are:
 I II III IV V VI VII
- The type of triad is shown by how the Roman numeral is written and by symbols which sometimes follow:
 - Major triads are written capital (Example 1 at the top of the page).
 - Minor triads are written lower case (Example 2)
 - Diminished triads are written lower case with a circle (Example 3).
 - Augmented triads are written upper case with a plus sign (Example 4).

1. IDENTIFY the triads with Roman numerals according to the chord type. The key signature applies to the whole line.
2. Then COMPARE how each numeral is written for the three keys.

D: I _____ _____ IV _____ _____ vii°

The image shows a treble clef staff with a key signature of two sharps (D major). Seven triads are shown on the staff. The first triad is D major (D4, F#4, A4) labeled D: I. The fourth triad is D major (D4, F#4, A4) labeled IV. The seventh triad is D diminished (D4, F4, G4) labeled vii°. There are blank lines for identifying the other triads.

Bb: _____ ii _____ _____ _____ _____ _____

The image shows a treble clef staff with a key signature of two flats (Bb major). The second triad is Bb minor (Bb4, D4, F4) labeled ii. There are blank lines for identifying the other triads.

Eb: _____ _____ iii _____ _____ _____ _____

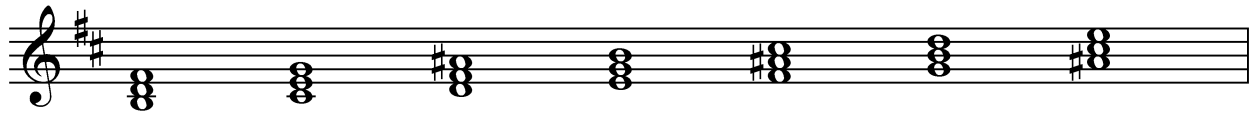
The image shows a treble clef staff with a key signature of three flats (Eb major). The third triad is Eb minor (Eb4, Gb4, Bb4) labeled iii. There are blank lines for identifying the other triads.

Ch. 11. Scale Degrees and Roman Numerals


11.6 Identify triads in order by their Roman numerals: minor keys

- This book uses the harmonic minor scale when triads are in minor keys.
- Recall that in harmonic minor $\hat{7}$ is raised a half step.

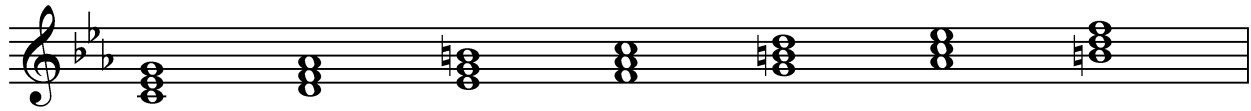
1. IDENTIFY the triads below with Roman numerals according to chord type, as in the previous page. NOTICE the minor keys and the raised $\hat{7}$.



bm: i _____ III⁺ _____ _____ VI _____



gm: _____ _____ _____ _____ _____ _____ _____



cm: _____ ii^o _____ _____ _____ _____ _____

Ch. 11. Scale Degrees and Roman Numerals

11.7 Identify triads on random roots by Roman numerals

<p style="text-align: center;">Major Keys: I ii iii IV V vi vii°</p> <p style="text-align: center;">Harmonic Minor: i ii° III⁺ iv V VI vii°</p>
--

The previous two worksheets demonstrate that:

- The order of triad types on successive scale degrees is the same for all major keys, and
- Another order holds for all minor keys using the harmonic minor scale.
- The chart at the top of the page shows the sequences with Roman numerals.

In major the order is:

1.major, 2.minor, 3.minor, 4.major, 5.major, 6.minor, 7.diminished

In harmonic minor the order is:

1.minor, 2.diminished, 3.augmented, 4.minor, 5.major 6.major, 7.diminished

1. MEMORIZE the order of triad types in major and harmonic minor.

2. IDENTIFY the keys and Roman numerals for the following triads.

Example



A: vii° _____



MINOR KEYS!



bmin: _____



Ch. 11. Scale Degrees and Roman Numerals

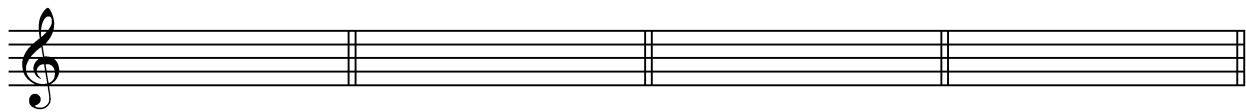
11.8 Review and write triads given the key and Roman numeral

• Sometimes accidentals are written beside Roman numerals to remind you that a chord tone is raised in harmonic minor.


However, there is no way to show that the root of vii° is raised.

An accidental by itself means raise the third.

1. WRITE the key signature and triad according to the Roman numeral.
RAISE $\hat{7}$ in minor keys. Accidentals do not appear next to vii° as reminders.



D: ii Gb: V f min: V $\frac{1}{2}$ g min: III⁺5 \sharp




c \sharp min: V \sharp e min: vii° f \sharp min: vii° G: IV

2. IDENTIFY the key, Roman numeral, and scale degree name of the root.
All keys are MINOR.



min. min. min. min. min. min.

3. IDENTIFY the key and the Roman numerals for this music. Combine the notes above each brace to complete a triad. WHAT IS THIS ACCOMPANIMENT?



key _____

Chapter 12 Triad Inversions, 1: Letters for Roots

In this chapter you will:

- | | |
|---|--|
| 1. Invert triads | 5. Review inversions and write abbreviated Arabic numerals |
| 2. Identify inversions with Arabic numerals | 6. Notate inverted triads |
| 3. Identify roots of inverted triads | 7. Review inversions and Roman numerals |
| 4. Complete a chart about triad inversions | |

12.1 Invert Triads

Diagram illustrating the inversion of a triad. The first three chords are E major in root position, first inversion, and second inversion. The second three chords are E major in root position, first inversion, and second inversion, with arrows pointing to the root (E), third (G), and fifth (B) notes respectively.

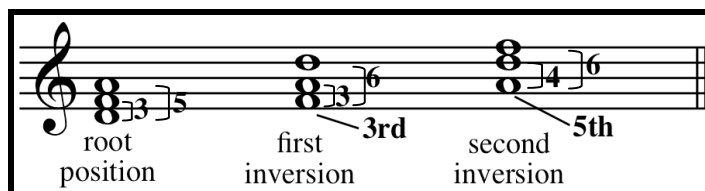
- To invert a chord, raise the bottom note to a higher octave.
- A root position chord is stacked in thirds, as in previous chapters. See the first chord above.
- A first inversion chord is a root position chord which has been inverted once. See the second chord above.
- A second inversion chord is a root position chord which has been inverted twice. See the third chord above.
- Letter names for the root, third and fifth remain the same after inversion. Therefore an E chord (a chord whose root is E) remains an E chord after inversion. See the three E chords above and on the right.

1. INVERT these triads.

2. a. CIRCLE the root of these triads.
 b. INVERT the triads.
 c. CIRCLE the root of the inversion.

12. Inverted Triads, 1: Letters as Roots

12.2 Identify inversions with Arabic numerals



- Root position triads are given the numbers $\overset{\text{5}}{\underset{\text{3}}{\text{3}}}$. These numbers are often omitted.
- First inversion triads are given the numbers $\overset{\text{6}}{\underset{\text{3}}{\text{3}}}$, usually abbreviated 6.
- Second inversion triads are given the numbers $\overset{\text{6}}{\underset{\text{4}}{\text{4}}}$. They are never abbreviated.
- These numbers are called Arabic numerals (as distinguished from *Roman* numerals).
- Arabic numerals are intervals between the bottom note and the other two notes of the triad. See the bracketed intervals in the above illustration.
- The third is always on the bottom of a first inversion triad and the fifth is always on the bottom of a second inversion triad.

- a. IDENTIFY as root position, 1st or 2nd inversion.
b. WRITE the full Arabic numerals (both numbers).

Example

2nd inversion
 $\frac{6}{4}$

- a. IDENTIFY the triad as root position, 1st or 2nd inversion.
b. IDENTIFY the bottom note as the root, third or fifth of the chord.

Example

2nd inversion
bottom: 5th

bottom: _____

bottom: _____

bottom: _____

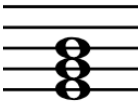
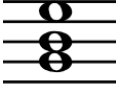
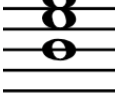
bottom: _____

- WRITE full Arabic numerals under each triad in this arrangement of "Taps."

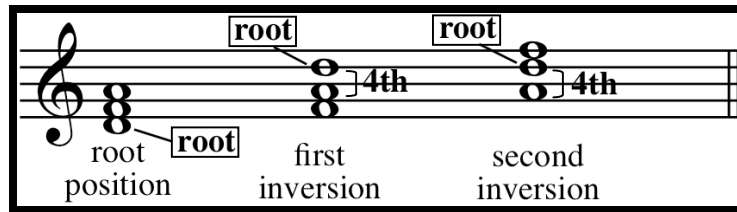
12. Inverted Triads, 1: Letters as Roots

Reference Sheet

MEMORIZE the following chart.

On the staff			
Full Arabic numerals	5 3	6 3	6 4
Abbreviated Arabic numerals	(left blank)	6	$\frac{6}{4}$ (no abbreviation)
Name	Root position	First inversion	Second inversion
Bottom note	root	third	fifth

12.3 Identify roots of inverted triads



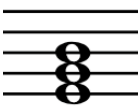
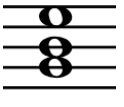
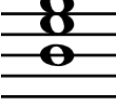
- Recall that the root is on the bottom of a root position triad.
- The root of an inverted triad is the top note of the interval of a fourth.
- The notes of a fourth are always one on a line and one in a space.

1. WRITE the letter of the root of these inverted and root position triads.
2. WRITE abbreviated Arabic numerals next to the letter (write no Arabic numerals for root position and recall that there is no abbreviation for second inversion).

12. Inverted Triads, 1: Letters as Roots

12.4 Complete a chart

COMPLETE this chart from memory.

On the staff			
Full Arabic numerals			
Abbreviated Arabic numerals			$\frac{6}{4}$ (no abbreviation)
Name			
Bottom note	root		

12. Inverted Triads, 1: Letters as Roots

12.5 Review inversions and write abbreviated Arabic numerals

1. ANALYZE the following triads.

- IDENTIFY the triad as root pos., 1st Inv. or 2nd Inv.
- WRITE **ABBREVIATED** Arabic numerals (LEAVE BLANK for root position triads).
- WRITE the letter of the root.
- IDENTIFY the bottom note as the root, third or fifth of the triad.




a. *1st Inv.* b. *6* a. _____ b. _____ a. _____ b. _____ a. _____ b. _____
 c. *F* d. *3rd* c. _____ d. _____ c. _____ d. _____ c. _____ d. _____



a. _____ b. _____ a. _____ b. _____ a. _____ b. _____ a. _____ b. _____
 c. _____ d. _____ c. _____ d. _____ c. _____ d. _____ c. _____ d. _____

2. ANALYZE the chords in the following folk song.

- WRITE letter names of roots and abbreviated Arabic numerals both in the same space below each triad.



- WRITE, for the above music, the scale degree name (tonic, supertonic...) of the roots of the triads with numbers above them.


Triad	Scale Degree Name	Triad	Scale Degree Name
1.		4.	
2.		5.	
3.		6.	

12. Inverted Triads, 1: Letters as Roots

12.6 Notate inverted triads

1. Write a 2nd inversion triad, method 1


To write: A maj $\frac{6}{4}$



Step 1 Step 2 Step 3

2. Alternate method

To write: A maj $\frac{6}{4}$



Step 1 Step 2 Step 3

- A chord tone is a member of a chord with no specific octave.
"Chord tone" is a general term, like "letter names" for notes.
- Dots on the staff represent chord tones.
- To write inverted triads follow these steps carefully*
 1. Write a root position triad with chord tone dots. See both illustrations above.
 2. Add sharps or flats for the given chord quality (major, minor, diminished or augmented).
 3. Invert the triad:
For first inversion, invert once.
For second inversion, EITHER invert twice (Illustration 1, above),
OR bring the fifth below the root (Illustration 2).

* Do not immediately write an inverted triad with the given root as the bottom note. Your triad will have the wrong root and you will not be able to alter notes to get the correct chord quality.

NOTATE these triads.




F# min 6

G min $\frac{6}{4}$

A \flat aug 6

B maj



C# dim 6

F# maj $\frac{6}{4}$

A maj 6

D min $\frac{6}{4}$

E Aug

12.7 Review inversions and Roman numerals

1. WRITE

- whether the triad is root position, 1st or 2nd inversion
- whether the root, 3rd or 5th is on the bottom
- the abbreviated Arabic numerals (if applicable)



a. ___ b. ___ c. ___ a. ___ b. ___ c. ___ a. ___ b. ___ c. ___ a. ___ b. ___ c. ___ a. ___ b. ___ c. ___

2. WRITE the key followed by a colon, and the Roman numeral.

a. Major keys

still bass clef!

A musical staff with five triads. From left to right: 1. Root position C major triad (C4, E4, G4). 2. First inversion F major triad (F4, A4, C5) with a bass clef. 3. Root position D major triad (D4, F#4, A4). 4. First inversion B major triad (B4, D5, F#5) with a bass clef. 5. Root position E major triad (E4, G#4, B4).

b. Minor keys

A musical staff with five triads. From left to right: 1. First inversion F# minor triad (F#4, A4, C5). 2. First inversion Bb minor triad (Bb4, Db5, Fb5). 3. Root position D minor triad (D4, F4, Ab4). 4. First inversion G minor triad (G4, Bb4, Db5). 5. Root position Eb minor triad (Eb4, Gb4, Bb4).

Chapter 13 Triad Inversions, 2: Roman Numerals for Roots

In this chapter you will:

- | | |
|---|--|
| 1. Identify inverted triads with Roman numerals | 4. Identify inverted triads in four parts |
| 2. Write Inverted triads given keys and Roman numerals | 5. Review identifying and writing triad qualities and inversions |
| 3. Identify inversions with wide spacings and doublings | |

13.1 Identify inverted triads with Roman numerals

- To find the Roman numeral of a triad call the key note "one" and count up from the key to the root.
- The Roman numeral is named after the root of the triad, not the bottom note.

1. WRITE the major key, the Roman numeral, and the figures ($\frac{6}{4}$, 6 or blank) for these triads.

Example

F: vii° $\frac{6}{4}$ _____

2. WRITE the key. PLACE the Roman numeral and the figures for each triad on the same line:

3. WRITE the MINOR key, the Roman numeral, and the figures ($\frac{6}{4}$, 6 or blank)

minor! _____

12. Inverted Triads, 1: Letters as Roots

13.2 Write inverted triads given keys and Roman numerals

Step: 1 2 3 1 2 3 OR

g min: V⁶ A maj: ii⁴

To write an inverted triad given a key, Roman numeral and figures:

1. Find the root by calling the key note "one" and counting up from the key to the note specified by the Roman numeral. Put a dot (a chord tone) on that note.
2. Draw dots for the third and fifth to form a root position triad. Raise any of the three notes a half-step if it is the seventh note of a minor key. Frequently these raised notes will not be reflected in the figures.
3. Invert the triad:
 - For first inversion (6) invert once by raising the root an octave.
 - For second inversion (4) EITHER invert twice OR bring the fifth down an octave.

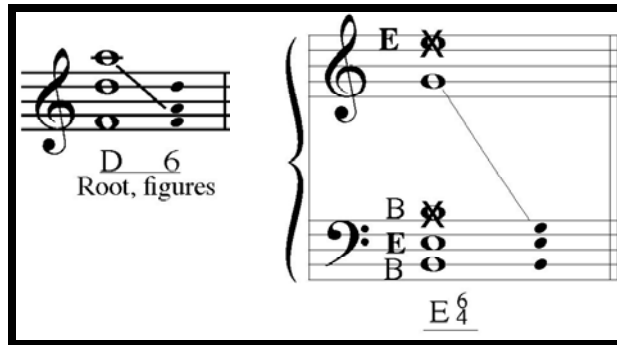
WRITE the indicated key signatures and inverted triads.

CAREFUL: the figures on this page will not indicate raised notes in minor.

D Maj: vi⁶ f min: V⁴ d min: ii^{°6} B maj: IV⁴ C min: vii^{°6}


A Maj: ii⁴ G Maj: V⁶ C# min: III+⁴ E min: VI⁶ Eb Maj: I⁴


13.3 Identify inversions with wide spacings and doublings



- The notes of a triad are not always as close as possible. The distance between notes in a chord is called the chord's spacing.
 - To identify inversions of triads whose notes' spacing is spread out, bring high notes down as many octaves as needed to be close to the lowest note, but not below the lowest note. Then analyze the triad as in previous pages. See the first example above.
- While a triad has only three chord tones—three letter names—each chord tone may appear any number of times in different octaves in a chord. Chord tones which appear twice in the same triad are called doublings.
 - To identify inversions of triads whose notes are doubled, cross out higher octaves of doubled notes--never eliminate the lowest note. See the second example above.

WRITE the letter of the root and figures, if needed, for these triads.





13.4 Identify inverted triads in four parts

- When analyzing chords it is sometimes helpful to write the letter name of each note.

IDENTIFY the key, the Roman numeral and inversion figures. PLACE the Roman numerals and inversions on the same line.

1. Major keys


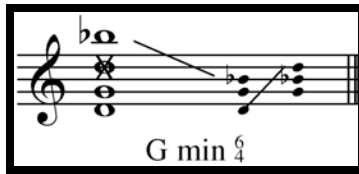
key triad _____

2. Minor keys. Figures do NOT need to reflect accidentals.

3. In a musical context

13. Inverted Triads, 2: Roman Numerals for Roots

13.5 Review identifying and writing triad qualities and inversions



To identify a triad's root, inversion and quality (major, minor, diminished or augmented):

- cross out higher octaves of doubled chord tones,
- bring down chord tones so they are close to, but not below the lowest note,
- find the root: if in root position, the bottom note; if inverted, the top of the fourth,
- find the inversion by counting intervals above the bottom note
- put in root position if needed and analyze the quality as in Chapter 10.

To write a triad given its root, quality and inversion:


- draw dots for chord tones in root position, including the accidental, if needed, for the root.
Hint: Do not immediately write an inverted triad.
- while still in root position place accidentals if needed according to the given chord quality,
- invert the triad as in Worksheet 13.2, step 3.

1. IDENTIFY the letter of the triad's root, its quality and its inversion.

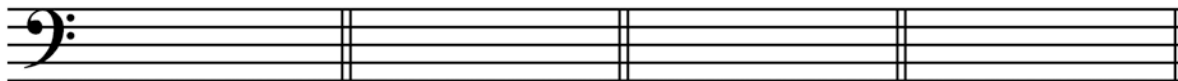




2. WRITE the triad given its root, quality and inversion.



F Aug ⁶/₄ D dim 6 G min ⁶/₄ A# min C dim 6




D^b Aug ⁶/₄ F# min 6 D Aug ⁶/₄ B min 6

Chapter 14 Writing Triads in Four Parts

In this chapter you will:

1. Recognize voices in four parts
2. Distinguish voices by staff and stem
3. Find doubled notes and inversions
4. Learn about close and open spacing
5. Write triads in close spacing
6. Write triads in open spacing
7. Find common tones for two triads
8. Find common tones and relate them to voices

14.1 Recognize voices in four parts



The image shows a musical score for the hymn "My Country 'Tis of Thee" arranged in four parts: soprano, alto, tenor, and bass. The score is written in 3/4 time with a key signature of one sharp (F#). Each part is represented by a staff with a clef and a label. The soprano part is on the top staff (treble clef), the alto on the second staff (treble clef), the tenor on the third staff (treble clef), and the bass on the bottom staff (bass clef). The notes are arranged in triads, with one note in each part being doubled.

This arrangement of “My Country ‘Tis of Thee” is written in four parts. These parts are modeled after the vocal parts in a chorus:

- The top voice is the soprano (high women’s voice).
- The next lowest is the alto (low women’s voice).
- Next is the tenor (high men’s voice).
- The lowest is the bass (low men’s voice).

- The terms “voice” and “part” are interchangeable.

In Chapter 14 you will learn to write chords as they are written above:

- All the chords are triads so each one has three chord tones only. Since there are four notes per chord, one chord tone is always doubled.
- In root position triads the root is usually the doubled chord tone.


LABEL each of the following notes by voice. Use the letters S, A, T and B as abbreviations.



The image shows a musical score with four staves, each labeled with a voice part: S (soprano), A (alto), T (tenor), and B (bass). The notes are arranged in triads, with one note in each part being doubled. The notes are: Soprano (G4, A4, B4), Alto (F4, G4, A4), Tenor (E4, F4, G4), and Bass (C4, D4, E4). The notes are written on a grand staff with a treble clef for the top two staves and a bass clef for the bottom two staves.

Pathways to Harmony, Chapter 14. Writing Triads in Four Parts

14.2 Distinguish voices by staff and stem



• Music in four voices will be written on grand staves. A grand staff is two staves joined together as in piano music.

To help distinguish the voices visually when four parts are written on a grand staff:

- The soprano and alto are written on the top staff, and
- The tenor and bass are written on the bottom staff. Sometimes this placement requires several ledger lines. See tenor in Example 1.
- Stems for soprano and tenor notes go up, and
- Stems for alto and bass notes go down.
- When adjacent voices sing the same note, a single notehead gets two stems. See Example 2.

1. NAME the voice written on the wrong staff. If all voices are correct, write “correct.”



2. CREATE half notes by adding a stem to every note in the proper direction.

Provide stems.



Pathways to Harmony, Chapter 14. Writing Triads in Four Parts

14.3 Find doubled notes and inversions

1. REWRITE the following chords in four parts. The rewritten notes should be in the same octave as the original notes. ADD stems to make the notes half notes.

Example

2. IDENTIFY the doubled chord tone as the root, third or fifth.

Example

third
(two C's) _____

3. WRITE inversion figures (5/3, 6/3, or 6/4) and the doubled note for each of these chords:

Example

$\frac{6}{3}$ *third* _____

Pathways to Harmony, Chapter 14. Writing Triads in Four Parts

14.4 Learn about close and open spacing

The diagram illustrates two methods for spacing triads in four parts. On the left, 'Close Spacing' shows a triad with notes as close as possible below the top three voices. On the right, 'Open Spacing' shows a triad with one chord tone between each of the top three voices. Both diagrams show the chord tones in the bass and tenor parts.

Close Spacing: Given the chord tones below, the top 3 voices are as close as possible

Open Spacing: One, and only one, chord tone between each of the top 3 voices

• Recall from Book 2 that a chord tone is a note of a chord for which an octave is not specified. Chord tones are notated with small noteheads without stems.

Follow these spacing and doubling suggestions:

- Adjacent voices, except bass and tenor, should never be more than an octave apart.
- In root position, double the root.

This spacing and doubling can be achieved by spacing the top three voices in either of these ways:

- In close spacing--when there are no chord tones between the top three voices. OR
- In open spacing--when there is one, and only one, chord tone between each of the top three voices.
- The interval between the bass and tenor does not matter in determining close and open spacing.

The chords in the following phrase are in open spacing.
DRAW a dot for the chord tone between each of the top three voices.

Example: A four-part setting of a triad in open spacing. The top three voices (Soprano, Alto, Tenor) have one chord tone between each voice. The bass part has the root of the chord.

- In Bach's time the alto part in choral music was written in alto clef.
- In alto clef the middle line is middle C.

REWRITE the alto part in the above phrase in alto clef.

A blank musical staff in alto clef (C-clef on the third line) with a key signature of one sharp (F#) and a common time signature (C).

Pathways to Harmony, Chapter 14. Writing Triads in Four Parts

14.5 Write triads in close spacing

1. IDENTIFY these triads as being in close or open spacing.

Example

close

2. WRITE the key, Roman numeral, inversion figures and the doubled note for each of the following chords. IDENTIFY the doubled note as the root, third or fifth.

Example

G: ii 5
key Rom Num Inv.

root
doubling

3. FILL IN the alto and tenor by using close spacing. All chords are in root position.

Start with the top note and work down:

a. First write the alto so that there are no chord tones between the alto and soprano.

b. Then fill in the tenor so there are no chord tones between the tenor and the alto.

Example

f minor d diminished G Major G augmented c minor A Major

Pathways to Harmony, Chapter 14. Writing Triads in Four Parts

14.6 Write triads in both open and close spacing

1. COMPLETE rewriting these triads in open spacing. Always work from the top note down.

Example

One chord tone in between

choose top note

choose top and bottom notes

2. FILL IN the missing voices according to the given spacing.

open close open close choose 3 notes open choose 4 notes close choose 4 notes

G diminished F# minor C Augmented E Major F Major root position G minor root position

3. WRITE key signatures and missing voices. All triads are in root position.

open close open Use harmonic minor. Raise 7. close

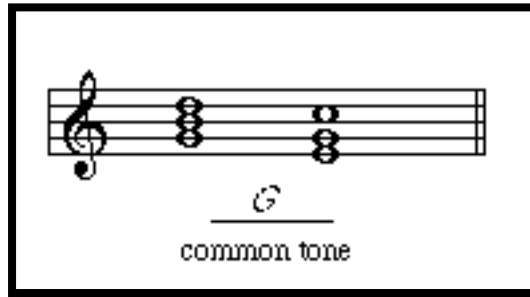
B: tonic g: ii° b: v3# A: subdominant

open close open close

f: III^{5b+} f#: v3# E: submediant E: IV

Pathways to Harmony, Chapter 14. Writing Triads in Four Parts

14.7 Find the common tone for two triads



When moving from one chord to another it is important to be able to identify the note(s) common to both chords--the common tone(s).

IDENTIFY the common tones for these pairs of triads. They may be in different octaves.

Pathways to Harmony, Chapter 14. Writing Triads in Four Parts

14.8 Find common tones and relate them to voices

no common tones	2 common tones	1 common tone
root movement: by step (same as down a 7th)	by 3rd (same as down a 6th)	by 5th (same as down a 4th)

If one chord follows another and:

- if the root moves by step or by seventh, then the two chords have no common tones.
- if the root moves by third or by sixth, then the two chords have two common tones.
- if the root moves by fourth or by fifth, then the two chords have one common tone.

In root position chords, look at the bass to find the number of common tones.

1. WRITE the number of common tones, 0, 1 or 2, below each pair of chords.

All chords are in root position.

2. For each pair of chords, WRITE “same” if the common tone is kept in the same voice or WRITE “different” if the common tone moves to a different voice.

Example 1	Example 2				
<u>same</u> (tenor)	<u>different</u> same note, different voice	_____	_____	_____	_____

Chapter 15 The Smoothest Voice Leading: Common Tone-Stepwise and Contrary Motion-Nearest

In this chapter you will:

1. Study a phrase of choral music
2. Connect two chords with Common Tone-Stepwise (CTS) voice leading
3. Write more chords with CTS; one common tone, root by 5th (4th)
4. Write more chords with CTS: two common tones, root by 3rd (6th)
5. Harmonize a phrase using CTS
6. Identify contrary, oblique, similar and parallel motion
7. Connect chords with Contrary Motion-Nearest (CMN) voice leading; root by step
8. Harmonize a phrase using CTS and CMN

15.1 Study a phrase of choral music

The image shows two musical examples side-by-side. The left example, labeled 'common' and 'smooth voice leading', shows a treble and bass staff with notes moving in a stepwise fashion between two chords. The right example, labeled 'avoided' and 'voice leading with large skips', shows the same two chords but with notes that skip intervals (e.g., a fourth or fifth) between the two chords. Arrows indicate the movement of individual voices.

•To write a series of chords typical of what you might hear in a church choir, you must look at each note and be aware of how that voice is moving. Is the voice going up, going down, or staying the same? Does it move by step or by skip? This melodic movement is called voice leading.

•The ideal voice leading in this style is smooth. See the examples above and the Christmas carol at the bottom of the page. In the carol the voices usually stay on the same note or move by step. No voice has a melodic leap of more than a fourth. This kind of writing creates a flowing sound that is easy for the singers to read. Chapter 15 will teach you to write in this way using two techniques:

Common Tone-Stepwise (CTS) and Contrary Motion-Nearest (CMN).*

WRITE the key and Roman numerals in the blanks for this Christmas carol. The key is MINOR.

The image shows a musical score for a Christmas carol in 3/4 time. It consists of a treble and bass staff. The key signature has three flats (B-flat, E-flat, A-flat). The melody is written in the treble staff, and the bass line is in the bass staff. The music is in a minor key.

*The terms “Common Tone-Stepwise” and “Contrary Motion-Nearest” are taken from the books *Scales, Intervals, Keys, Triads, Rhythm and Meter* and *Basic Harmonic Progressions*, both by J. Clough and J. Conley.

15.2 Connect two chords with Common Tone-Stepwise (CTS) voice leading

Given:

- Common Tone-Stepwise (CTS) is a kind of voice leading which keeps the movement of the top three voices as smooth as possible. These voices either stay stationary or move by step. (Unlike the other voices, the bass will skip to the next note.) CTS can be used whenever the chords are in root position and there is a common tone between the chords.
- To write the top three voices of a second chord using CTS voice leading, refer to the above example and follow these steps:
 1. Identify the chord tones with dots.
 2. Find the common tone, and identify it among the top three voices of the first chord. Write it in the second chord in the same voice in which it appeared in the first chord.
 3. In the remaining voices, draw arrows from the notes in the first chord to the lines and spaces that represent chord tones one step away.
 4. In the voice with one arrow, write the note indicated by that arrow.
 5. In the remaining voice, write the note which completes the triad--one chord tone will be missing.

WRITE the top three voices for the second chord using CTS voice leading. USE all five steps.

Fill in keys and Roman Numerals.

15.3 Write more chords with CTS; one common tone, root by 5th (4th)

C: ii vi

•With practice you will be able to skip some of the steps in the previous worksheet and remember just three basic steps:

1. Find the common tone and keep it in the same voice.
2. Move the voice with no choice by step.
3. Move the remaining voice by step to complete the triad.

1. WRITE the missing notes using CTS voice leading. DO NOT DRAW arrows.


2. FILL IN the missing information.

d: V3# i e: i V3# E: _____

write key signatures open spacing close spacing open spacing

Bb: _____ G: _____ minor key

15.4 Write more chords with CTS: two common tones, root by 3rd (6th)



- CTS also can be used when root movement is by 3rd (or 6th) and there are two common tones.
- Combining the steps on worksheet 15.3 to apply to root movement by 3rd, 4th, 5th and 6th:
 1. Find the common tone(s) and keep it (them) in the same voice(s).
 2. Move the remaining voice(s) by step while completing the triad.
- When choosing the notes of an initial chord, use open or close spacing.

WRITE the missing notes using CTS voice leading, and
FILL IN the missing information.

D: I vi _____ f#: _____ _____
close spacing
minor

Some of the following have root movement by 4th (5th). Choose open or close spacing.

c: i V34 _____ 3x _____ d: i V3# d: ii° iv d: i III5#
minor

15.5 Harmonize a phrase using CTS

•To harmonize a phrase of music, always connect each chord to the previous chord, even over the bar line.

1. WRITE the top three voices in this phrase using CTS voice leading.

D: I vi ii V I

2. PLAY or ASK someone to play your phrase, or COPY your phrase on a computer.
LISTEN to it.
HOW DOES IT SOUND?

15.6 Identify contrary, oblique, similar and parallel motion

The image shows four musical staves illustrating different types of motion between two voices:

- Contrary motion:** Two voices move in opposite directions. Example: C4 and G4 moving towards each other.
- Oblique motion:** One voice remains stationary while the other moves. Example: C4 and G4, with G4 moving to F4.
- Similar motion:** Two voices move in the same direction but by different intervals. Example: C4 and G4 moving to D4 and A4.
- Parallel motion:** Two voices move in the same direction by the same interval. Example: C4 and G4 moving to D4 and A4.

Below the parallel motion example, there is a table:

Parallel thirds OK	Parallel perfect fifths AVOID THIS	Parallel perfect octaves AVOID THIS
-----------------------	---------------------------------------	--

- When two voices move in different directions, the motion is called contrary.
 - When one voice remains the same while the other moves, the motion is called oblique.
 - When two voices move in the same direction the motion is called similar.
 - When two voices move in similar motion by the same amount, the motion is called parallel.
- Always avoid parallel perfect octaves and fifths in the four part music for these workbooks.

LABEL the motion in these exercises.

The exercise consists of a single staff with five measures of music. Each measure contains two voices (treble and bass clef) with notes connected by lines to show their movement. The measures are separated by double bar lines.

15.7 Connect chords with Contrary Motion-Nearest (CMN); root by step

The three top voices move in contrary motion to the bass.

C: I ii

- Contrary Motion-Nearest (CMN) is a kind of voice leading which is used when root movement is by step (or 7th) and there are no common tones. CMN provides the smoothest possible voice leading while avoiding parallel octaves and fifths.
- In CMN voice leading, the top three voices move contrary to the bass to the nearest chord tone. Two voices move by step and one voice skips a third.
- CMN can be used for leaps in the bass of a 7th in root position chords, but this melodic interval is rare and will not be used in the following exercises.

WRITE the missing voices and FILL IN the missing information.

F: iii IV A: I ii Eb: vi V Eb: iii ii

choose soprano and spacing

15.8 Harmonize a phrase using CTS and CMN

When deciding between CTS and CMN, first see if there are any common tones in adjacent chords.

- If there are any common tones, you must use CTS. Do not use CMN if there are common tones.
- If there are no common tones, you must use CMN.

1. FILL IN the chords' Roman numerals in the spaces below the staff
2. WRITE the top three voices in this phrase using CTS and CMN voice leading, where appropriate.

F: I _____

3. PLAY or ASK someone to play your phrase, or COPY your phrase on a computer.
LISTEN to it.
HOW DOES IT SOUND?

Chapter 16 CTS and CMN in Musical Phrases

In this chapter you will:

- | | |
|--|--|
| 1. Identify CTS and CMN voice leading | 6. Keep voices in their ranges, and avoid voice crossings and overlapping voices |
| 2. Decide on CTS or CMN voice leading | 7. Harmonize more phrases with CTS and CMN |
| 3. Use CTS and CMN in short phrases | 8. Harmonize a longer phrase |
| 4. Write a phrase for string quartet | |
| 5. Recognize voice crossing and overlapping voices | |

16.1 Identify CTS and CMN voice leading

In this arrangement of “Good King Wenceslas” the voice leading is always CTS or CMN with the addition of these notes in the soprano:

- In measure 1, beat 2, there is a repeated note
- In measure 1, beat 4 and in measure 3, beat 2, there are notes which move away by step and then back to the same note. These notes are called neighbor notes.
- In measure 3, beat 4, there is a passing tone. See worksheet 15.8.
- In measure 2, beat 3, there are changes in the top three voices over a repeated root in the bass.

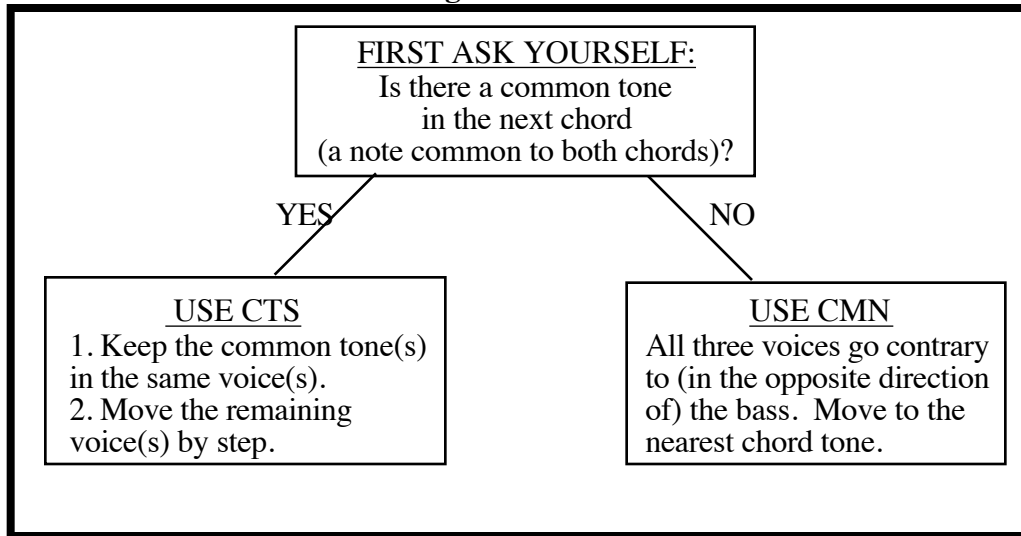
In Chapter 16 you will harmonize full phrases of music and provide rhythmic and melodic interest by inserting notes, similar to those above, between chords.

The Roman Numerals below refer to the phrase at the top of the page.

IDENTIFY the kind of voice leading between each chord as CTS or CMN in the spaces provided.

I ____ vi ____ I (change in top voices) I ____ IV ____ ii ____ I

16.2 Decide on CTS or CMN voice leading



- To decide on the proper voice leading when given a bass line for root position chords, follow the above chart.
- Recall from worksheet 14.8 that when the root moves by step (or 7th) there will be no common tones. Use CMN.
- When the root moves by any other interval there will be at least one common tone. Use CTS.

HOW should the upper voices move, CTS or CMN, for the following pairs of bass notes? Assume root position triads.



16.3 Use CTS and CMN in short phrases

1. WRITE the key and Roman Numerals under these phrases. All chords are in root position.
2. WRITE the top three voices for the whole phrase using CTS and CMN only.
Ignore for now the added tones indicated above the staff.
3. ADD notes between the chords as indicated.

Key _____

In the following phrase after you have finished your harmonization, insert notes of your choice

Key _____

16.4 Write a phrase for string quartet



- String quartets have two violins, a viola and a cello. The two violin parts are written in treble clef, the viola part is written in alto clef and the cello part is written in bass clef.
- In a string quartet each instrument has its own staff. When only one part is written on a staff, the stems go up when the notehead is below the middle line. Otherwise stems go down.
- In transcribing choral music for string quartet, the alto voice will not end up in alto clef. Instead the tenor voice, which becomes the viola part, will be written in alto clef.

1. FOLLOW instructions on the previous worksheet for the following phrase.

2. TRANSCRIBE the above phrase on a score for string quartet.

16.5 Harmonize a bass line

FILL IN the key and Roman numerals.

CHOOSE open or close spacing for the first chord.

CONNECT the chords for the bass line using CTS and CMN only.

16.6 Keep voices in their ranges

Vocal Ranges:

The diagram shows four vocal parts: Bass, Tenor, Alto, and Soprano. The Bass part is in the bass clef, and the other three are in the treble clef. Lines indicate the typical range for each voice part.

When a starting chord or spacing is not given for a phrase, decide on the voicing:

- by looking at the bass line and starting the tenor high enough so that overlapping voices and voice crossings will not occur, AND
- by keeping each voice within the ranges shown above.
- You will be choosing among several correct voicing of the first chord.

In each of the following phrases:

1. FILL IN the key and Roman numerals.
2. DECIDE on the voicing of the initial chord.
3. WRITE the top three voices
4. USE passing tones whenever you use CMN.
5. ADD neighbor notes and repeated notes to provide rhythmic interest.

_____ 3# _____

minor key

16.7 Recognize voice crossing and overlapping voices

Voice Crossings: Avoid these.

Ex. 1

tenor below bass

Ex. 2

tenor above alto

Overlapping voices: avoid these.

Ex. 3

Ex. 4

Not overlapping voices: permissible

Ex. 5

To help distinguish the voices to the ear:

- Keep the voices in order from low to high. That is, avoid voice crossings, such as when the tenor goes below the bass (Example 1) or when the tenor goes above the alto (Example 2).
- Do not write a lower voice above a previous higher voice (Example 3) and do not write a higher voice below a previous lower voice (Example 4). These are examples of overlapping voices and should also be avoided.

A voice may move to a note just sung or played by another voice (Example 5).

1. In the phrase below, in what measure(s) do(es) voice crossings occur? _____
2. Between which voices? _____
3. In what measure(s) do(es) overlapping voices occur? _____
4. In which voices? _____

16.8 Avoid voice crossings and overlapping voices

When the root is repeated you are free to move to another voicing. Be sure it is either open or close spacing. These spacings result in all three chord tones being represented and the root being doubled.

HARMONIZE these phrases.

Remember to **START THE TENOR HIGH ENOUGH** so that overlapping voices and voice crossings will not occur between the tenor and bass.

_____ i 3 4 _____ 3 4 _____

16.9 Harmonize a longer phrase

1. HARMONIZE this phrase.

2. WRITE the scale degree name of the root of each triad in the above phrase.

Measure	Beat	Scale Degree Name
1	1	Tonic
	2	
	3	
	4	
2	1	
	2	
	3	
	4	
3	1	
	3	
4	1	

Chapter 17 The Fundamental Harmonic Progression, I V I

In this chapter you will:

- | | |
|---|---|
| 1. Find the fundamental harmonic progression in a chart | 6. Harmonize $\hat{2}$ as an upper neighbor |
| 2. Find a progression with strong root movement | 7. Insert passing tones |
| 3. Find the fundamental harmonic progression in another chart | 8. Avoid augmented 2nds |
| 4. Expand the tonic triad with lower neighbors | |
| 5. Write the fundamental harmonic progression using CTS | |

17.1 Find the fundamental harmonic progression in a chart

Chapter 17 begins a concept of expanding harmonies which will continue until the end of these workbooks. A simple progression will expand, one chord at a time, and you will learn the voice leading for each chord as it is introduced into the progression. The sequence of chords follows that in a book by Aldwell and Schachter:¹

•In Worksheet 17.4 the tonic triad (I) will expand to form the fundamental harmonic progression:

I V I

In this progression, movement from I to V, like movement away from the familiarity of home, creates some tension. Returning to I, then, releases that tension, just like a return back home.

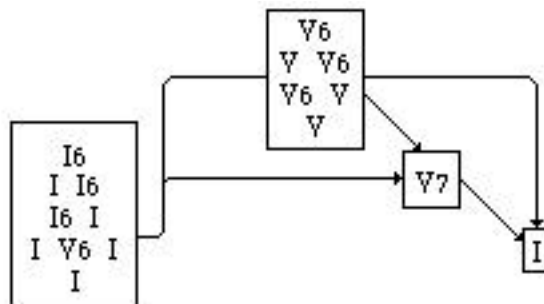
•The initial tonic and the dominant (V) in the fundamental harmonic progression will themselves expand or be elaborated. For instance the initial tonic harmony will move to its first inversion, $I^{6/3}$, without changing the impression of an opening tonic. (The figures $^{6/3}$ are usually abbreviated 6)

I I⁶ V I

•Other chords will elaborate the main harmonies as well. For instance V_6 will expand the initial tonic when it is inserted between two I chords:

I V₆ I V I

•The following chart shows these expansions and the addition of a V_7 chord. This is the chart which introduces Chapter 21 at the beginning of the next workbook.



1. CIRCLE the chords of the fundamental harmonic progression in the above chart.
2. Another term for an expanded harmony is an _____ harmony.
3. The I chord is also called the _____ chord.
4. The V chord is also called the _____ chord.

¹ Aldwell, E. & Schachter, C. *Harmony and Voice Leading* (NY: Harcourt, Brace and Jovanovich, 1989).

17.2 Find a progression with strong root movement

Strong Root Movement

iii vi ii V I

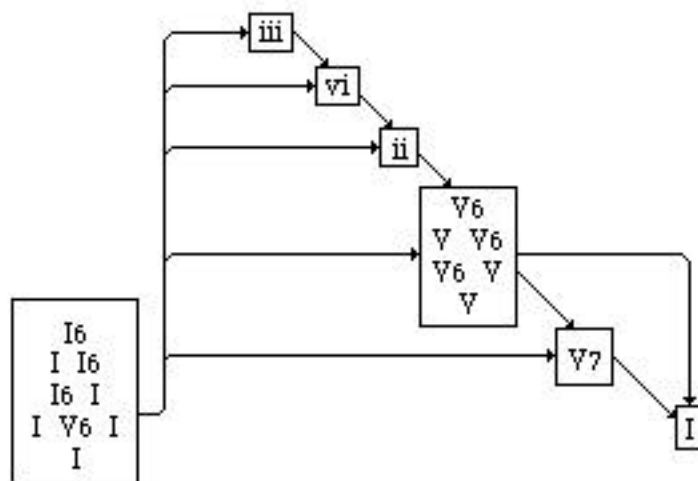
•Remember that I moves to the dominant in the fundamental harmonic progression rather than to some other harmony. The triad built on $\hat{5}$ leads more convincingly back to I than does any other triad in the key. (The importance of $\hat{5}$ has acoustic origins: $\hat{5}$ is the first note of the overtone series after $\hat{1}$.) So the V I progression creates a release of tension and a sense of direction beyond that of returning “home” from any other chord. For this reason V I is called a strong harmonic progression.

•All progressions in which the root falls by perfect fifth, as it does from V to I, are strong progressions. So, as shown at the top of the page, iii moves strongly to vi, vi moves strongly to ii, and ii moves strongly to V.

•In addition to the elaborations on the previous page, iii, vi and ii will expand the fundamental harmonic progression into a series of strong progressions when they are inserted between I and V:

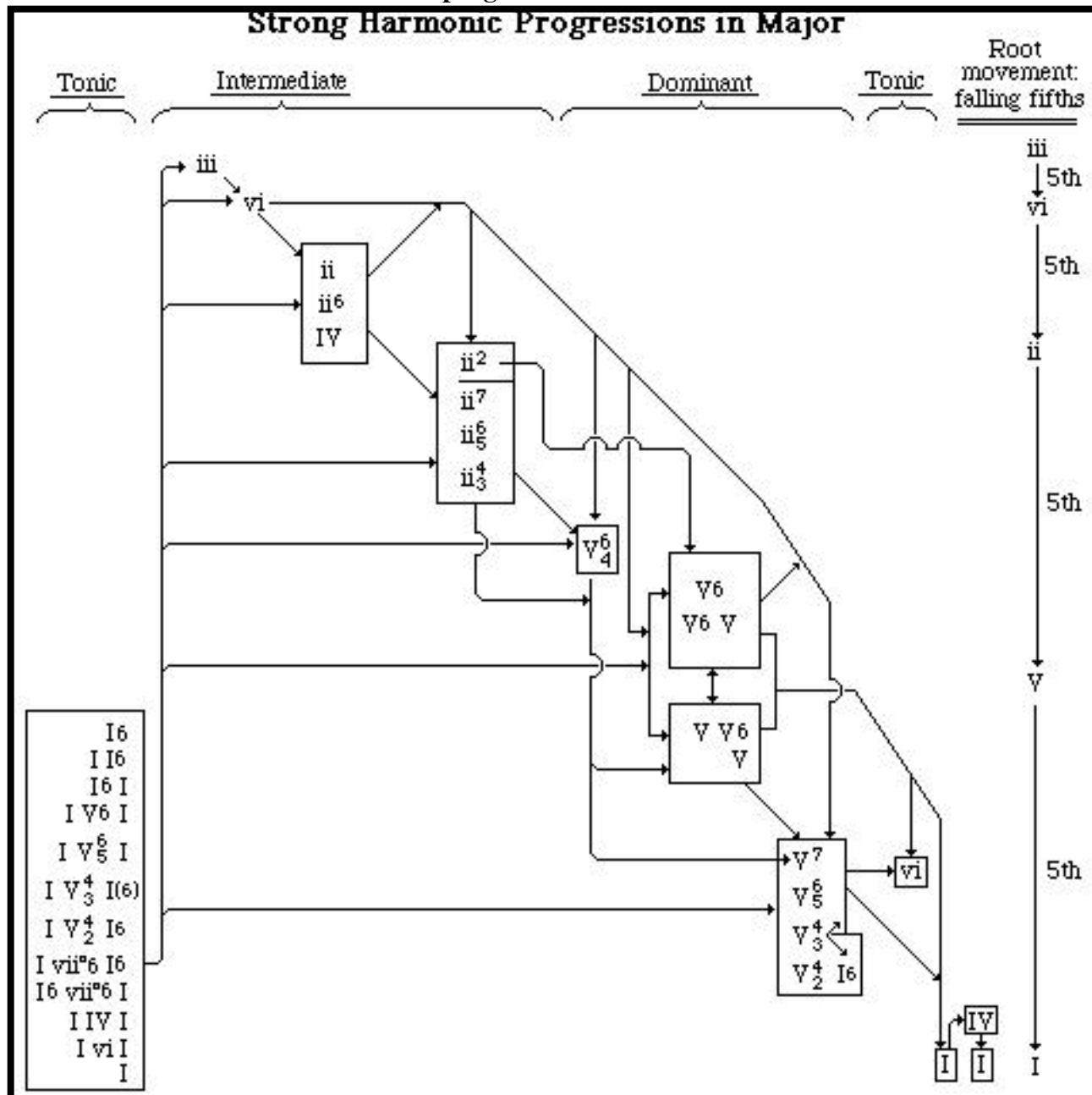
I iii vi ii V I

•The following chart includes these insertions and the elaborations on the previous page:



1. CIRCLE, in the above chart, the chords of the following progression: I6 I vi ii V V6 I.
2. TRACE the arrows between the chords of this progression and make them bold.

17.3 Find the fundamental harmonic progression in another chart



Although you do not need to understand the details of the above chart now, it gives you a glimpse of what you will be studying. By the end of these workbooks the charts on the previous pages will expand into this chart of strong harmonic progressions (not including those in minor).

Strong progressions are the most common ones in tonal music and they often signal structurally important spots in a piece. However, these are not the only progressions that “sound good” or that are “allowable.” Occasionally composers do not want a strong sense of direction in their music. Nevertheless composers are always aware of which progressions are strong and which ones are weak, and composers always choose their harmonies accordingly.

1. CIRCLE the fundamental harmonic progression in the above chart.
2. TRACE the arrows between the chords of this progression and make them bold.

17.4 Expand the tonic triad with lower neighbors

Repeat the chord Add lower neighbors Raise the bass

D: $I \begin{smallmatrix} 5 \\ 3 \end{smallmatrix}$ $\begin{matrix} 8 & 7 & 8 \\ 5 & 5 & 5 \\ 3 & 2 & 3 \end{matrix}$ I $\begin{matrix} 5 \\ 3 \end{matrix}$ I

- The tonic triad (I) is the most stable chord in western music. It provides the most satisfying beginnings and endings for pieces. Consequently the tonic triad's chord tones, $\hat{1}$, $\hat{3}$ and $\hat{5}$, are the most stable notes of the scale.
- The tonic chord expands and grows into almost all the music we hear. Music grows out of this chord with active tones. Active tones are notes which are less stable than the notes around them.
- In the example at the top of the page, the tonic triad is expanded over the course of a few measures. Each measure is like the previous one except for the changes labeled above and within the staves. In measure three the tonic triad is expanded with active tones called lower neighbors (LN). In measure four a rising fifth in the bass is added to the changes already made in the previous measures.
- The numbers below the staff are figures, like the familiar numbers $5/3$, $6/3$ and $6/4$. Figures indicate the intervals of notes above the bass, sometimes with the addition of one or more octaves.
- Lines between two figures show that the figures refer to the same voice. The numbers themselves do not specify the voice in which the higher notes appear.

1. EXPAND a G minor tonic triad by referring to the figures below the staff and the example at the top of the page.

Each measure should be like the previous one except for the changes labeled above and within the staves.

In measure three, lower neighbors do not appear in the same voices as they do at the top of the page. Instead, refer to the figures below the staff.

2. LABEL lower neighbors "LN".

Repeat the chord Add lower neighbors Raise the bass

g: $i \begin{smallmatrix} 5 \\ 3 \end{smallmatrix}$ $\begin{matrix} 8 & 7\# & 8 \\ 5 & 5 & 5 \\ 3 & 2 & 3 \end{matrix}$ i $\begin{matrix} 5 \\ 3\# \end{matrix}$ i

17.6 Harmonize 2̂ as an upper neighbor

- When the fundamental harmonic progression has $\hat{1} \hat{2} \hat{1}$ in the soprano, the active tone $\hat{2}$ is called an upper neighbor. See Example 1.
- With these notes in the soprano, avoid CTS voice leading because CTS results in a missing third in the V chord. See Example 2.
- One good solution is to move the alto and tenor by a third in similar motion to the soprano. See Example 3. Another solution will appear in worksheet 20.5.

WRITE fundamental harmonic progressions in the following keys with soprano $\hat{1} \hat{2} \hat{1}$. LABEL upper neighbors UN.

minor
key

17.7 Insert passing tones

The example shows a piano accompaniment with two staves. The bass line (left) has three measures with figures 5-6-3, 8-7-3, and 5-6-3. The soprano line (right) has three measures with notes corresponding to figures 1-hat, 2-hat, and 1-hat. The notes in the soprano line are G4, A4, and G4, which are passing tones between the chords of the fundamental harmonic progression.

- Whenever a melodic third appears there is the possibility of inserting a passing tone.
- The example above shows passing tones inserted between the chords of the fundamental harmonic progression with $\hat{1} \hat{2} \hat{1}$ in the soprano.
- Passing tones are notated below the staff with figures. Recall from worksheet 17.4 that figures are numbers under the staff showing the intervals of notes above the bass.
- Recall from 17.4 that lines between two figures show that the figures refer to the same voice.

1. HARMONIZE the following fundamental harmonic progressions using $\hat{1} \hat{2} \hat{1}$ in the Soprano.
2. ADD passing tones as indicated by the figures below the staff.

Soprano: $\hat{1} \hat{2} \hat{1} \hat{1} \hat{2} \hat{1} \hat{1} \hat{2} \hat{1}$

The exercise consists of a piano accompaniment with two staves. The bass line (left) has six measures with figures 5-6-3, 8-7-3, 5-6-3, 5-6-3-2-5, 5-6-3, and 3-4-8-7-3. The soprano line (right) is empty, with the figures $\hat{1} \hat{2} \hat{1} \hat{1} \hat{2} \hat{1} \hat{1} \hat{2} \hat{1}$ written above it for the student to harmonize.

17.8 Avoid augmented 2nds

The image shows two musical examples in a grand staff (treble and bass clefs) with a key signature of two flats. Example 1, titled 'Avoid this', shows a melodic line in the bass clef with notes G4, A4, Bb4, C5, Bb4, A4, G4. An 'Augmented 2nds' box highlights the interval between A4 and Bb4. Below the staff are the fingering numbers: 5 — 6 — 3_b — 6 — 5. Example 2, titled 'Better', shows a similar melodic line in the bass clef with notes G4, A4, Bb4, C5, Bb4, A4, G4. Below the staff are the fingering numbers: 5 — 6_b — 3_b — 8 — 7 — 3.

- A tritone is the interval of an augmented fourth or diminished fifth.
- Avoid melodic augmented seconds and tritones.
- The augmented second interrupts the smooth melodic flow in the predominantly scalewise voice leading which you are studying. This interval is the relatively large distance of three half steps, compared to one or two half steps for other distances in the scale.
- Avoid the tritone because, among other reasons, it is hard to sing.
- The augmented second occurs when moving from $\hat{6}$ to a raised $\hat{7}$ in minor, or vice versa. When the fundamental harmonic progression is in minor, a raised $\hat{7}$ appears in the $V\#$ chord. So be careful when $\hat{6}$ is used as a passing tone before or after $V\#$. See Example 1.
- Use the ascending melodic minor scale when rising from $\hat{5}$ to $\hat{7}$ and inserting $\hat{6}$ as a passing tone. Raising both $\hat{6}$ and $\hat{7}$ avoids the augmented second. See the tenor in Example 2.
- Avoid $\hat{6}$ altogether as a passing tone when descending from $\hat{7}$ to $\hat{5}$. Compare the tenor at the end of the measures in Examples 1 and 2.

ADD passing tones of your own in the following $i \ V\# \ i$ phrases. RAISE $\hat{7}$ in the $V\#$ chord, as usual, and AVOID the augmented second. Soprano should be $\hat{1} \ \hat{2} \ \hat{1}$.

The image shows a musical exercise for soprano voice. The vocal line is written in a single staff with a treble clef and a key signature of one sharp (F#). The notes are: $\hat{1}$ (quarter), $\hat{2}$ (quarter), $\hat{1}$ (quarter), $\hat{1}$ (quarter), $\hat{2}$ (quarter), $\hat{1}$ (quarter), $\hat{1}$ (quarter), $\hat{2}$ (quarter), $\hat{1}$ (quarter). The accompaniment is in a grand staff (treble and bass clefs) with a key signature of one sharp. The chords are: i (F#), $V\#$ (C#), and i (F#).

Chapter 18 Harmonizing phrases with I and V; Cadences

In this chapter you will:

1. Analyze a phrase of “Au Claire de la Lune”
2. Harmonize a phrase of “The Donkey”
3. Harmonize a phrase of a German lullaby
4. Harmonize a phrase of a Christmas carol
5. Harmonize a phrase of “Yankee Doodle”
6. Harmonize two phrases of “Let my People Go”
7. Harmonize a phrase of a French march

18.1 Analyze a phrase of “Au Claire de la Lune”



The image shows a musical score for the French folk song "Au Claire de la Lune". It consists of a four-measure phrase. The melody is written in the treble clef, and the piano accompaniment is in the bass clef. The key signature has two sharps (F# and C#), and the time signature is common time (C). The melody starts on G4, moves to A4, B4, and then C5, with a final cadence on G4. The piano accompaniment provides harmonic support with chords and moving lines in the inner voices.

In Chapter 18 you will apply what you learned about the fundamental harmonic progression to the harmonization of full phrases of music. You will only use I and V chords. The above harmonization of the French folk song “Au Claire de la Lune” shows that you can use passing tones and neighbor notes to keep the music interesting and to compensate for the lack of variety in chords.

1. How many passing tones occur in the inner voices (the alto and tenor) in the above phrase? _____
2. What note (letter name) is used as a passing tone in the soprano? _____
3. How many upper neighbor notes are in the inner voices of the above phrase? _____
4. How many lower neighbor notes are in the above phrase? _____
5. How many times does the soprano move from $\hat{1}$ to $\hat{2}$ or from $\hat{2}$ to $\hat{1}$? _____
6. In these cases, do the inner voices move by third (disregarding passing tones) in similar motion to the soprano as suggested in the last chapter? _____

18.2 Harmonize a phrase of "The Donkey"

I harmonizes $\hat{1}$ $\hat{3}$ $\hat{5}$ V harmonizes $\hat{5}$ $\hat{7}$ $\hat{2}$	If the soprano moves between these notes... <table style="margin-left: auto; margin-right: auto;"> <tr> <td style="text-align: center;">$\hat{7} \longleftrightarrow \hat{1}$</td> <td style="text-align: center;"><u>...use this voice leading</u></td> </tr> <tr> <td style="text-align: center;">$\hat{1} \longleftrightarrow \hat{2}$</td> <td style="text-align: center;">CTS</td> </tr> <tr> <td style="text-align: center;">$\hat{2} \longleftrightarrow \hat{3}$</td> <td style="text-align: center;">inner voices by third</td> </tr> <tr> <td></td> <td style="text-align: center;">CTS</td> </tr> </table>	$\hat{7} \longleftrightarrow \hat{1}$	<u>...use this voice leading</u>	$\hat{1} \longleftrightarrow \hat{2}$	CTS	$\hat{2} \longleftrightarrow \hat{3}$	inner voices by third		CTS
$\hat{7} \longleftrightarrow \hat{1}$	<u>...use this voice leading</u>								
$\hat{1} \longleftrightarrow \hat{2}$	CTS								
$\hat{2} \longleftrightarrow \hat{3}$	inner voices by third								
	CTS								

A. HARMONIZE A PHRASE WITH I AND V

- To harmonize a phrase, the first step is to determine the key.
- When harmonizing a melody in the soprano, decide on the chord for a certain note by consulting the left side of the box at the top of the page.
- Decide on the voice leading between chords by consulting the right side of the box at the top of the page.

1. WRITE the key below the key signature in the phrase below.
2. WRITE scale degree numbers above each soprano note.
3. WRITE a Roman Numeral for a chord, I or V, under each note below the staffs.
4. HARMONIZE the phrase with root position I and V chords. See the right side of the box above.
5. ADD passing tones and neighbor notes.

$\hat{1}$

B. ANALYZE THE PHRASE AND IDENTIFY ITS CADENCE

- The last two or three chords of a phrase are called a cadence.

1. CIRCLE the three-chord cadence in the above phrase.
2. What kind of active tone is the last soprano note of measure 1? _____
3. Is the harmony on the strong beats of measure 3 tonic or dominant? _____
4. In measure 3, is the overall harmony tonic or dominant? _____

In measure 3, $\hat{2}$ is a member of the overall dominant harmony. In this context it is more stable than $\hat{1}$.

5. The second note of measure 3 ($\hat{1}$) is an active tone. What active tone is it? _____

18.3 Harmonize a phrase of a German lullaby

A. HARMONIZE A PHRASE WITH I AND V

- Recall that figures are numbers below the staff which indicate the intervals of notes above the bass.

1. WRITE the key below the key signature in the phrase below.
2. WRITE scale degrees above each soprano note.
3. HARMONIZE the whole phrase with I and V as on the previous page. For now do not add passing tones or neighbor notes and ignore the figures below the staff.
4. ADD active tones according to the figures below the staff. Use the rhythm below the figures.

8 — 7 — 3 — 4 — 3
3 — 2 — 5 — 6 — 5

8 — 7

B. ANALYZE THE CADENCE

- The cadence at the end of the above phrase is called perfect authentic.

1. It is called perfect because the soprano ends on what scale degree? _____
2. It is called authentic because it ends on what chord? _____

18.4 Harmonize a phrase of a Christmas carol

A. HARMONIZE A PHRASE WITH i AND V#

- Recall from worksheet 18.2 that to harmonize a phrase, the first step is to determine the key.
 - Looking at the key signature is not always enough to determine the key, since the key may be major or it may be minor.
 - Accidentals are a good indication that the phrase might be in minor since two minor scales have accidentals and since, so far, our harmonies in minor have included raised leading tones ($\hat{7}$). In the phrase below, the C#'s suggest the key of D minor rather than F.
 - The first and last notes of a phrase are also good indications of what the key might be. In the phrase below, the first note, D, suggests the key of D minor.
-

1. HARMONIZE the whole phrase.
2. ADD active tones of your own



B. IDENTIFY THE CADENCE

- A cadence which ends on V(#) is called a semicadence.
-

1. A cadence which ends on I and $\hat{1}$ in the soprano is called a(n) _____ cadence.
2. Which kind of cadence is at the end of the above phrase? _____

18.5 Harmonize a phrase of “Yankee Doodle”

<p>Example 1: Avoid this</p>	<p>Example 2: Better</p>
------------------------------	--------------------------

- $\hat{5}$ can be harmonized with either I or V (see the top of worksheet 18.2).
- To decide which chord to use under $\hat{5}$, the following rule often helps:
If the melody permits, change the harmony over the bar line.
- For the same melody in the examples at the top of the page, the chord progression in Example 2 is more satisfying than the one in Example 1. In Example 2 the harmony changes over the bar line.

1. WRITE scale degrees above the notes of “Yankee Doodle” at the bottom of the page.
2. The first note of measure 3 must be harmonized with which chord, I or V? _____
3. To change the harmony over the bar line, the last note of measure 2 ($\hat{5}$) should be harmonized with which chord, I or V? _____
4. HARMONIZE “Yankee Doodle”.

5. Name the cadence at the end of the phrase. _____

18.6 Harmonize two phrases of “Let my People Go”

1. HARMONIZE these two phrases.

The image shows a musical score for two phrases of the hymn "Let my People Go". The score is written on a grand staff with a treble clef on the upper staff and a bass clef on the lower staff. The key signature is B-flat major (two flats). The time signature is common time (C). The first phrase consists of five measures: the first measure has a whole note G2, the second has a quarter note G2, a quarter note A2, and a quarter note B2, the third has a quarter note C3, a quarter note D3, and a quarter note E3, the fourth has a quarter note F3, a quarter note G3, and a quarter note A3, and the fifth has a quarter note B3, a quarter note C4, and a quarter note D4. The second phrase also consists of five measures: the first measure has a whole note G2, the second has a quarter note G2, a quarter note A2, and a quarter note B2, the third has a quarter note C3, a quarter note D3, and a quarter note E3, the fourth has a quarter note F3, a quarter note G3, and a quarter note A3, and the fifth has a quarter note B3, a quarter note C4, and a quarter note D4. The bass staff is empty for both phrases.

2. What kind of cadences are used in these two phrases? _____

18.7 Harmonize a phrase of a French march

A. HARMONIZE THIS PHRASE

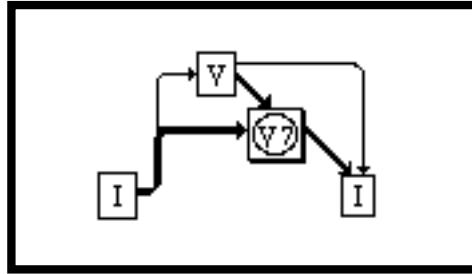


B. REVIEW THE NAMES OF CADENCES

•The above phrase ends on $\hat{5}$ and a tonic chord. It is an example of an imperfect authentic cadence.

-
1. A cadence which ends on I is called _____
 2. A cadence which ends on I and $\hat{1}$ is called _____
 3. A cadence which ends on I and $\hat{5}$ is called _____
 4. A cadence which ends on V is called _____

Chapter 19 The Dominant Seventh Chord, V7



In the above chart, a V7, or dominant seventh chord, expands the chart of the fundamental harmonic progression which appeared on worksheet 17.5. This new chart shows that V7 follows V or I, but does not usually precede V. Highlighted arrows represent the new voice leading for V7.

In this chapter you will:

- | | |
|---|--|
| 1. Analyze a phrase with a dominant seventh chord | 6. Resolve complete V7's to incomplete I's |
| 2. Identify and write dominant seventh chords | 7. Resolve incomplete V7's to complete I's |
| 3. Write dominant seventh chords in a key | 8. Resolve complete V7's to complete I's |
| 4. Write V7 chords in four voices | 9. Review resolving V7 chords |
| 5. Approach V7 by V and mark tendency tones | 10. Approach V7 from I |

19.1 Analyze a phrase with a dominant seventh chord

The Ash Grove English folk song



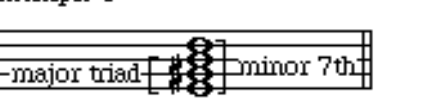
The musical score shows a progression of chords: I, I, V, V7, I. The V7 chord is marked with a 7 and a 5-4 interval. The V7 chord is also marked with a 3 above it. The V7 chord is marked with a 7 and a 5-4 interval.

In the folk song “The Ash Grove,” $\hat{5}$ falls to $\hat{4}$ in eighth notes on the third beat of the first full measure. In the above harmonization, $\hat{4}$ forms the interval of a seventh (plus and octave) with the bass of V. In this example the passing tone $\hat{4}$ expands or elaborates V.

The brief chord which includes $\hat{4}$ on the last half of beat three is called a V7 or dominant seventh chord. See its chord tones at the end of the measure. In this chapter you will learn the voice leading for approaching and leaving this chord, and in the next chapter you will use it in harmonizing whole phrases of music.


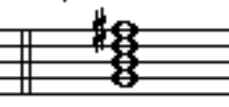

1. A seventh above the dominant is what scale degree? _____
2. The chord tones of V7 chords correspond to which scale degrees? _____

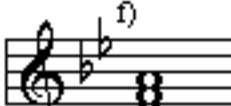

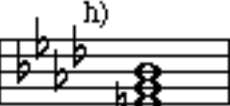


19.2 Identify and write dominant seventh chords

Example 1	Example 2	Example 3		
				
triad	a seventh chord	dominant seventh chord		
type of triad				
	major	minor	diminished	augmented
top 3rd	minor	major	minor	major
bottom 3rd	major	minor	minor	major

- Recall from Chapter 10 that triads are chords with three chord tones separated by thirds. See example 1. Triads are named according to the chart at the bottom of the box above.
- Seventh chords have four, instead of three, chord tones separated by thirds. The name “seventh chord” comes from the interval of a seventh between the root and the top note. See example 2.
- You can distinguish various kinds of seventh chords by identifying the triad on the bottom as major, minor, diminished or augmented, and by identifying seventh interval as major, minor or diminished.
- One way to identify intervals of a seventh is by counting half steps down from the root to the note an octave below the seventh. An octave below a major seventh is one half step down from the root, a minor seventh is two half steps down and a diminished seventh is three half steps down.
- A dominant seventh chord has a major triad and a minor seventh. See Example 3.


1. IDENTIFY the triads and the seventh intervals in these seventh chords:

a) Example	b)	c)	d)	e)
				
Major triad	minor triad	minor triad	major triad	minor triad
Major 7th	minor 7th	minor 7th	minor 7th	minor 7th

f)	g)	h)	i)	j)
				
minor triad	major triad	minor triad	major triad	minor triad
minor 7th	minor 7th	minor 7th	minor 7th	minor 7th

2. Which of the above seventh chords are dominant sevenths? _____

3. WRITE dominant seventh chords above the following roots. Do not use key signatures.



19.3 Write dominant seventh chords in a key

Example 1: G: V7 $\hat{5}$

Example 2: e: V $^7_{3\#}$ $\hat{5}$

- The root of a dominant seventh chord is usually $\hat{5}$, as implied by the word “dominant” in the name.
- If the key is major and the root is $\hat{5}$, no accidentals are needed to write dominant seventh chords. See example 1.
- If the key is minor and the root is $\hat{5}$, the third of dominant seventh chords must be raised a half-step. See example 2. Recall that these workbooks notate raised chord tones in general with small sharp signs, so the general notation for a dominant seventh in minor is V $^7_{3\#}$. However, there are some keys in which notes will be raised by a natural or a double sharp instead of a sharp.
- Raising the third of V7 is the same as raising $\hat{7}$. You have already been doing this with V# chords in minor.

1. WRITE key signatures for these major keys and the V7 chords indicated below the staff.

Ab: V7 B: V7 D: V7 F: V7

2. WRITE key signatures for these minor keys and the V $^7_{3\#}$ chords indicated below the staff.

c: V $^7_{3b}$ b: V $^7_{3\#}$ d: V $^7_{3\#}$ f#: V $^7_{3\#}$

19.4 Write V7 chords in four voices

Example 1	Example 2
<p>G: complete V7 no doublings</p>	<p>Bb: incomplete V7 doubled root, no 5th</p>

To write V7 chords in four voices... EITHER:

- Write a different chord tone for each voice, as in example 1. This is a complete V7. ...OR...
- Double the root and omit the fifth, as in example 2. This is an incomplete V7.

1. WRITE these complete and incomplete V7 chords in four voices.

complete V7	incomplete V7	complete V7	incomplete V7

		Write key signature	Write key signature
complete V7	incomplete V7	↑ D: complete V7	↑ G: incomplete V7

19.5 Approach V7 by V and mark tendency tones

The diagram on the left shows a progression from I to V, then V to V7, and finally V7 to I. Example 1 shows a V chord moving to a V7 complete chord by moving the root down. Example 2 shows a V chord moving to a V7 incomplete chord by moving the 5th up. Tendency tones are marked with arrows: the 7th of V7 (marked with a 4-hat) tends to move down to the 3rd of V (marked with a 3-hat), and the 3rd of V7 (marked with a 7-hat) tends to move up to the 5th of V (marked with a 5-hat).

V7 often follows V as an elaboration or an expansion. See the chart on the left of the box above.

You can approach V7 from V in either of these two ways:

- Move the root of V down a step to a seventh above the bass. See example 1 above and worksheet 19.1. This is by far the more common voice leading and creates a complete V7 chord.
- Move the fifth of V up to the seventh above the bass. See example 2 above. This voice leading creates an incomplete V7 chord.

- Chord tones can be repeated, as in example 1, or sustained, as in example 2 and in worksheet 19.1.

• $\hat{4}$ and $\hat{7}$ are called tendency tones because they tend to move to notes which are a step away: $\hat{4}$ (the seventh of V7) tends to move down to $\hat{3}$, and $\hat{7}$ (the third of V7) tends to move up to $\hat{1}$ (hence $\hat{7}$'s name, "the leading tone"). See the arrows after these notes in the examples at the top of the page.

1. ELABORATE these V chords by following them with V7 chords. FOLLOW directions below the Roman numerals.

2. DRAW arrows from the tendency tones in V7 towards the next likely note.

Four musical examples showing V to V7 transitions:

- Major key, root falls: V (F4, A4, C5) to V7 (F4, A4, C5, E5).
- Major key, root falls: V (B3, D4, F4) to V7 (B3, D4, F4, A4).
- Minor key, root falls: V (Bb3, Db4, Fb4) to V7 (Bb3, Db4, Fb4, Ab4).
- Minor key, 5th rises: V (F#3, A#3, C#4) to V7 (F#3, A#3, C#4, E#4).

19.6 Resolve complete V7's to incomplete I's

The diagram on the left shows a flow from a complete V7 chord to an incomplete I chord. The musical example on the right shows the resolution in C major. The complete V7 chord (F7) has a 7th (Bb) and a 3rd (D). The incomplete I chord (C) has a 3rd (Eb) and a root (C). The 7th of V7 (Bb) falls by step to the 3rd of I (Eb), and the 3rd of V7 (D) rises by half step to the root of I (C). The remaining voice (F) moves by step to the root of I (C).

The chart on the left side of the box above shows that V^7 moves to I. In fact V^7 moves even more strongly to I than does V. The reason for this is that V^7 includes the dissonant intervals of a seventh from the bass and a tritone between the third and seventh of the chord. This harmonic tension is resolved as the tendency tones move to their goals $\hat{3}$ and $\hat{1}$.

- An incomplete I chord is missing a fifth, like an incomplete V^7 . Because of the missing fifth the incomplete I has a three roots and a third. See the second chord in the example on the right side of the box above.

- When moving from a complete V^7 to an incomplete I, the tendency tones move to their goals:

1. The seventh of V^7 ($\hat{4}$) falls by step to the third of I.
2. The third of V^7 ($\hat{7}$) rises by half step to the root of I.

- The remaining voice moves by step to the root of I.

RESOLVE these V7 chords. On this page all V7 chords are complete and all I chords are incomplete.

The exercises are presented in two systems of musical notation. The first system shows resolutions in E major, Bb major, G major, and Eb major. The second system shows resolutions in eb major, d major, e major, and f# major. A key signature change is indicated in the final measure of the second system.

System 1: E: V7 I Bb: V7 I G: V7 I Eb: V7 I

System 2: eb: $V_{3/4}^7$ i d: $V_{3\#}^7$ i e: $V_{3\#}^7$ i f#: $V_{3\#}^7$ i

19.7 Resolve incomplete V7's to complete I's

C: V7 incomplete I complete

- As in the previous page, when moving from an incomplete V7 to a complete I the tendency tones move to their goals. See the example above.
 - The seventh of V⁷ ($\hat{4}$) falls by step to the third of I.
 - The third of V⁷ ($\hat{7}$) rises by half step to the root of I.
- The remaining voice stays the same. It has a common tone.

RESOLVE these V7 chords. On this page all V7 chords are incomplete and all I chords are complete.

d: V_{3#}⁷ i A: V⁷ I f: V_{3b}⁷ i G: V⁷ I

major key V⁷ I minor key V_{3#}⁷ i F: V⁷ I D: V⁷ I

19.8 Resolve V7 to I, both chords complete

Bach, Chorale 179: Wachet auf, ruft uns die Stimme

V7 I

At the end of phrases, cadences are often reinforced by the full sound of complete chords. To write complete chords in a V7 I cadence:

- the 7th of V7 falls by step to the third of I, as usual.
- the 3rd of V7 ($\hat{3}$) falls to the fifth of I. Here the leading tone does not rise to $\hat{1}$.

Do not use this voice leading with the third of V7 ($\hat{3}$) in the soprano. In the top voice, it is particularly unsatisfying to hear that the leading tone does not go to $\hat{1}$, its usual goal.

RESOLVE these V7 chords to I. On this page, both chords are complete. PROVIDE whatever notes are missing.

c: V₃₄⁷ i Bb: V7 I G: V7 I d: $\frac{7}{3\#}$ $\frac{5}{3}$

bb: $\frac{7}{34}$ $\frac{5}{3}$ 7 I V7 I V7 I

19.9 Review resolving V7 chords

•Regardless of whether a chord is incomplete in a V7 I progression, the seventh of V7 always falls by step. Begin writing the I chord with the voice which contained the seventh in the V7 chord.

WRITE these V7 I progressions.

A musical staff with a treble clef and a key signature of one sharp (F#). The staff is divided into three measures by double bar lines. Each measure contains a chord symbol above the staff and a bass line below the staff. The first measure has a V7 chord, the second has an I chord, and the third has a V7 chord. The bass lines are empty, indicating where the student should write the notes.

_____ V7 I V7 I V7 I
 major incomplete complete complete incomplete complete complete
 key

A musical staff with a treble clef and a key signature of one flat (Bb). The staff is divided into three measures by double bar lines. Each measure contains a chord symbol above the staff and a bass line below the staff. The first measure has a V7 chord, the second has an i chord, and the third has a V7 chord. The bass lines are empty, indicating where the student should write the notes.

_____ V_{3#}⁷ i V_{3#}⁷ i V_{3#}⁷ i
 minor incomplete complete complete incomplete complete complete
 key

19.10 Approach V7 from I

The diagram on the left shows a progression from I to V7 to I. An arrow points from I to V, and another from V to V7. A box around V7 indicates it is the target. Arrows also point from V7 to I.

Example 1 shows a progression from I to V7 incomplete. The 5th of I (F) moves to the root of V7 (F). The bass line is I (C-E-G) - V7 incomplete (C-F-A-C).

Example 2 shows a progression from I to V7 complete. All voices move stepwise downward. The bass line is I (C-E-G) - V7 complete (C-F-A-C).

- To approach an incomplete V7 from I, use common tone stepwise (CTS) voice leading. Example 1 shows that the common tone is the fifth of I, and that this note becomes the root of V7.
- To approach a complete V7 from I, use ALL stepwise voice leading. Example 2 shows that in this voice leading the top three voices move downward.

WRITE these progressions. SEE the previous worksheets for moving from V7 to I and from V to V7.

Exercise 1: A sequence of three pairs of staves. Each pair shows a progression from I to V7 to I. The first pair is in G major (I incomplete, V7 incomplete, I complete). The second pair is in D major (I complete, V7 incomplete, I complete). The third pair is in B minor (I incomplete, V7 incomplete, I complete).

Exercise 2: A pair of staves showing a progression from I to V7 complete to I complete. The bass line is I (C-E-G) - V7 complete (C-F-A-C) - I complete (C-E-G).

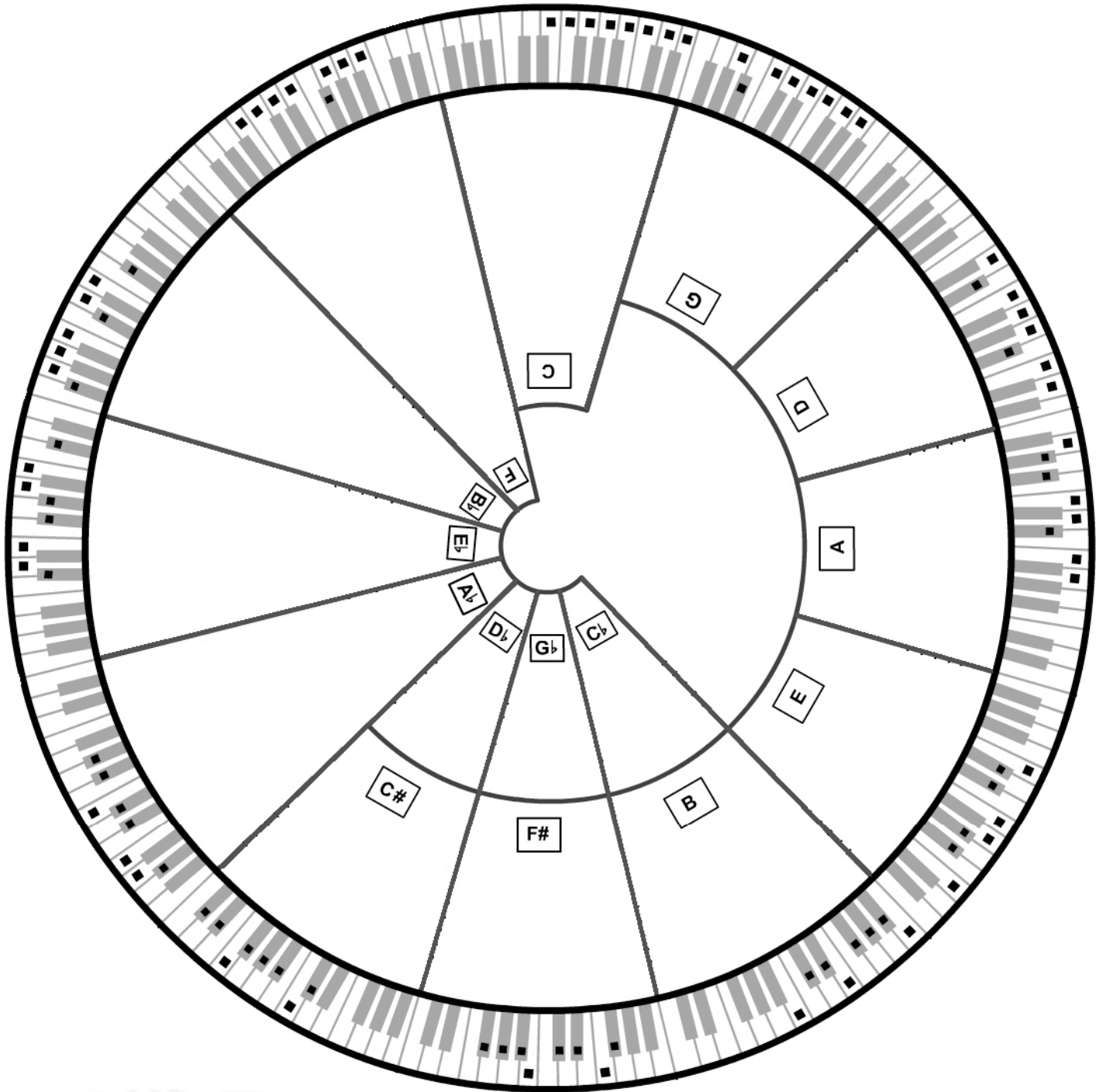
Exercise 3: A pair of staves showing a progression from I to V to V7 complete to I complete. The bass line is I (C-E-G) - V (C-F-A) - V7 complete (C-F-A-C) - I complete (C-E-G). The note C in the V7 complete chord is marked with a downward arrow and the text "the root falls".

Circle 1. Major scales on the keyboard and the order of keys

For use with: www.gmajormusictheory.org/Fundamentals/workbooks.html

Chapter 4, Worksheet 4.5

Purpose: To discover the order of keys by constructing scales with the half- and whole-step pattern, W W H W W W H. The new key is fifth note of previous scale working clockwise.



Graphics by ExpFlash
expflash@hotmail.com

© 2008 by Gilbert DeBenedetti

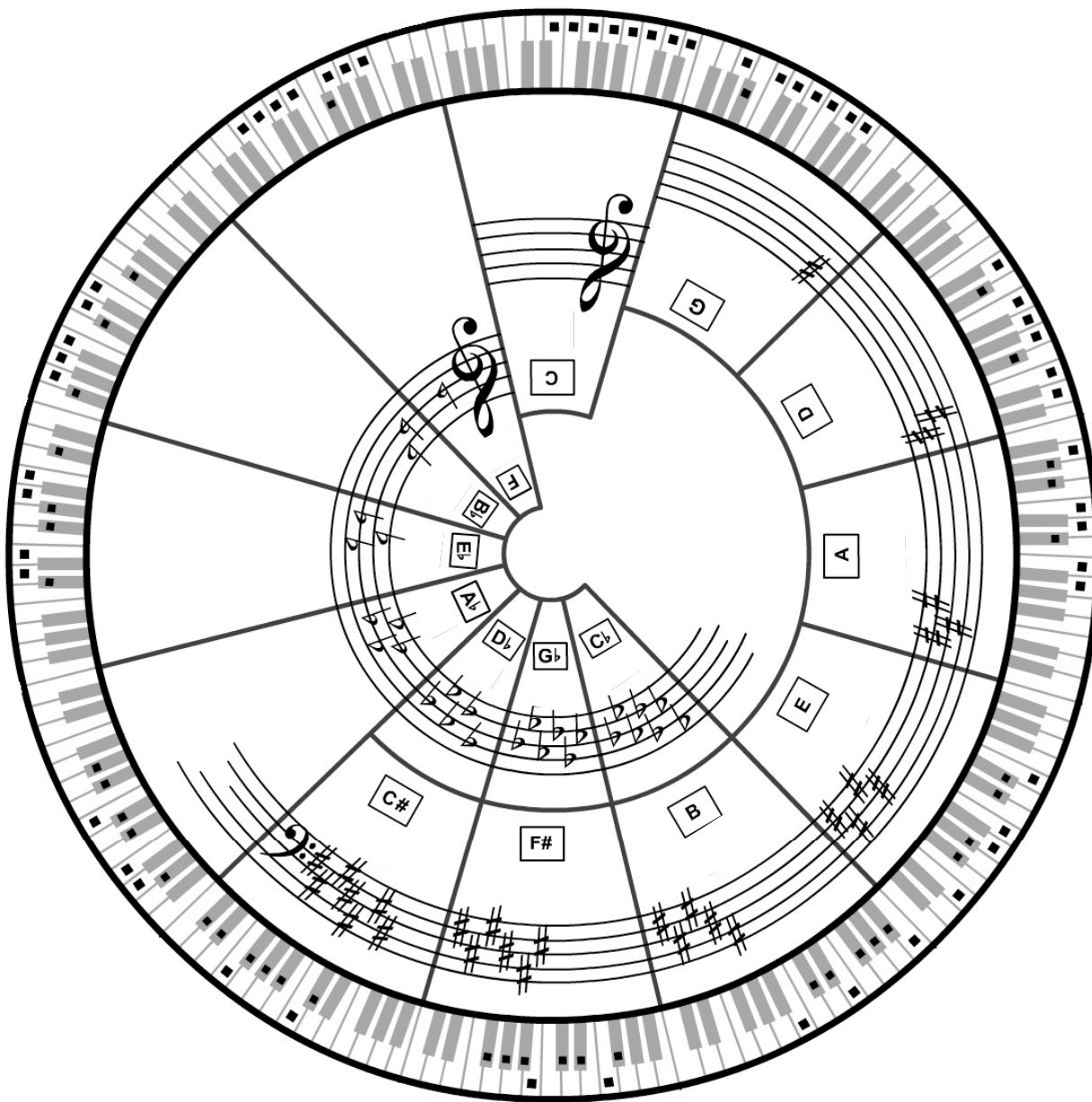

www.gmajormusictheory.org

Circle 2. Key signatures for major keys

For use with: www.gmajormusictheory.org/Fundamentals/workbooks.html

Chapter 5, Worksheet 5.8 and 5.9

Purpose: To write key signatures given major keys.



Graphics by ExpFlash
expflash@hotmail.com

© 2008 by Gilbert DeBenedetti



Circle 3. Major scales on the staff with key signatures

For use with: www.gmajormusictheory.org/Fundamentals/workbooks.html

Chapter 5, Worksheet 5.10

Purpose: To write major scales given key signatures.



Graphics by ExpFlash
expflash@hotmail.com

© 2008 by Gilbert DeBenedetti

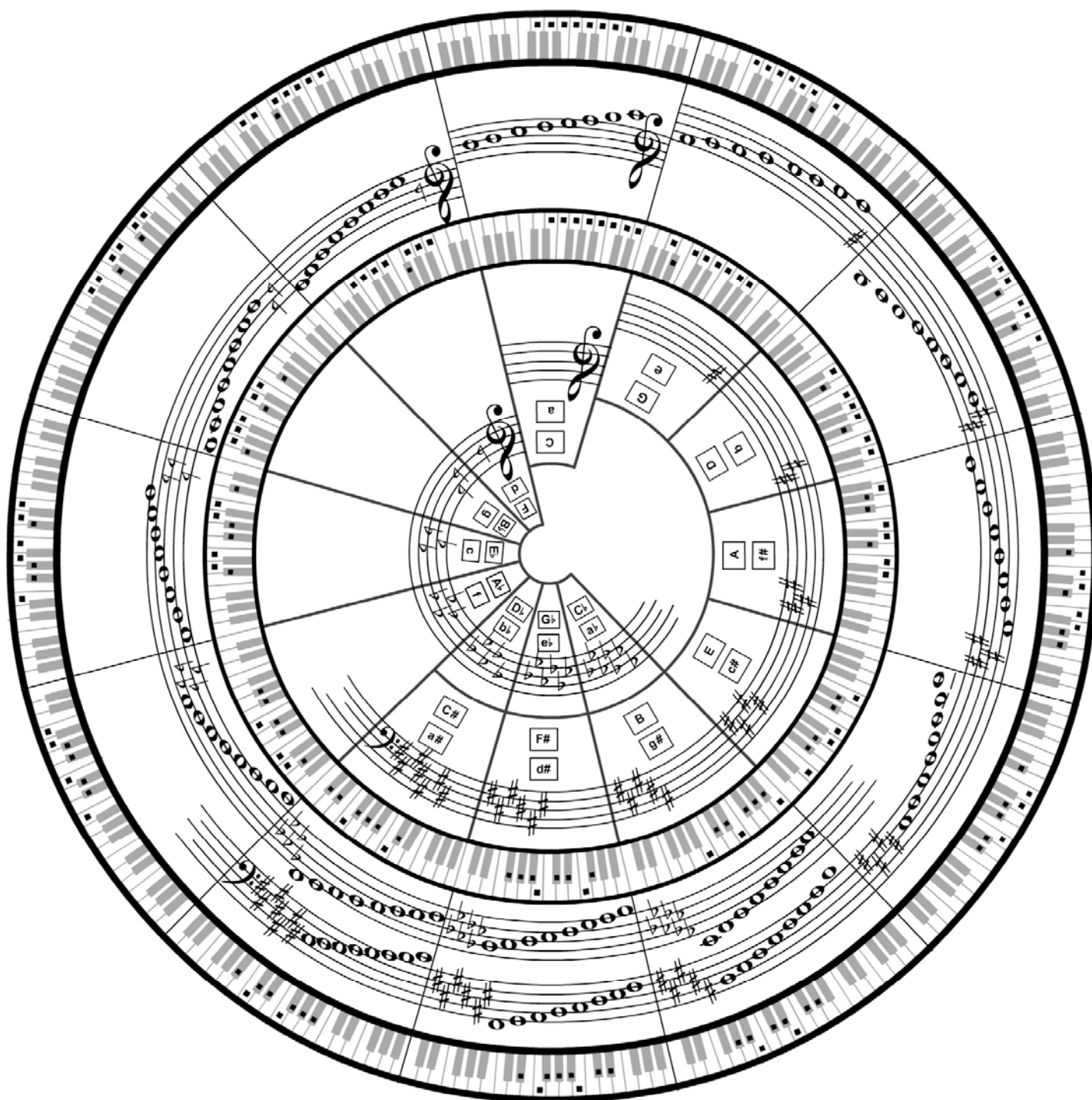
www.gmajormusictheory.org

Circle 4. Natural minor scales on the keyboard

For use with: www.gmajormusictheory.org/Fundamentals/workbooks.html

Chapter 6

Purposes: 1) To put dots on the keyboard according to the natural minor pattern, W H W W H W W.
2) To discover relative major and minor keys.

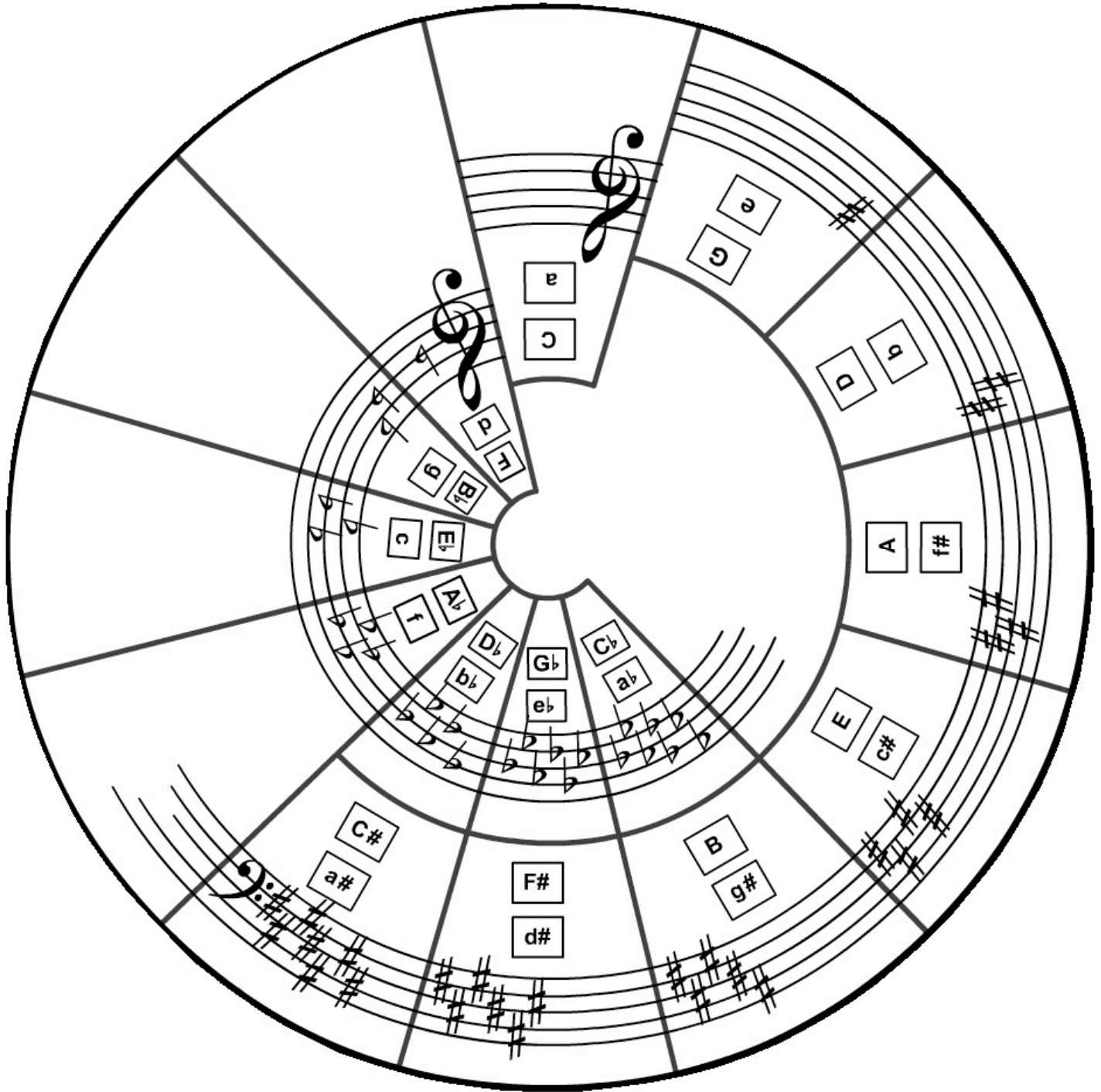



Graphics by ExpFlash
expflash@hotmail.com

© 2008 by Gilbert DeBenedetti


www.gmajormusictheory.org

Circle of Fifths



For instruction about the circle of fifths see:
www.gmajormusictheory.org/Fundamentals/workbooks.html, Chapters 4 to 7.
 Also see the accompanying instructional circles.

Graphics by ExpFlash
 expflash@hotmail.com

© 2008 by Gilbert DeBenedetti


 www.gmajormusictheory.org

Circle 5. Natural minor scales on the staff

For use with: www.gmajormusictheory.org/Fundamentals/workbooks.html

Chapter 7, Worksheet 7.4

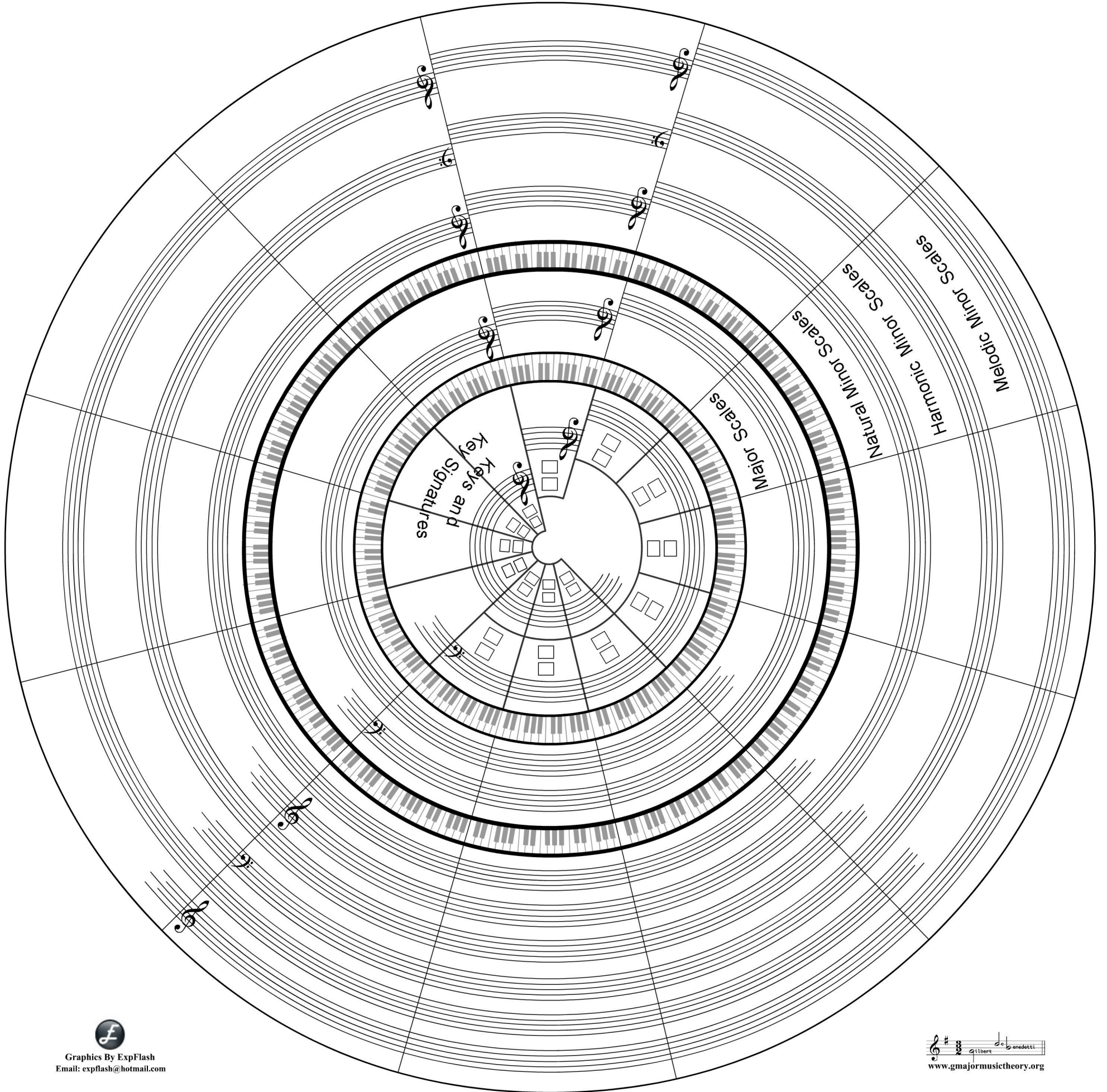
Purposes: 1) To write natural minor scales given the key signature

2) To write key signatures and natural minor scales given the minor key.


Graphics by ExpFlash
expflash@hotmail.com

© 2008 by Gilbert DeBenedetti


www.gmajormusictheory.org




 Graphics By ExpFlash
 Email: expflash@hotmail.com


 www.gmajormusictheory.org

© 2008 by Gilbert DeBenedetti

Keys, Key Signatures and Scales to fill a large circle of fifths

by



Gilbert DeBenedetti
www.gmajormusictheory.org

These pages show the keys, key signatures and scales which belong on a graphic of the circle of fifths. This graphic is available at

<http://www.gmajormusictheory.org/Fundamentals/workbooks.html>

You can print the jpg of the circle of fifths at FedEx Kinko's or anywhere that has an oversized printer.

To help position the information on these pages onto the circle, keep in mind the following:

- The information on these pages begins on the inside of the circle, with the names of keys to be placed in rectangles, and progresses outward to melodic minor scales.
- On staves in the circle, always read left to right (counter-clockwise).
- Indented staves and keyboards on these pages are continuations of staves and keyboards on the circle of fifths.
- Clock times (for example, 12:00) on these pages refer to the position of hours on an analog clock and correspond to positions on the circle of fifths. The short staves for the keys of C and A minor are on top, at 12:00.

Keys, Key Signatures and Scales to fill a large circle of fifths

1. KEYS

In the boxes near the center of the circle:

Inside left pairs of boxes starting at 11:00

Inside boxes: F, B \flat , E \flat , A \flat , D \flat , G \flat , C \flat

Outside boxes: d, g, c, f, b \flat , e \flat , a \flat

the pair of boxes on top, upside down at 12:00

Inside box: C

Outside box: a

pairs of boxes on bottom, starting at 7:00, and going right

Inside boxes: C \sharp , F \sharp , B, E, A, D, G


Outside boxes: a \sharp , d \sharp , g \sharp , c \sharp , f \sharp , b, e

2. KEY SIGNATURES

inside left, beginning at 11:00



inside top, upside down, at 12:00

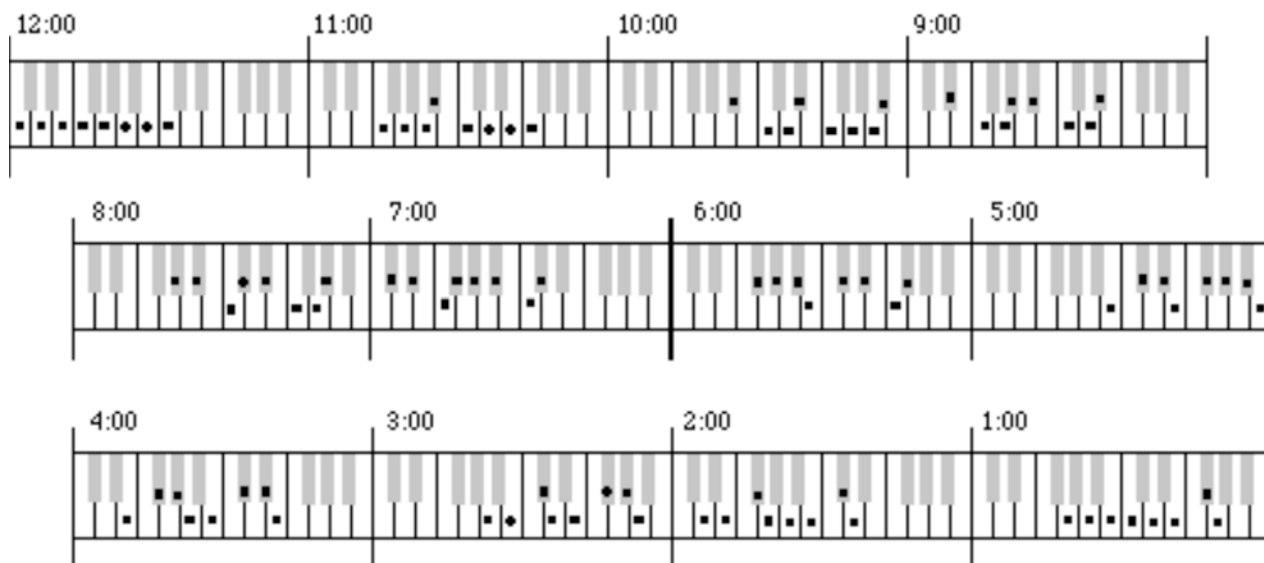


starts at bottom (7:00) and goes right



3. MAJOR SCALES


Inner keyboard



left, beginning at 11:00




left, beginning at 11:00




top, upside down, at 12:00




starts at bottom (7:00) and goes right




left, beginning at 11:00



top, upside down, at 12:00



starts at bottom (7:00) and goes right



THIS PAGE IS FOR THE OUTERMOST STAFFS

left, beginning at 11:00

top, upside down, at 12:00

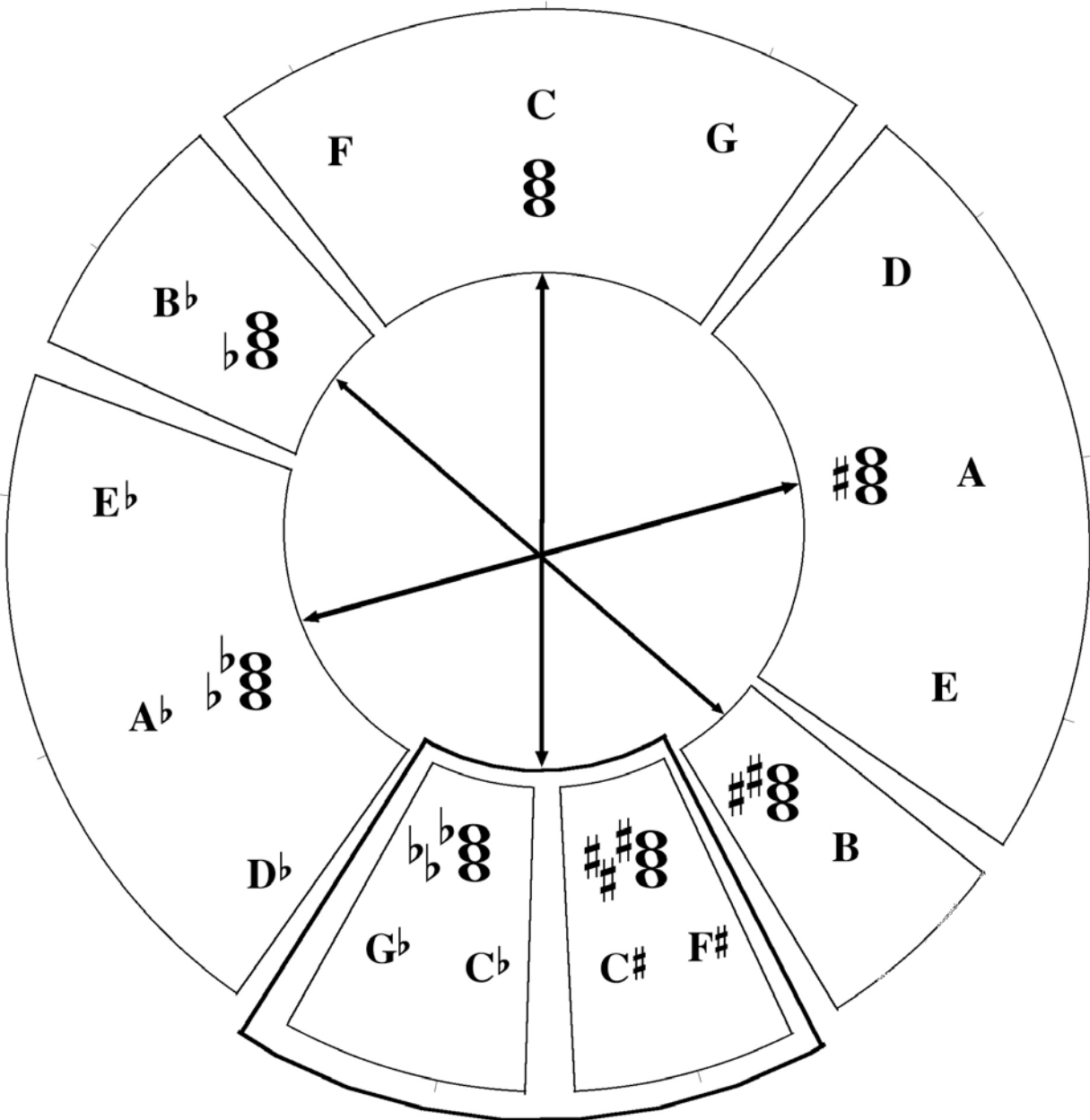
starts at bottom (7:00) and goes right.

Circle 7. Major Triads


For use with: www.gmajormusictheory.org/Fundamentals/workbooks.html

Chapter 10B, Worksheet 10B.4

Purpose: To show relationships among major triads. Arrows relate "opposite" triads in terms of the configuration of sharps and flats. Arrows also show that the triads' roots have the same letters in opposite groups.



Graphics by ExpFlash
expflash@hotmail.com



© 2008 by Gilbert DeBenedetti

**ANSWERS TO CHAPTER ONE,
PATHWAYS TO HARMONY**

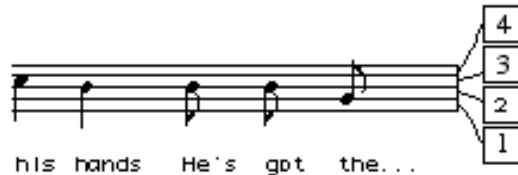

By Gilbert DeBenedetti

www.gmajormusictheory.org

1.2



1.3



1.4

1. A staff is a set of five lines and four spaces.
2. The note letters are A, B, C, D, E, F, G

3. A clef is a symbol which identifies a line and space with a letter.

4. The G or treble clef identifies the second line as the note G above the piano's middle C.

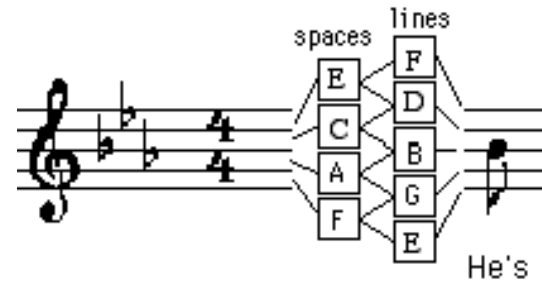
5.



6. higher

7. lower

1.5



1.6

1. D E D C B C D, A B C, B C D
2. G C E D C A A G G C, D E D E D C A
- 3.



1.7

- 1. Quarter
- 2. quarter

- 3. half
- 4. Whole



1.8

1.

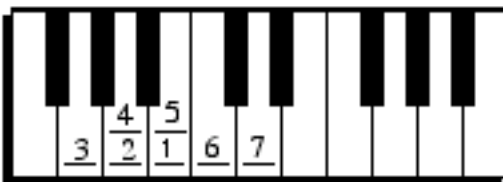


2.



Praise God from Whom all bless-ings flow

3.



1.9

Q Q H Q Q H Q Q Q Q W
B B B B B B B D G A B



Jin-gle bells, Jing-le bells, Jin-gle all the way,

Q Q Q Q Q Q Q Q Q Q Q Q H H
C C C C C B B B B A A B A D




Oh, what fun it is to ride a one horse o-pen sleigh—,

Q Q H Q Q H Q Q Q Q W
B B B B B B B D G A B



Jin-gle bells, Jing-le bells, Jin-gle all the way,

Q Q Q Q Q Q Q Q Q Q Q Q W
C C C C C B B B D D C A G



Oh, what fun it is to ride a one horse o-pen sleigh.

ANSWERS TO CHAPTER TWO PATHWAYS TO HARMONY

by Gilbert DeBenedetti
www.gmajormusictheory.org

2.2

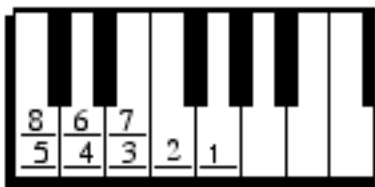
1. GEGIGEGIAGFEIDEF

2.



2.3

A.



B.

1. Good Boys Do Fine Always
2. FACE
3. Every Good Boy Does Fine
4. All Cows Eat Grass

2.4



2.



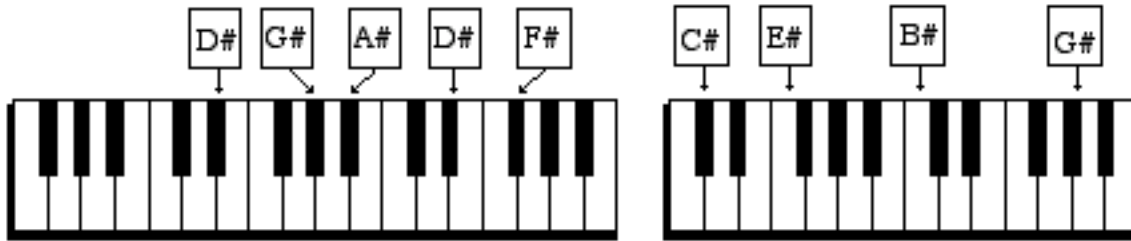
2.5

BBCDDCBAGGABBA A

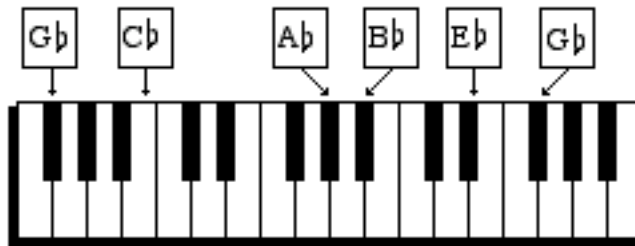
BBCDDCBAGGABAGG

2.6

1.



2.



2.7 A.

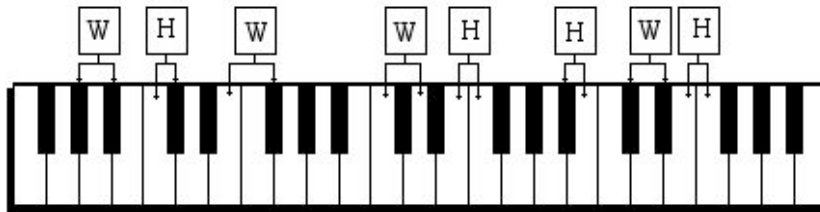
1. higher
2. lower
3. right
4. left
5. right
6. left
7. higher
8. lower

B.



**ANSWERS TO CHAPTER FOUR
PATHWAYS TO HARMONY**
by Gilbert DeBenedetti
www.gmajormusictheory.org

4.1



4.2

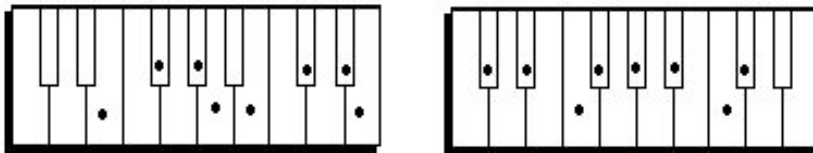
2. W H W E H
- W W H E E

4.3

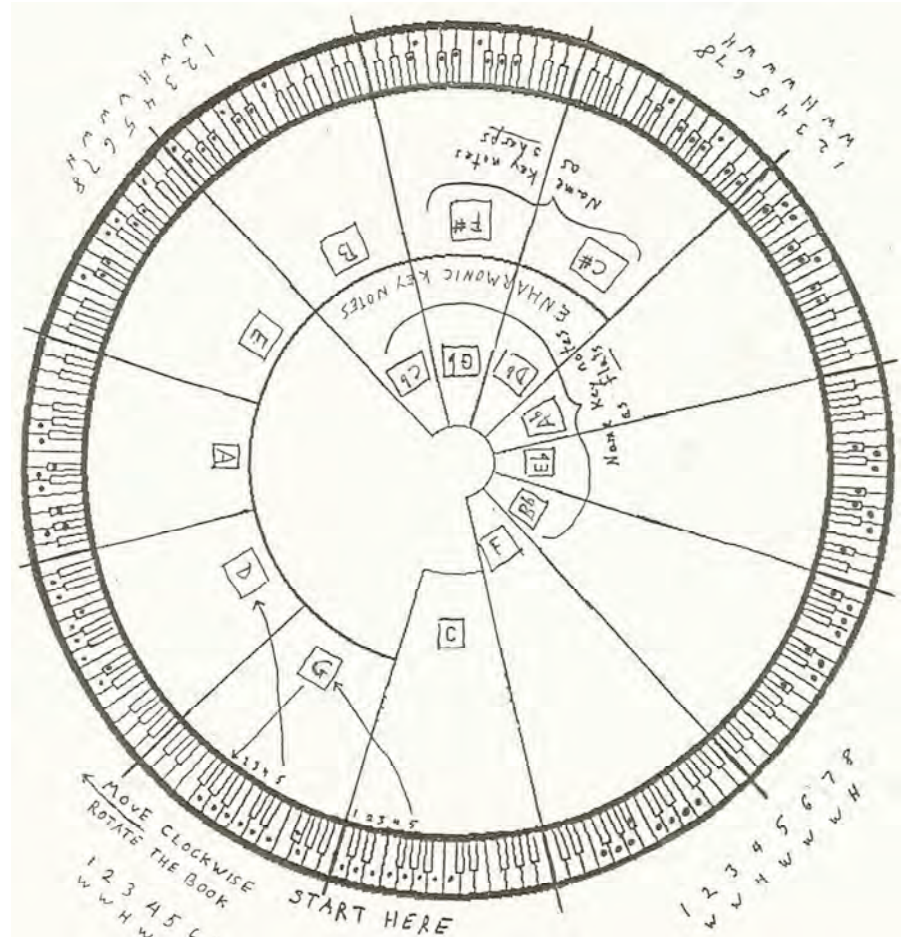
1. H W H W W W H
- 2.

Example

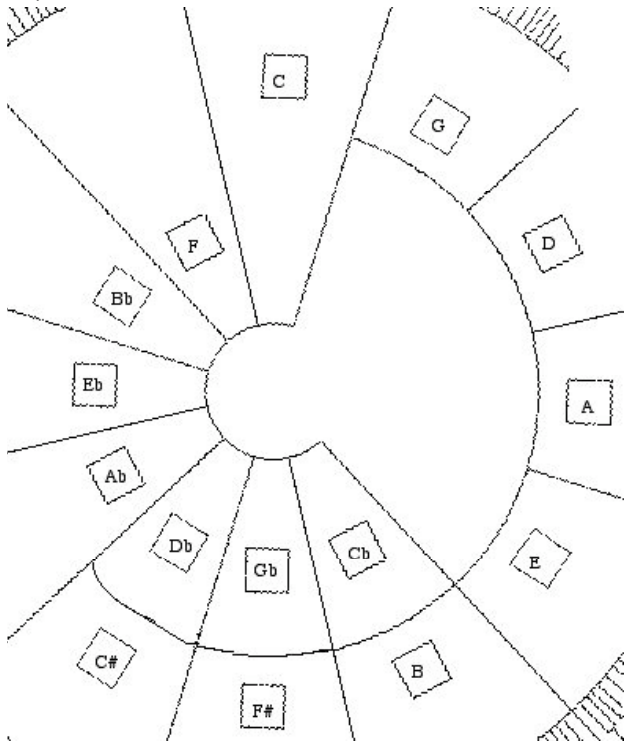
4.4



4.5



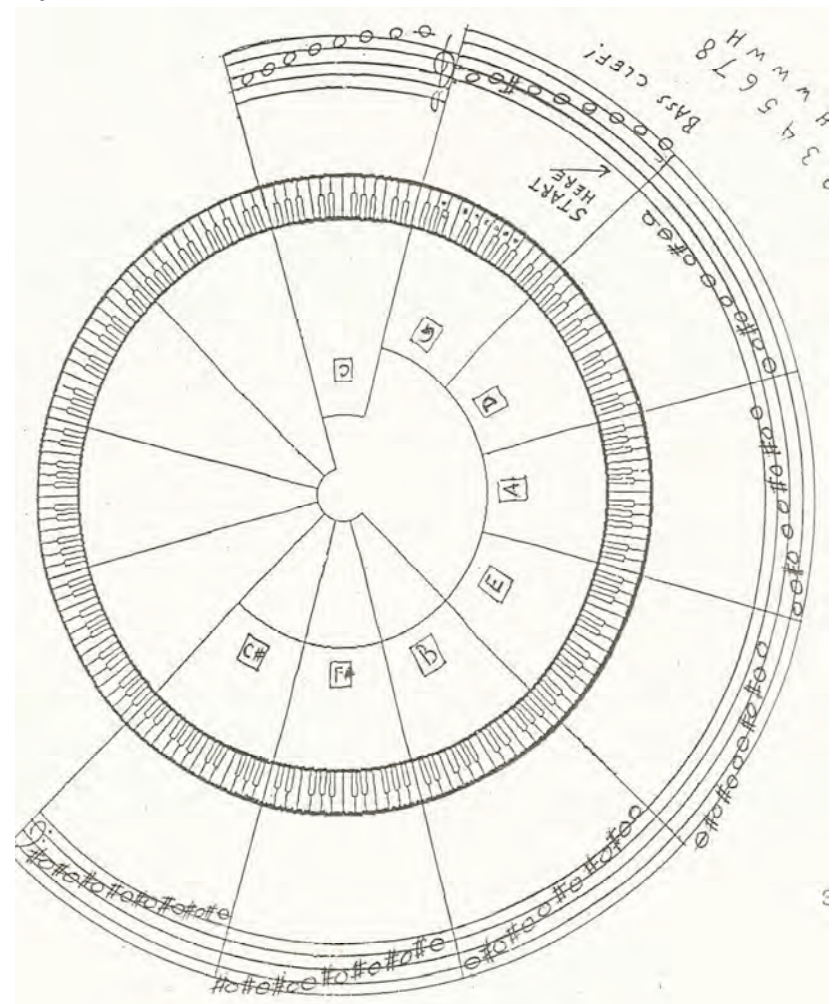
4.7



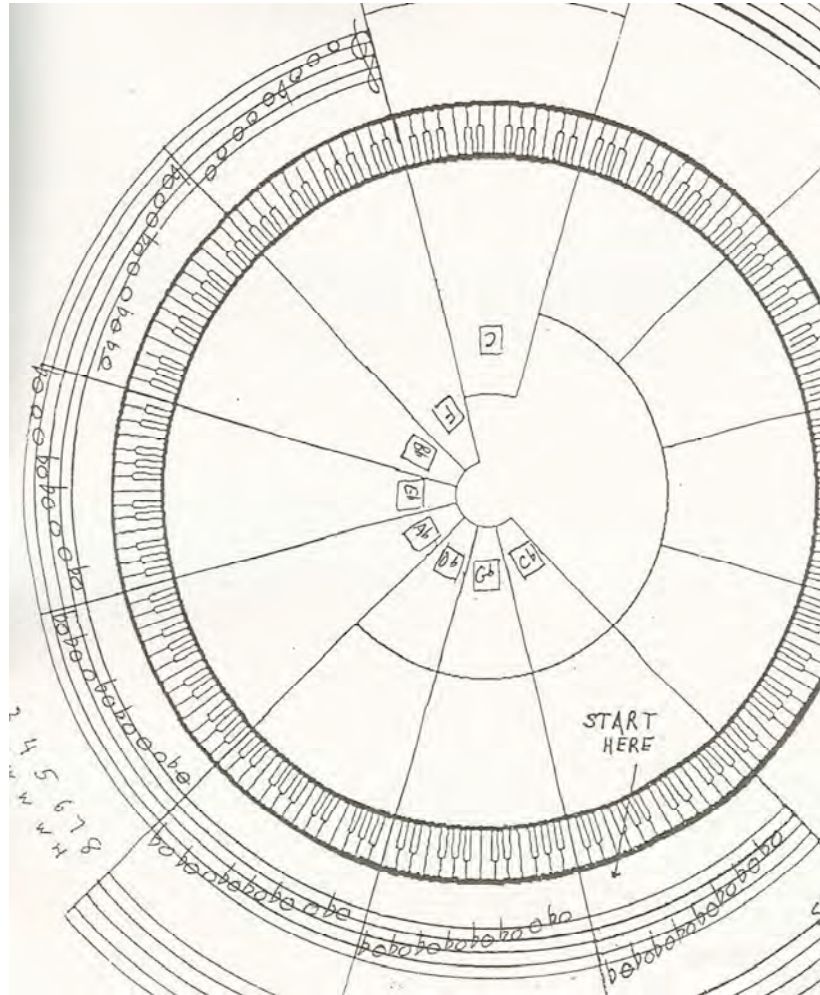
4.8



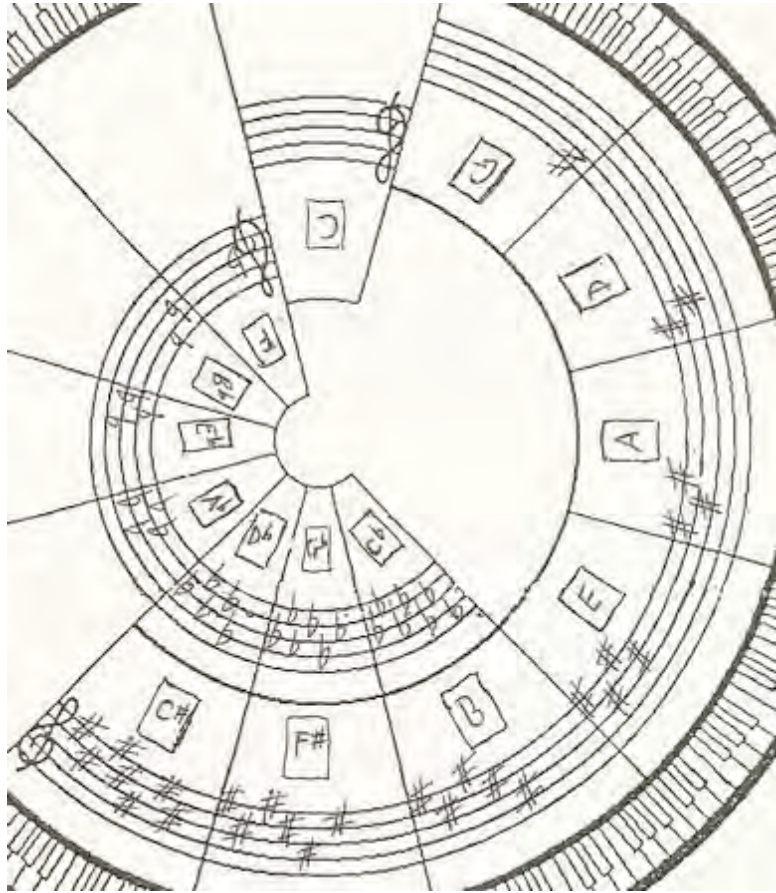
4.9



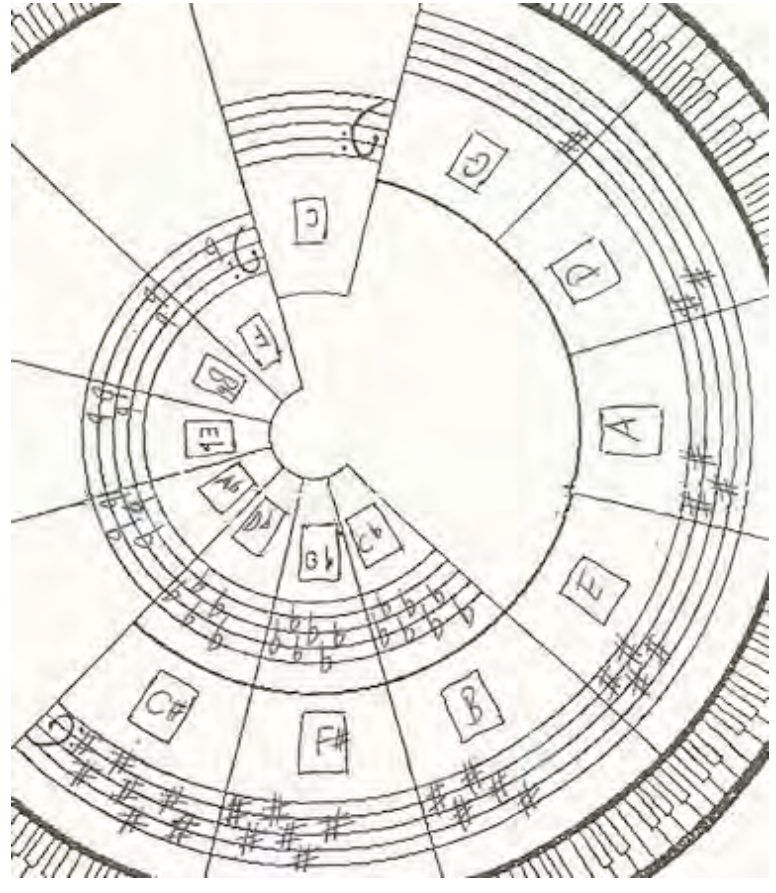
4.10



5.8



5.9



5.10

The image displays a musical exercise consisting of ten staves of music. Each staff begins with a chord label: 1 E, 2 Gb, 3 A, 4 B, 5 Ab, 6 F, 7 D, 8 F#, 9 Db, and 10 Eb. The music is written in a key signature of two sharps (F# and C#) and a 2/4 time signature. The notes are primarily quarter and eighth notes, with some beamed eighth notes. The staves alternate between treble and bass clefs: 1 (treble), 2 (bass), 3 (treble), 4 (bass), 5 (treble), 6 (treble), 7 (bass), 8 (treble), 9 (bass), and 10 (treble). The exercise concludes with a double bar line.

ANSWERS TO CHAPTER SIX
PATHWAYS TO HARMONY
 by Gilbert DeBenedetti
 www.gmajormusictheory.org

6.3

6.1

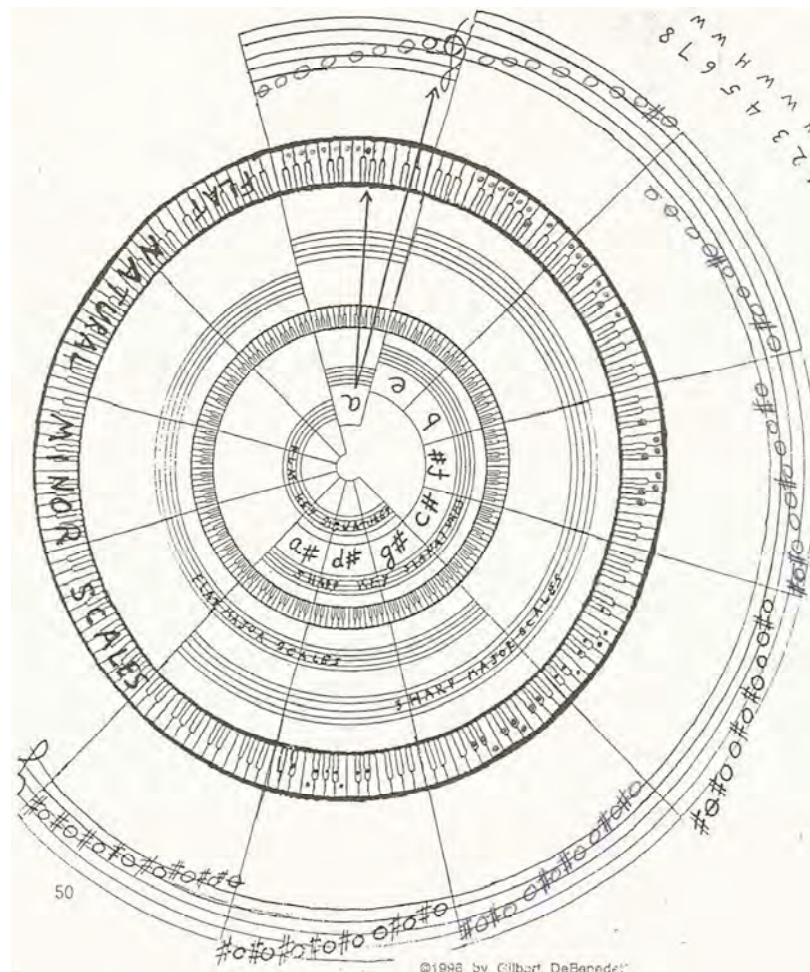
f minor b minor c sharp minor

1 2 3 4 5 1 2 3 4 5 1 2 3 4 5
 W H W W W H W W W H W W

6.2

1.

2.



ANSWERS TO CHAPTER SEVEN
PATHWAYS TO HARMONY
 by Gilbert DeBenedetti
 www.gmajormusictheory.org

7.1

1.



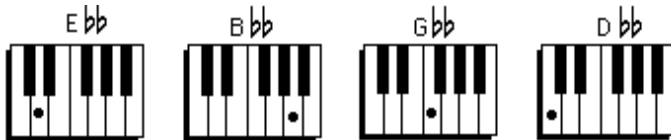
2.



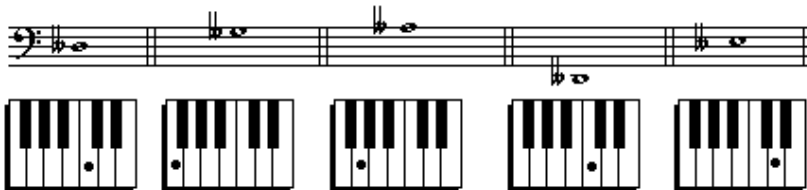
3. Fx Cx Gx Ax Dx

7.2

1.



2.






3. Az Ez Bz Gz Dz

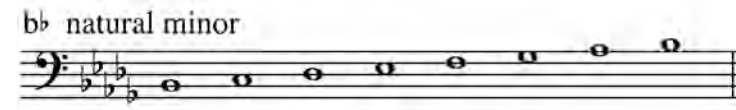
7.3 B D B D C# E C# E C F# C F# B D G D G

7.4

1.



2.



7.5

1.


b harmonic minor




f harmonic minor



e harmonic minor




f# harmonic minor



2.


d harmonic minor



c# harmonic minor



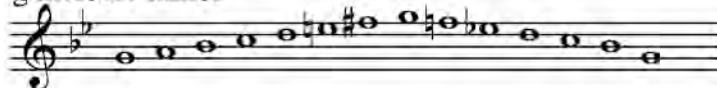
b \flat harmonic minor




7.6

1.

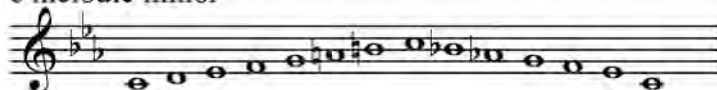
g melodic minor



f# melodic minor




c melodic minor

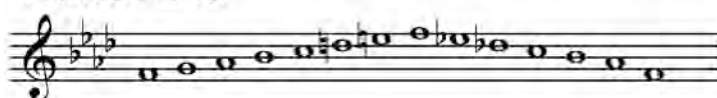


2.

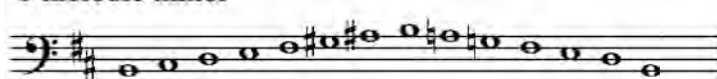
c# melodic minor



f melodic minor



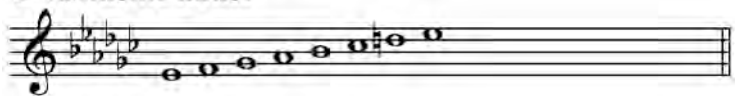
b melodic minor




7.7

1.

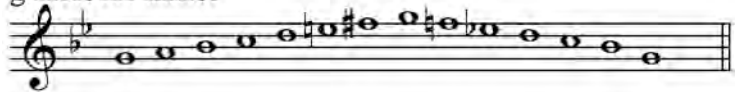
e \flat harmonic minor



e natural minor

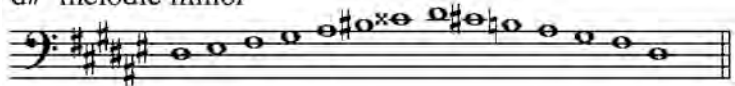


g melodic minor




2.

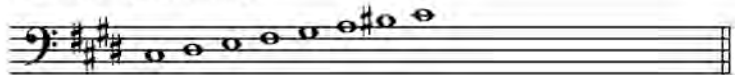
d \sharp melodic minor



f natural minor



c \sharp harmonic minor



ANSWERS TO CHAPTER EIGHT PATHWAYS TO HARMONY

by Gilbert DeBenedetti

www.gmajormusictheory.org

8.1 B G B G G C E E
 F E C B C C D D
 4th 3rd 7th 6th 5th 8ve 9th 2nd

8.2 See answer for 5.9

8.3 See answer for 5.8

8.4

key signature shortened scale

M NM NM M M NM

8.5

1.

NM M M NM NM M
 NM NM M NM NM M

2.

Example

place the note to the right and touching

Maj. 3rd Maj. 3rd Maj. 7th Maj. 6th Maj. 2nd Maj. 6th

Maj. 7th Maj. 6th Maj. 3rd Maj. 7th Maj. 6th Maj. 2nd

8.6

Maj. 6th min. 6th Maj. 3rd dim. 3rd

Maj. 7th Aug. 7th Maj. 2nd Maj. 2nd

Maj. 6th dim. 6th Maj. 3rd Aug. 3rd

8.7

1. min 3rd Maj 3rd Aug 6th Maj 7th min 2nd dim 2nd
Aug 3rd min 3rd dim 6th min 3rd min 3rd dim 3rd

2.

(still bass clef)

min 7th aug 2nd dim 6th aug 7th min 3rd ~~min 6th~~

8.8

1. Perf 5th Aug 4th dim 8ve perf 4th Aug 5th dim 5th
2. Perf 8ve min 7th Maj 3rd dim 6th Perf 5th Maj 2nd
Aug 7th Perf 5th min 3rd dim 3rd Perf 8ve Aug 3rd

8.9

1. See 8.8 of workbook

2.

Example

dim 6th dim 5th aug 3rd dim 3rd aug 4th perf 5th

aug 4th dim 8ve min 3rd dim 7th dim 3rd aug 8ve

8.10

Step 1. Step 2. Step 1. Step 2.

dim 5th compare min 6th compare

Step 3. Step 3.

Step 1. Step 2. Step 1. Step 2.

Maj 6th compare aug 4th compare

Step 3. Step 3.

8.11

1. m3rd M3rd M3rd M6th M3rd m6th m3rd
2. M2nd m3rd P4th P5th m3rd M3rd P5th m6th M6th M6th
3. m3rd M3rd P4th m3rd d5th m6th

**ANSWERS TO CHAPTER NINE
PATHWAYS TO HARMONY**
by Gilbert DeBenedetti
www.gmajormusictheory.org

9.1

1. 3, 5, 4
- 2.



3. maj, min, min, min, maj
min, maj, maj, min, min

9.2

9.3

1. min, min, maj, min, min, maj
- 2.

9.4

1. Ab, B, C, C#, Gb, G, E
f, g#, a, a#, eb, e, c#
- 2.

Example

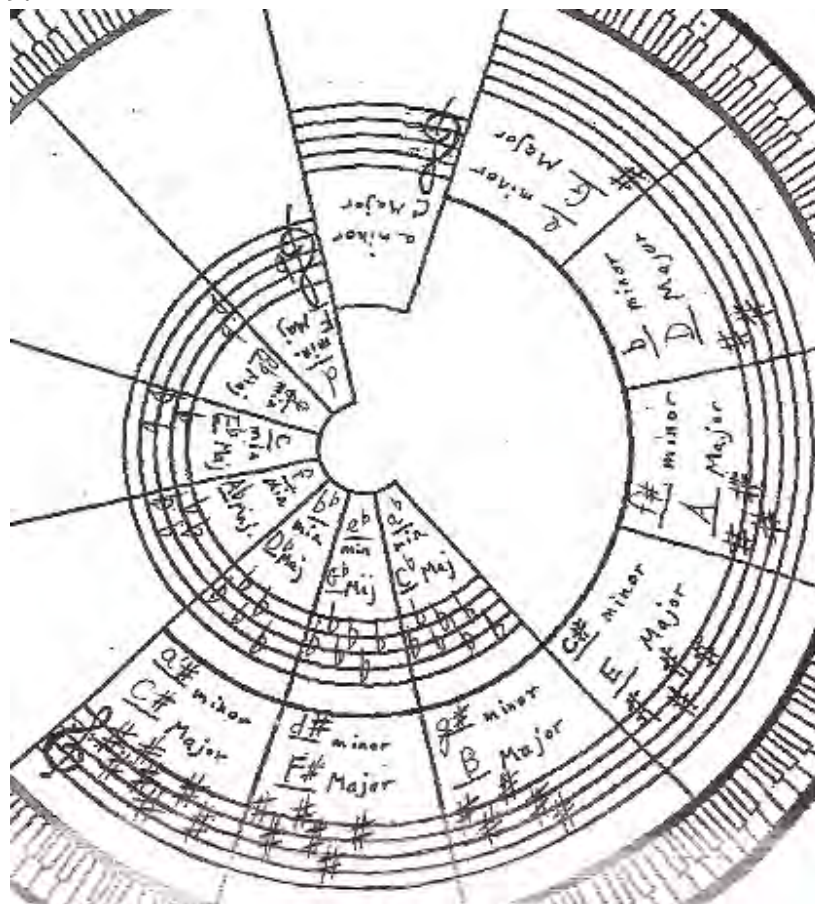
Maj. key	D	Bb	A	Eb	F#	F	Db
min. key	b	g	f#	c	d#	d	bb

9.5

9.6

Handwritten musical score for exercise 9.6, consisting of six staves. The notation includes treble and bass clefs, key signatures (one sharp and one flat), and a sequence of notes across the staves.

9.7



**ANSWERS TO CHAPTERS TEN AND TEN B
PATHWAYS TO HARMONY**

by Gilbert DeBenedetti
www.gmajormusictheory.org

10.1

1. maj maj min min maj min min
2. min min maj min min min min
3. maj min min maj maj min min

10.2

1. Example

2. Example

3.

min mai mai mai min

This phrase can be played as a duet.

10.3

1. Aug dim min Maj Maj Aug
min min Aug dim Maj Min
2. Aug Maj dim min Maj min

10.4

2.

Example

maj maj maj maj maj maj

Example

min min min min min min

Example

dim dim dim dim dim dim

Example

aug aug aug aug aug aug

- 10.5** Maj min Maj Maj dim Maj
Maj dim min min
Aug Maj dim min

10.6

major major major major major

minor minor minor minor minor

diminished diminished diminished diminished diminished

augmented augmented augmented augmented augmented

10.7

1. See 10.3 of workbook
2. dim Aug dim Maj
- 3.

minor augmented diminished augmented

4.

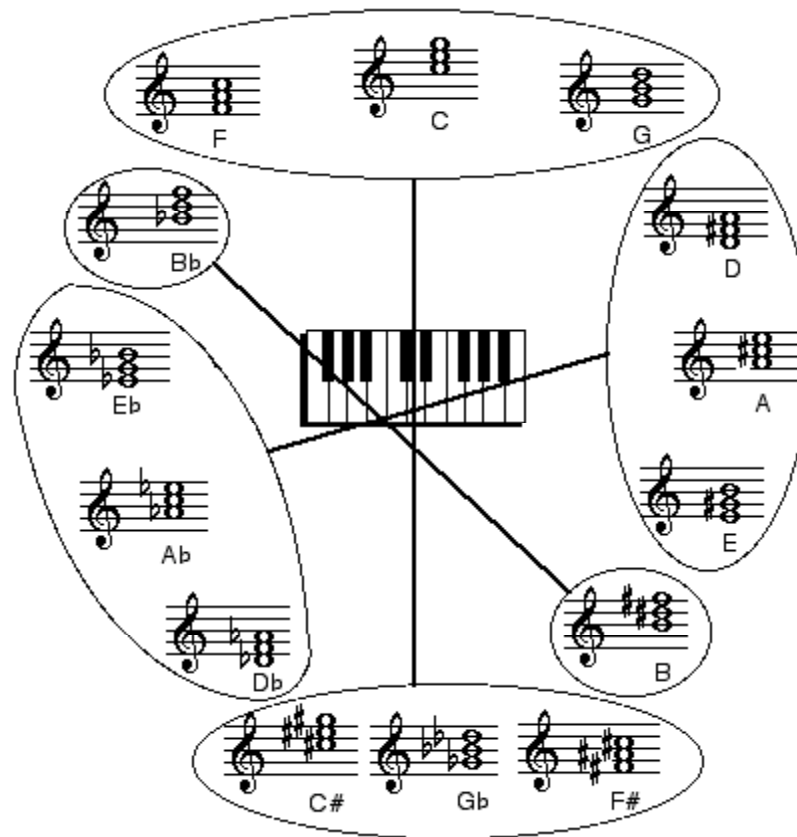
major diminished augmented minor

5. dim Aug dim min

CHAPTER 10B

10B.1

10B.2 and 10B.3



10B.4

Chords for 10B.4:

Treble Clef: D, F, Gb, B, E, Eb, Db, G

Bass Clef: C#, F#, D, Ab, G, Bb, B, Db

Treble Clef: C#, B, C, A, Db, F, F#, E

Bass Clef: A, F#, Bb, G, F, C#, B, C

10B.5

- Aug dim Aug Maj min min Aug min
 Maj dim Aug min maj Aug dim maj
 dim min dim aug Maj Aug Maj dim
-

Chords for 10B.5:

Treble Clef: F# dim, D aug, Bm, Fm, Abm, F#, B dim, A aug

Bass Clef: Bm, C dim, B dim, Bb dim, Cm, C#, A aug, Bb

Treble Clef: Fm, Ab aug, F#, C# aug, G, C dim, F# dim, C# m

10B.6

- See 10B.4 in workbook
- a fifth a half step higher
 - a third and fifth a half step lower
 - a third a half step lower
-

	type of triad			
	major	minor	diminished	augmented
top 3rd	minor	major	minor	major
bottom 3rd	major	minor	minor	major

ANSWERS TO CHAPTER ELEVEN
PATHWAYS TO HARMONY
 by Gilbert DeBenedetti
 www.gmajormusictheory.org

11.1

$\hat{3} \hat{2} \hat{1} \hat{5} \hat{6} \hat{7} \hat{1}$ Bass clef: $\hat{1} \hat{3} \hat{5} \hat{4} \hat{2} \hat{7} \hat{1}$
 $\hat{1} \hat{5} \hat{3} \hat{1} \hat{2} \hat{4} \hat{3} \hat{2} \hat{7} \hat{1}$
 $\hat{1} \hat{3} \hat{2} \hat{4} \hat{5} \hat{5} \hat{1}$

11.2

1.

Example

$D: \hat{3}$ $F: \hat{4}$ $E: \hat{6}$ $db: \hat{1}$ $b: \hat{7}$ $f: \hat{2}$
 minor minor minor

2.

Example

$D: \hat{5}$ $Bb: \hat{2}$ $A: \hat{5}$ $g\#: \hat{4}$ $gm: \hat{1}$ $cm: \hat{3}$

3. $B: \hat{7}$ (ex.), $Eb: \hat{4}$, $D: \hat{7}$, $fm: \hat{5}$, $em: \hat{6}$

11.3

- | | |
|-----------------|------------------|
| 1. tonic | 7. subdominant |
| 2. dominant | 8. mediant |
| 3. submediant | 9. supertonic |
| 4. leading tone | 10. leading tone |
| 5. tonic | 11. tonic |
| 6. dominant | |

11.4

1. tonic, supertonic (ex.), mediant, subdominant, submediant, dominant

2. $Bb: \hat{5}$ maj., $D: \hat{5}$ maj., $B: \hat{7}$ dim.
 $em: \hat{7}$ dim., $cm: \hat{7}$ dim., $c\#: \hat{5}$ maj.

11.5

I ii iii IV V vi vii°

The sequence of chords is the same for ALL major keys.

11.6

i ii° III+ iv V VI vii°

The sequence of chords is the same for all minor keys as well .

11.7

A: vii° (ex.), D: iii, Bb: I, F: vi

G: vii°, B: vii°, Bb: IV, G: IV, Eb: vii°

Minor keys:

bm: V, em: ii°, cm: vii°, gm: VI, f#: III+

dm: iv, fm: i, bm: III+, gm: V, c#: iv

11.8

1.

2.

dm: III+, em: VI, fm: iv, f#: ii°, cm: V(♯), bm: vii°
mediant submediant subdominant supertonic dominant leading tone

3. Heart and Soul!

C: I vi IV V

ANSWERS TO CHAPTER TWELVE PATHWAYS TO HARMONY

by Gilbert DeBenedetti

www.gmajormusictheory.org Click: "Fundamentals"

12.1



12.2

1.

root position	1st inversion	2nd inversion	1 st inversion
$\frac{5}{3}$	$\frac{6}{3}$	$\frac{6}{4}$	$\frac{6}{3}$

2.

Root position	1 st inversion	root position	2 nd inversion
root	third	root	fifth

3.

$\frac{5}{3} \frac{5}{3} | \frac{6}{3} \frac{5}{3} \frac{6}{3} | \frac{6}{4} \frac{5}{3} \frac{6}{3} | \frac{6}{3} \frac{5}{3} \frac{6}{3} \frac{5}{3} \frac{6}{3} | \frac{6}{4} ||$

12.3

E, B, A, G, C
F, C, E, G, D

12.4

See Reference Sheet after 12.2 in Workbook

12.5

1.

1 st Inv	6	1 st Inv	6	2 nd Inv	$\frac{6}{4}$	Root Pos
F	3rd	A	3rd	B	5th	A Root

Root Pos	E	1 st Inv	6	2 nd Inv	$\frac{6}{4}$	1 st Inv	6
	Root	B	3rd	D	5th	A	3rd

2.

$\frac{6}{4} \frac{6}{4} \frac{6}{4} \frac{6}{4} \frac{6}{4}$ [blank] [not a triad] $\frac{6}{4}$

- | | |
|-----------------|----------------|
| 1. mediant | 4. tonic |
| 2. leading tone | 5. mediant |
| 3. tonic | 6. subdominant |

12.6



12.7

1.

2nd inv 5th $\frac{6}{4}$, 1st inv 3rd 6, 2nd inv 5th $\frac{6}{4}$, root root [blank], 1st inv 3rd 6

2.

G: ii, Eb: IV, D: V, F: IV, E: vii^o

gm: vii^o, fm: iv, f#m: i, em: vii^o, dm: III+^{5#}

ANSWERS TO CHAPTER FOURTEEN
PATHWAYS TO HARMONY
 by Gilbert DeBenedetti
 www.gmajormusictheory.org

14.1

14.2

Alto, correct, tenor

14.3

(Ex: third), fifth, root, root, fifth, third
 $\frac{3}{5}$ fifth, $\frac{4}{4}$ root, $\frac{6}{3}$ fifth, $\frac{5}{3}$ third

14.4

14.5

1. (Ex: close), open, close, open, close, close

2. F: I $\frac{5}{3}$, Bb: IV $\frac{6}{3}$, G: vii $^{\circ}$ $\frac{6}{4}$, A: iii $\frac{5}{3}$, Eb: I $\frac{5}{3}$
 fifth third fifth root root

3.

14.6

1.

14.6 (continued)

2.

Musical notation for exercise 14.6 (continued) 2. It consists of two staves (treble and bass clef) with a key signature of one flat (B-flat). The melody in the treble clef consists of six measures: B-flat, A, G, F, E, D. The bass clef accompaniment consists of six measures: B-flat, A, G, F, E, D. A bracket under the last three measures of the bass clef is labeled "other solutions are possible".

14.7

A, F, B, B

D, G, E and G, G and B, G

3.

Musical notation for exercise 14.7 3. It consists of two systems of two staves (treble and bass clef). The first system has a key signature of three sharps (F#, C#, G#). The melody in the treble clef consists of four measures: F#, G#, A, B. The bass clef accompaniment consists of four measures: F#, G#, A, B. The second system has a key signature of one flat (B-flat). The melody in the treble clef consists of four measures: B-flat, A, G, F. The bass clef accompaniment consists of four measures: B-flat, A, G, F. A bracket under the last three measures of the bass clef in the second system is labeled "other solutions are possible".

ANSWERS TO CHAPTER FIFTEEN
PATHWAYS TO HARMONY
 by Gilbert DeBenedetti
 www.gmajormusictheory.org

15.1

c min: i i V i i ii iv V

15.2

G: I IV F: vi iii A: V I Bb: iii vi

15.3

d: V3# i e: i V3# E: ii V D: IV I Bb: iii vi G: ii V E: vi ii Eb: V I f#m: V i

15.4

D: I vi Eb: ii IV f#: iv VI e m: VI i

Many other solutions are possible for the following:

c: i V3# g#m: V3# i d: i V3# d: ii iv d: i III5#

15.5

15.6

contrary, oblique, similar, oblique, parallel (or similar)

15.7

F: iii IV A: I ii Eb: vi V Eb: iii ii
 choose soprano and spacing

F: IV V G: iii ii
 many other solutions are possible

15.8

F: I ii IV V I

ANSWERS TO CHAPTER SIXTEEN
PATHWAYS TO HARMONY
 by Gilbert DeBenedetti
 www.gmajormusictheory.org

16.1

CTS, CTS, CTS, CTS, CMN

16.2

CTS, CMN, CTS, CTS, CMN, CMN

16.3

Ab: I IV V I

Bb: I V I V vi ii V

16.4

d min: i VI iv V I

16.5

Two possible solutions only:

Solution 1

E: I IV ii V I IV V I

16.5

Solution 2

E: I IV ii V I IV V I

16.6

Two solutions are shown for each phrase . Others are possible.

Phrase 1, solution 1

G: I ii V I IV V I

Phrase 1, solution 2

G: I ii V I IV V I

16.6 (continued)

Phrase 2, solution 1

Em: i VI i V# i

Phrase 2, solution 2

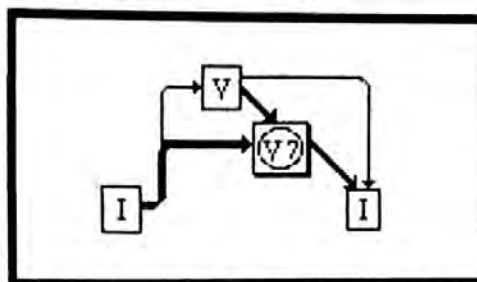
Em: i VI i V# i

16.7

1. two and three
2. tenor and alto
3. one
4. bass and tenor



Chapter 19 The Dominant Seventh Chord, V7



In the above chart, a V7, or dominant seventh chord, expands the chart of the fundamental harmonic progression which appeared on worksheet 17.5. This new chart shows that V7 follows V or I, but does not usually precede V. Highlighted arrows represent the new voice leading for V7.

In this chapter you will:

- | | |
|---|--|
| 1. Analyze a phrase with a dominant seventh chord | 6. Resolve complete V7's to incomplete I's |
| 2. Identify and write dominant seventh chords | 7. Resolve incomplete V7's to complete I's |
| 3. Write dominant seventh chords in a key | 8. Resolve complete V7's to complete I's |
| 4. Write V7 chords in four voices | 9. Review resolving V7 chords |
| 5. Approach V7 by V and mark tendency tones | 10. Approach V7 from I |

19.1 Analyze a phrase with a dominant seventh chord

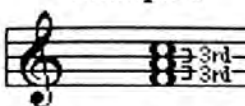
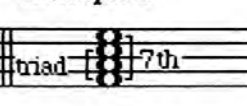

The Ash Grove English folk song

In the folk song "The Ash Grove," $\hat{5}$ falls to $\hat{4}$ in eighth notes on the third beat of the first full measure. In the above harmonization, $\hat{4}$ forms the interval of a seventh (plus and octave) with the bass of V. In this example the passing tone $\hat{4}$ expands or elaborates V.

The brief chord which includes $\hat{4}$ on the last half of beat three is called a V7 or dominant seventh chord. See its chord tones at the end of the measure. In this chapter you will learn the voice leading for approaching and leaving this chord, and in the next chapter you will use it in harmonizing whole phrases of music.

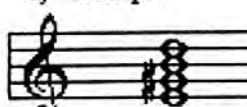

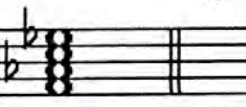


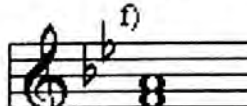




1. A seventh above the dominant is what scale degree? 4
2. The chord tones of V7 chords correspond to which scale degrees? 5 7 2 4

19.2 Identify and write dominant seventh chords

Example 1	Example 2	Example 3		
				
triad	a seventh chord	dominant seventh chord		
type of triad				
	major	minor	diminished	augmented
top 3rd	minor	major	minor	major
bottom 3rd	major	minor	minor	major

- Recall from Chapter 10 that triads are chords with three chord tones separated by thirds. See example 1. Triads are named according to the chart at the bottom of the box above.
- Seventh chords have four, instead of three, chord tones separated by thirds. The name “seventh chord” comes from the interval of a seventh between the root and the top note. See example 2.
- You can distinguish various kinds of seventh chords by identifying the triad on the bottom as major, minor, diminished or augmented, and by identifying seventh interval as major, minor or diminished.
- One way to identify intervals of a seventh is by counting half steps down from the root to the note an octave below the seventh. An octave below a major seventh is one half step down from the root, a minor seventh is two half steps down and a diminished seventh is three half steps down.
- A dominant seventh chord has a major triad and a minor seventh. See Example 3.

1. IDENTIFY the triads and the seventh intervals in these seventh chords:

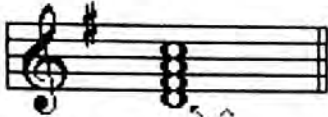
a) Example	b)	c)	d)	e)
				
Major triad minor 7th	Maj triad Maj 7th	min triad min 7th	Maj triad min 7th	dim triad dim 7th
f)	g)	h)	i)	j)
				
Maj triad Maj 7th	min triad min 7th	Maj triad min 7th	Maj triad Maj 7th	Maj triad min 7th

2. Which of the above seventh chords are dominant sevenths? d, h, j
3. WRITE dominant seventh chords above the following roots. Do not use key signatures.




19.3 Write dominant seventh chords in a key

Example 1



G: V7

Example 2



e: V_{3#}⁷

- The root of a dominant seventh chord is usually ♭, as implied by the word “dominant” in the name.
- If the key is major and the root is ♭, no accidentals are needed to write dominant seventh chords. See example 1.
- If the key is minor and the root is ♭, the third of dominant seventh chords must be raised a half-step. See example 2. Recall that these workbooks notate raised chord tones in general with small sharp signs, so the general notation for a dominant seventh in minor is V⁷/_{3#}. However, there are some keys in which notes will be raised by a natural or a double sharp instead of a sharp.
- Raising the third of V7 is the same as raising ♭. You have already been doing this with V# chords in minor.

1. WRITE key signatures for these major keys and the V7 chords indicated below the staff.



Ab: V7 B: V7 D: V7 F: V7

2. WRITE key signatures for these minor keys and the V⁷/_{3#} chords indicated below the staff.



c: V_{3#}⁷ b: V_{3#}⁷ d: V_{3#}⁷ f#: V_{3#}⁷

9.4 Write V7 chords in four voices

<p>Example 1</p>	<p>Example 2</p>
<p>G: complete V7 no doublings</p>	<p>Bb: incomplete V7 doubled root, no 5th</p>

To write V7 chords in four voices... EITHER:

- Write a different chord tone for each voice, as in example 1. This is a complete V7. ...OR...
- Double the root and omit the fifth, as in example 2. This is an incomplete V7.

1. WRITE these complete and incomplete V7 chords in four voices.

many possible answers. Only one is shown.

complete V7	incomplete V7	complete V7	incomplete V7

complete V7	incomplete V7	D: complete V7 ↑ Write key signature	G: incomplete V7 ↑ Write key signature

19.5 Approach V7 by V and mark tendency tones

The diagram on the left shows a flow from Roman numeral I to V, and from V to V7, with arrows indicating the relationship between the chords. The musical examples on the right show two ways to approach V7 from V:

- Example 1:** Shows a V chord (root, 3rd, 5th) moving to a V7 chord (root, 3rd, 5th, 7th). The 7th of V7 is marked as a tendency tone (4̂). Arrows show the root of V moving down to the 7th of V7, and the 5th of V moving up to the 5th of V7.
- Example 2:** Shows a V chord (root, 3rd, 5th) moving to a V7 chord (root, 3rd, 5th, 7th). The 3rd of V7 is marked as a tendency tone (7̂). Arrows show the 5th of V moving up to the 3rd of V7, and the root of V moving down to the 7th of V7.

V7 often follows V as an elaboration or an expansion. See the chart on the left of the box above.

You can approach V7 from V in either of these two ways:

- Move the root of V down a step to a seventh above the bass. See example 1 above and worksheet 19.1. This is by far the more common voice leading and creates a complete V7 chord.
- Move the fifth of V up to the seventh above the bass. See example 2 above. This voice leading creates an incomplete V7 chord.

- Chord tones can be repeated, as in example 1, or sustained, as in example 2 and in worksheet 19.1.

- $\hat{4}$ and $\hat{7}$ are called **tendency tones** because they tend to move to notes which are a step away: $\hat{4}$ (the seventh of V7) tends to move down to $\hat{3}$, and $\hat{7}$ (the third of V7) tends to move up to $\hat{1}$ (hence $\hat{7}$'s name, "the leading tone"). See the arrows after these notes in the examples at the top of the page

1. ELABORATE these V chords by following them with V7 chords. FOLLOW directions below the Roman numerals.

2. DRAW arrows from the tendency tones in V7 towards the next likely note.

The exercise shows four measures of music in different keys, each with a V chord followed by a V7 chord. Handwritten arrows indicate the movement of tendency tones:

- Measure 1:** Eb: V V7. The root falls. Arrows show the 7th of V7 moving down to the 3rd of V7 and the 3rd of V7 moving up to the 1st of V7.
- Measure 2:** F: V V7. The root falls. Arrows show the 7th of V7 moving down to the 3rd of V7 and the 3rd of V7 moving up to the 1st of V7.
- Measure 3:** bb: V V7. The root falls. Arrows show the 7th of V7 moving down to the 3rd of V7 and the 3rd of V7 moving up to the 1st of V7.
- Measure 4:** em: V# V7#. The 5th rises. Arrows show the 7th of V7 moving down to the 3rd of V7 and the 3rd of V7 moving up to the 1st of V7.

19.6 Resolve complete V7's to incomplete I's

The diagram on the left shows a flow from a complete V7 chord to an incomplete I chord. The musical example on the right shows the resolution in C major. The complete V7 chord (F7) has a 7th (Bb) and a 3rd (D). The incomplete I chord (C) has a 3rd (Eb) and a root (C). The resolution is shown as follows:

- 7th of V7 (Bb) falls by step to 3rd of I (Eb).
- 3rd of V7 (D) rises by half step to root of I (C).
- The remaining voice (F) moves by step to the root of I (C).

The chart on the left side of the box above shows that V⁷ moves to I. In fact V⁷ moves even more strongly to I than does V. The reason for this is that V⁷ includes the dissonant intervals of a seventh from the bass and a tritone between the third and seventh of the chord. This harmonic tension is resolved as the tendency tones move to their goals $\hat{3}$ and $\hat{1}$.

- An incomplete I chord is missing a fifth, like an incomplete V⁷. Because of the missing fifth the incomplete I has a three roots and a third. See the second chord in the example on the right side of the box above.

- When moving from a complete V⁷ to an incomplete I, the tendency tones move to their goals:

1. The seventh of V⁷ ($\hat{4}$) falls by step to the third of I.
2. The third of V⁷ ($\hat{7}$) rises by half step to the root of I.

- The remaining voice moves by step to the root of I.

RESOLVE these V7 chords. On this page all V7 chords are complete and all I chords are incomplete.

Two systems of musical exercises showing the resolution of V7 chords to incomplete I chords. The first system is in E major and the second is in Eb major. Handwritten blue arrows indicate the movement of the 7th and 3rd of the V7 chord to the 3rd and root of the I chord, respectively. The remaining voice moves by step to the root of the I chord.

System 1 (E major):

- E: V7 I
- Bb: V7 I
- G: V7 I
- Eb: V7 I

System 2 (Eb major):

- eb: V_{3/4}⁷ i
- d: V_{3#}⁷ i
- e: V_{3#}⁷ i
- f#: V_{3#}⁷ i

A key signature change is indicated in the second system with a box labeled "key signature" and a sharp sign.

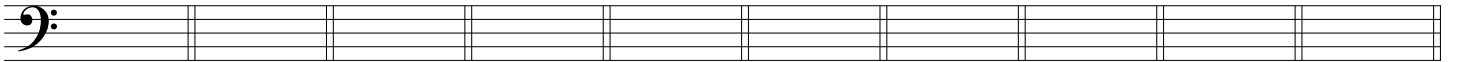
Name: _____

Date: _____

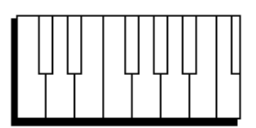
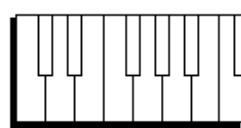
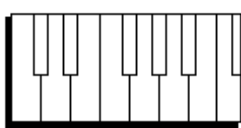
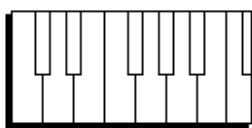
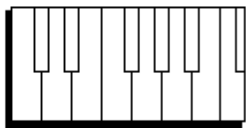

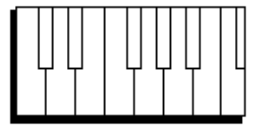
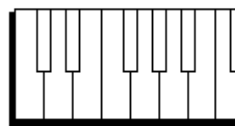
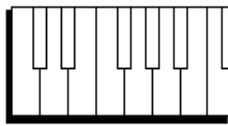
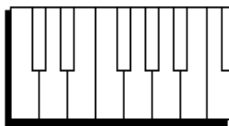
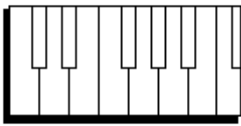

Test on Chapters 1 and 2

1. Write the letter names for these notes.





2. Draw dots on the keyboard for the notes on the staff.



3. Write enharmonic equivalents for these notes. (instructor writes letter names in boxes)

_____ _____ _____ _____ _____

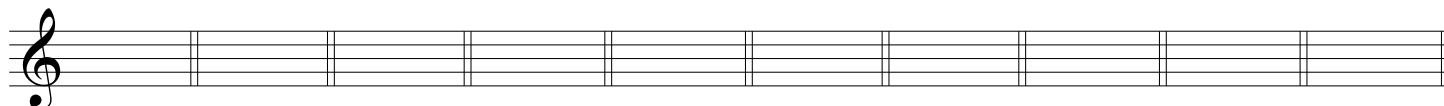
Name: _____


Date: _____

Test on Chapters 1, 2 and 3

<http://www.gmajormusictheory.org/Fundamentals/workbooks.html>

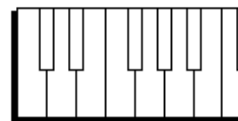
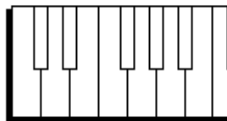
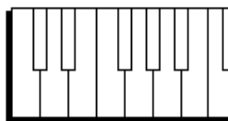
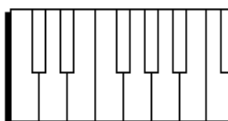
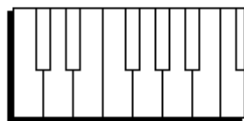

1. Write the letter names for the notes shown on the staves.





2. Draw dots on the keyboards for the notes on the staff.*

*Instructor writes notes on staff with sharps and flats.



3. For the notes in the boxes, write their names and answer the questions about their durations

- | | | | |
|--------------------------|-------|-------------------------------------|-------|
| <input type="checkbox"/> | _____ | How <u>many</u> in a quarter note? | _____ |
| <input type="checkbox"/> | _____ | How <u>long</u> (in quarter notes?) | _____ |
| <input type="checkbox"/> | _____ | How <u>long</u> (in quarter notes?) | _____ |
| <input type="checkbox"/> | _____ | How <u>many</u> in a quarter note? | _____ |
| <input type="checkbox"/> | _____ | How <u>long</u> (in quarter notes?) | _____ |

4. Write the time signature in the box for the rhythm shown on the single-line staff.*

a. _____

b. _____

c. _____

d. _____

e. _____

* Instructor writes 2 measure rhythm

5. Name the rests which have been drawn in the boxes.

a. _____

b. _____

c. _____

d. _____

e. _____

6. In the box provided by the instructor, fill in the note--one note only--to complete the measure.**

a. $\frac{3}{4}$ _____

b. $\frac{4}{4}$ _____

c. $\frac{2}{4}$ _____

d. $\frac{3}{4}$ _____

e. $\frac{6}{4}$ _____

** Instructor writes 2 measure rhythm with a box in the place of a note. Student writes missing note in box.

Test on Chapter 1

Name: _____

Date: _____

<http://www.gmajormusictheory.org/Fundamentals/workbooks.html>

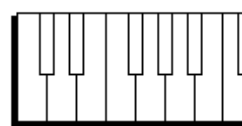
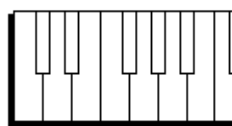
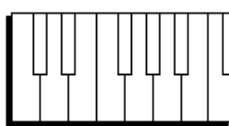
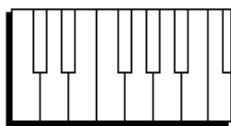
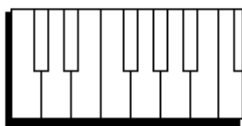

1. Write letter names on each white key on this keyboard.




2. Write the letter names for these notes.



3. Draw dots on the keyboards for the notes on the staff.



4. Write whole notes for the letter names given below the staff.




5. Identify the time value names for the notes in the boxes, and write the usual number of beats for each one.

a. _____
(name) (beats)

b. _____

c. _____

6. Write stems on these noteheads.



7. Write the notes for this phrase.

The top series of letters represents quarter notes (Q), half notes (H) and whole notes (W).
The bottom series of letters represents the pitches for the notes.

rhythmic value:

pitch letter:



Name _____

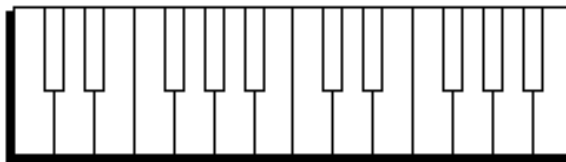
Date: _____

Test on Chapters 4 and 5 Scales and Key Signatures

<http://www.gmajormusictheory.org/Fundamentals/workbooks.html>

Instructor fills in information on the red lines

1. Write dots on the keyboard for the notes of a(n) _____ scale.



7 points

2. Fill in the blanks:

a. There are _____ (how many?) _____ (sharps or flats?) in the key of _____.

b. There are _____ in the key of _____.

c. There are _____ in the key of _____.

d. There are _____ in the key of _____.

8 points


3. Give the key for the key signatures written by the instructor:



2 pts. each x 4 = 8 points

4. Write the key signatures for the keys given by the instructor.

-----all bass clef!-----



a. _____

b. _____

c. _____

d. _____

e. _____

2 pts. each x 5 = 10 points

--next page →

5. Write these scales with their correct key signatures.

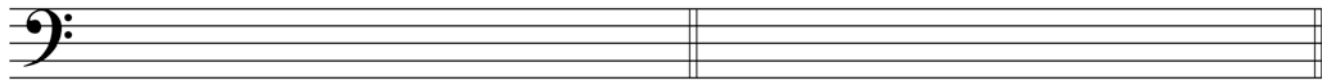
a. _____

b. _____



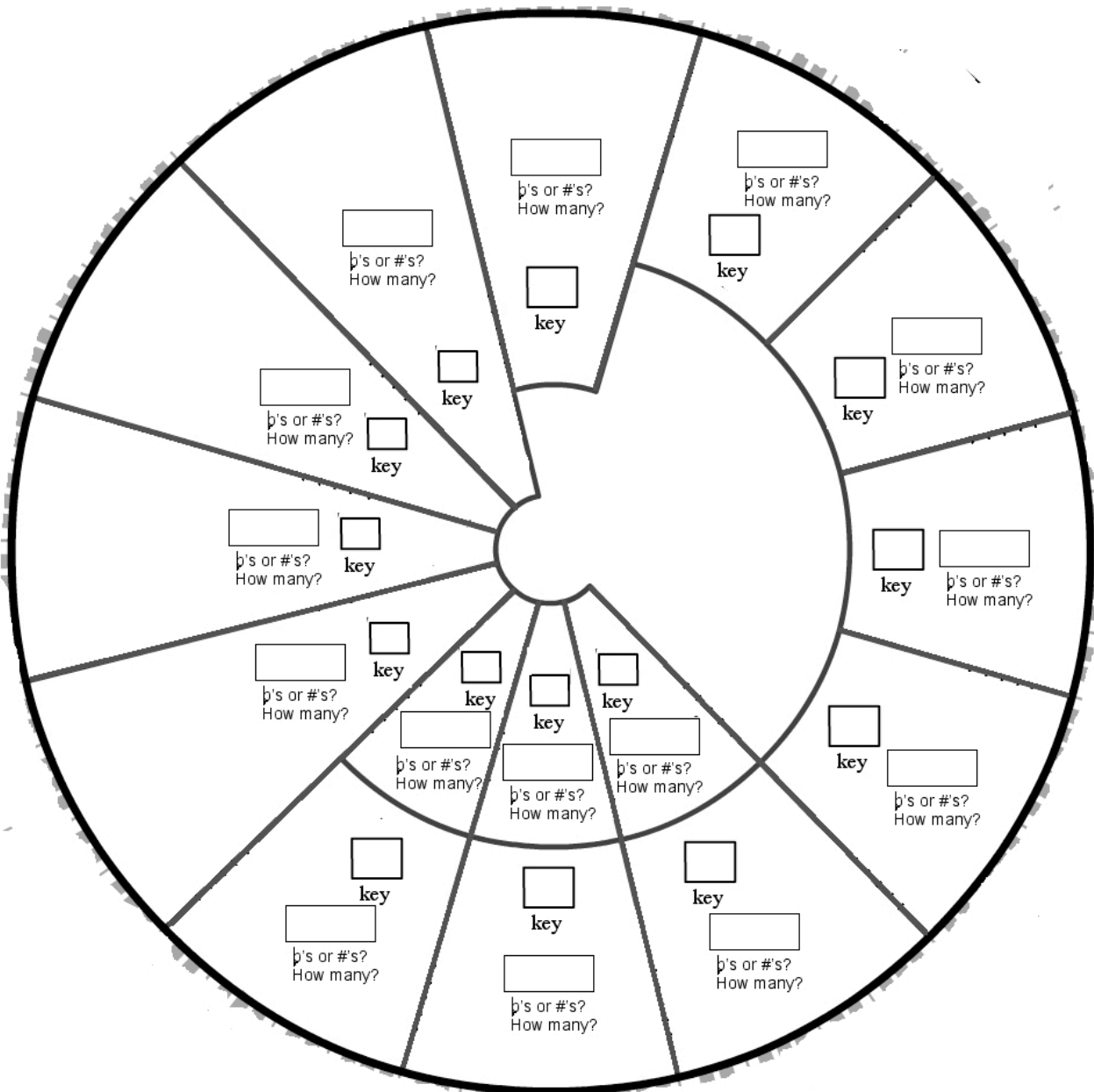
c. _____

d. _____



8 pts. per scale = 36 points

6. Fill in the keys. Also fill in the number of sharps or flats, and specify which they are: sharps or flats.



1 per box = 31 points




Name: _____

Date: _____

Test on Chapters 5, 6 and 7


<http://www.gmajormusictheory.org/Fundamentals/workbooks.html>

1. Write the *major* key for the following key signatures.




instructor writes
key signatures

2. Write key signatures for the *major* keys below the staff.




instructor
writes keys

3. Write the *minor* key for the following key signatures.



instructor writes
key signatures

4. Write signatures for the minor keys below the staff.



___ minor


___ minor

___ minor


instructor
writes keys

5. Write the minor scale given the key signature. instructor writes key signatures


melodic minor



natural minor




harmonic minor




6. Write the key signature and minor scale given the minor key. instructor writes key


___ harmonic minor



___ melodic minor



___ natural minor



Probs 1 - 4: each key or
key signature = 3 pts = 36 pts total
Probs 5 - 6:
4 scales = 9 pts each = 36 pts total
2 scales = 14 pts each = 28 pts total
Test = 100 pts



Name _____


Date _____

Test on Chapters 8 and 10

<http://www.gmajormusictheory.org/Fundamentals/workbooks.html>

1. Write the key signatures for these major keys.

instructor writes keys



2. Write the full name for these intervals. You may abbreviate the specific name.

instructor writes intervals




3. Write the top note of the given intervals.

instructor writes bottom note and interval name




4. Identify these triads as major, minor, diminished or augmented.

instructor writes triads




5. Construct triads above these notes.

instructor writes roots and triad types




6. Construct triads given the third or fifth.

instructor writes and labels 3rd or 5th; writes triad type



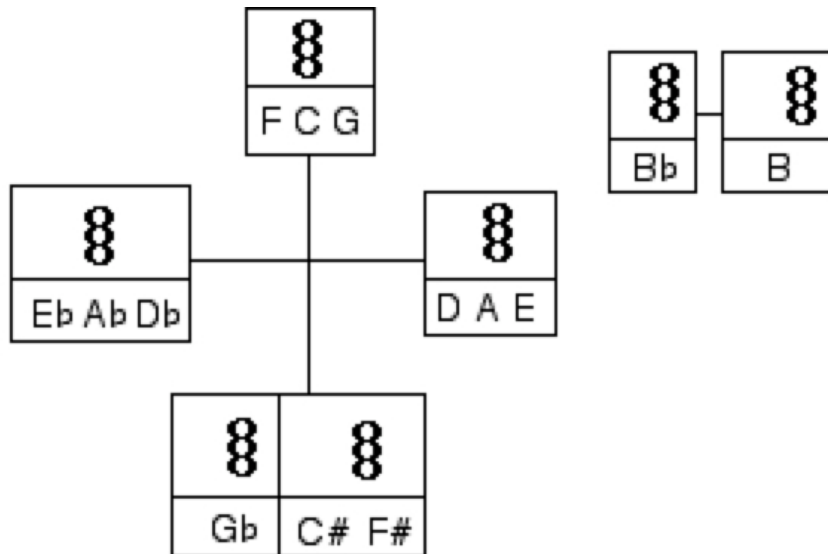
7. Identify the triads as major, minor, diminished or augmented.

instructor writes *key signature* and triad



8. Write sharps and flats next to the appropriate notes in this chart to make all the triads major.

Circle the triads that need no alterations.



In 1 - 4 each problem = 3
 In 5 - 7 each problem = 4
 In 8 each triad = 2 (14 total)
 Test = 45 + 36 + 14 = 95

Name _____

Date _____

Test on Chapters 11 and 12

(Instructor writes information in parentheses and underlined in red.)

1. Write the key signature and the note. (Instructor writes key and scale degree.)

A musical staff consisting of five lines. It begins with a treble clef on the left. The staff is divided into four measures by vertical bar lines. The first measure contains a treble clef, and the last measure contains a bass clef. The remaining two measures are empty.

_____ 10 pts

2. Write the key and the scale degree of the note. (Instructor writes key sig. and note.)

A musical staff consisting of five lines. It begins with a treble clef on the left. The staff is divided into four measures by vertical bar lines. The first measure contains a treble clef, and the last measure contains a bass clef. The remaining two measures are empty.

_____ 10 pts

3. Write the *major* keys and Roman numerals. Roman numerals should reflect the type of triad. (Instructor writes key sig. and triad.)

A musical staff consisting of five lines. It begins with a treble clef on the left. The staff is divided into four measures by vertical bar lines. The first measure contains a treble clef, and the last measure contains a bass clef. The remaining two measures are empty.

_____ 10 pts

4. Write the *minor* keys and Roman numeral. Roman numerals should reflect the type of triad. (Instructor writes key sig. and triad.)

A musical staff consisting of five lines. It begins with a treble clef on the left. The staff is divided into four measures by vertical bar lines. The first measure contains a treble clef, and the last measure contains a bass clef. The remaining two measures are empty.

minor _____ minor _____ minor _____ minor _____ minor _____ 10 pts

next page
→

5. For each triad:

- a) Identify the triad as root position (R), first inversion (1st), or second inversion (2nd)
- b) Give appropriate figures ($\frac{5}{3}$, $\frac{6}{3}$ or $\frac{6}{4}$)
- c) Identify the letter of the root
- d) Identify the bottom note as the root (R), third (3rd) or fifth (5th)

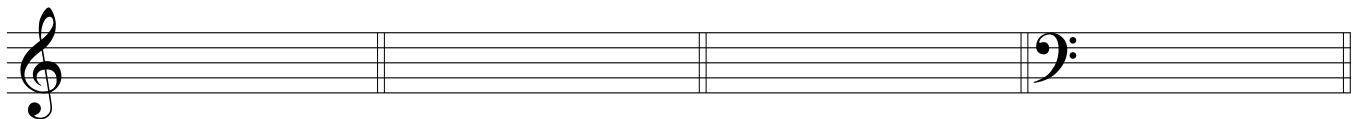
(Instructor writes triads in root pos. or inverted.)



- a) _____ b) _____ a) _____ b) _____ a) _____ b) _____
 c) _____ d) _____ c) _____ d) _____ c) _____ d) _____

16 pts

6. Write these triads. (Instructor writes triads' letter names, qualities and inversion figures.)



12 pts

test = 68 pts

Name _____

Date _____


Test on Chapters 13 and 14

<http://www.gmajormusictheory.org/Fundamentals/workbooks.html>

(Instructor writes information in parentheses and underlined in red.)

1. Write the key, Roman numeral and abbreviated inversion figures (when needed) for each triad.


bass clef! *bass clef!*



key *R.N. & figs.* *minor* *minor*
both! *key* *key*

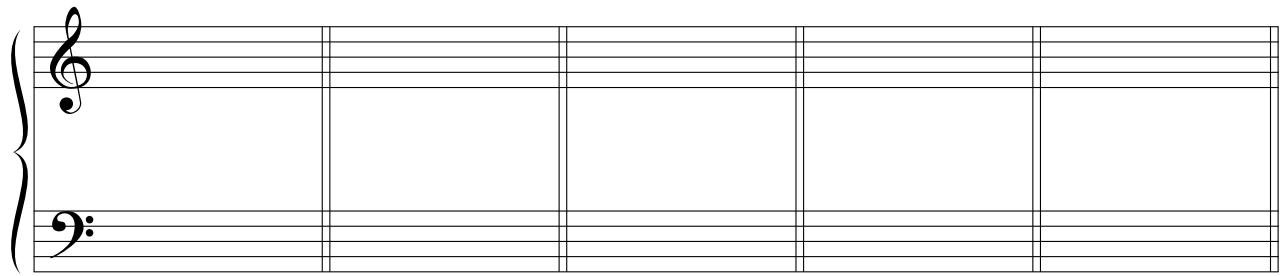
2. Write the indicated key signatures and triads.

bass clef!



____: _____ ____: _____ ____: _____ ____: _____ ____: _____

3. Write the key, Roman numerals and abbreviated inversion figures (when needed) for each triad.



____: _____ ____: _____ ____: _____ ____: _____ ____: _____

key *R.N. & figs.*
both!

Please go on to the next page.



4. For each triad:

- a) Write the key, Roman numerals and abbreviated inversion figures on the top lines.
- b) Write the doubling for each triad on the bottom line. For doublings choose from: root, third of fifth.

A musical staff with five measures. Each measure is divided into two staves: a top staff with a treble clef and a bottom staff with a bass clef. Below the staff, there are five pairs of horizontal lines for writing answers. Each pair is preceded by a colon (:).

5. Given the chord tones, bass and spacing, write the top three voices of root position triads (several correct answers).

Spacing: close open close open close

A musical staff with five measures. Each measure is divided into two staves: a top staff with a treble clef and a bottom staff with a bass clef. The bottom staff contains chord tones and a bass note for each measure. The top staff is empty for writing the top three voices.

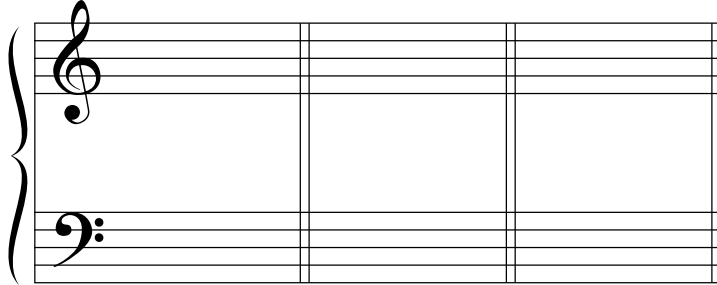
- 1. 3 pts each = 15
 - 2. 3 pts each = 15
 - 3. 2 pts each = 10
 - 4. 3 pts each = 15
 - 5. 3 pts each = 15
- Test = 75 pts

Name: _____

Date: _____

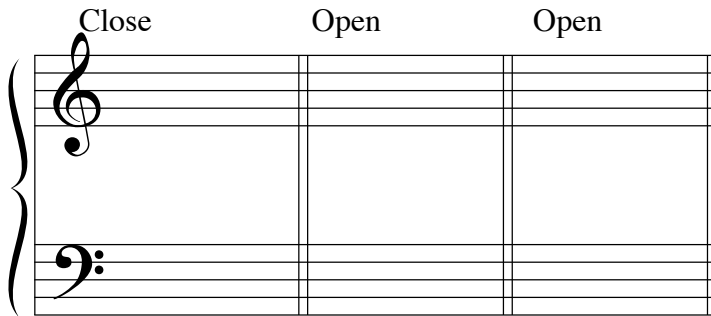
Test on Chapters 14 and 15

1. Write the key, and the Roman and Arabic numeral(s) for the triad
Arabic numerals may be abbreviated.




instructor writes key signatures
and inverted triads in four voices

2. Given the bass note and spacing for *root position* triads write the top three voices.



instructor writes
bass note

3. Complete the second triad using either Common Tone-Stepwise
or Contrary Motion-Nearest voice leading, whichever is appropriate.



instructor writes key signature,
first chord, second bass note,
key and Roman numerals

____:____ ____ ____:____ ____ ____:____ ____

Test on Chapter 15

<http://www.gmajormusictheory.org/Fundamentals/workbooks.html>

Name: _____

Date: _____

1. Given the bass note and spacing for *root position* triads, write the top three voices.

Close Open Open

2. Given all four voices of the first triad and the bass of the second triad, write the top three voices of the second triad using either Common Tone-Stepwise or Contrary Motion-Nearest voice leading.

3. Given two bass notes and the spacing for the first triad, write the top three voices of both triads using either Common Tone-Stepwise or Contrary Motion-Nearest voice leading.

close close

4. Given two notes in each of two voices, label the motion of the voices in relation to each other.



G MAJOR MUSIC THEORY

[SHEET MUSIC](#)
[MUSIC THEORY RESOURCES](#)
[Home](#)
[Sheet Music](#)
[Music Theory](#)
[Music Humor](#)
[About](#)

INDEX OF TERMS

G Major Music Theory Fundamentals

[Back to Fundamentals home page](#)

Terms link to worksheet chapters. Numbers after each term (for instance "12.2") refer to a page within the chapter.

[5/3, 6 \(or 6/3\), and 6/4 chords, 12.2](#)

[Alto clef, 14.4](#)

[Arabic numerals, Ch. 12](#)

Augmented, see [Intervals](#) or [Triads](#)

[Bar lines, 3.2](#)

[Bass clef, 2.1](#)

[Beam, 2.4](#)

[Chord tone, 12.6](#)

[Circle of fifths, Ch. 4](#)

- o circular keyboard and major scales
 - [complete \(graphic\)](#)
 - [incomplete, 4.5](#)
- o [major key signatures \(graphic\)](#)
- o [major scales on the staff \(graphic\)](#)
- o [natural minor on keyboard \(graphic\)](#)
- o [natural minor on staves \(graphic\)](#)
- o [other minor scales on staves \(graphic\)](#)
- o [same as above with blank staves \(graphic\)](#)

[Clef, 1.3](#)

o [G Clef, 1.3](#)

o [Bass clef, 2.1](#)

o [F clef, 2.1](#)

o [Treble Clef, 1.3](#)

[Common tone-stepwise \(CTS\) voice leading, 15.2](#)

[Common tones, 14.7 - 14.8](#)

[Contrary motion, 15.6](#)

[Contrary motion-nearest \(CMN\) voice leading, 15.7](#)

[Diatonic triads, 11.7](#)

Diminished, see [Intervals](#) or [Triads](#)

[Dominant, 11.3](#)

[Dominant seventh chord, Ch. 19](#)

[Dotted notes, 3.5](#)

[Double bar, 3.2](#)

[Double flats, 7.2](#)

[Double sharps, 7.3](#)

[Doubling \(of chord tones\), 13.3](#)

Durations, see [Notation of duration](#)

[Eighth note, 2.4](#)

[Enharmonics, Enharmonic equivalents, 2.8](#)

[F clef, 2.1](#)

[Flag, 2.4](#)

[Flat, 2.6](#)

[G Clef, 1.3](#)

[Half note, 1.7](#)

[Half step, 4.1 - 4.3](#)

[Intervals, Ch. 8](#)

- [2nds, 3rds, 6ths & 7ths, 8.6](#)
 - [4ths, 5ths & 8ves, 8.8](#)
 - [general names, 8.1](#)
 - [specific names, 8.1](#)
 - [augmented, 8.6, 8.8](#)
 - [diminished, 8.6, 8.8](#)
 - [doubly diminished, 8.8](#)
 - [major, 8.4 - 8.5](#)
 - [minor, 8.6](#)
 - [perfect, 8.8](#)
 - [octave, 8.1](#)
- Inversion of triads
- [compact triads, no doubling, Ch. 12](#)
 - [with Roman numerals, spacing and doublings, Ch. 13](#)

[Key, Key note, 4.5](#)[Key signature, definition, 5.1](#)

Key Signatures, organization & relationships

- [major, Ch 5](#)
- [minor, 6.6 - 6.8](#)
- [major, on circle of fifths \(graphic\)](#)
- [minor, on circle of fifths \(graphic\)](#)

Keyboard

- [Black key letter names, 2.6](#)
- [Low and high, 1.2](#)
- [White key letter names, 1.1](#)

[Leading Tone, 11.3](#)[Ledger line, 2.5](#)

Letter names of notes

- [bass clef, 2.2](#)
- [treble clef, 1.6](#)
- [keyboard, 1.1](#)
- [ledger lines, 2.5](#)

[Low and high on the keyboard, 1.2](#)

Major, see [Scales](#), [Key Signatures](#), [Intervals](#), or [Triads](#)

Major scale

- [on keyboard, 4.4](#)
- [on the staff, 4.8](#)

[Measures, 3.2](#)[Mediant, 11.3](#)

Minor, see [Scales](#), [Key Signatures](#), [Intervals](#), or [Triads](#)

Minor scales, [Ch. 6](#) and [Ch. 7](#)

- natural minor
 - [half steps and whole steps, 6.2](#)
 - [and minor key signatures, 6.5](#)
 - [writing with key signature, 7.2](#)
 - [on circular keyboard \(graphic\)](#)
 - [on circular staves \(graphic\)](#)
- [harmonic minor, 7.5](#)
- [melodic minor, 7.6](#)

[Natural sign, 7.3](#)[Notehead, 1.5](#)

Notation of duration

- [Beam, 2.4](#)
- [Dotted notes, 3.5](#)
- [Flag, 2.4](#)
- [Eighth note, 2.4](#)
- [Half note, 1.7](#)
- [Notehead, 1.5](#)
- [Quarter note, 1.7](#)
- [Rests, 3.6](#)
- [Sixteenth notes, 3.4](#)
- [Stem, 1.7](#)
- [Whole note, 1.7](#)

[Oblique motion, 15.6](#)

[Octave, 8.1](#)[Overlapping voices, 16.7](#)[Parallel motion, 15.6](#)[Quarter note, 1.7](#)[Rests, 3.6](#)[Rhythm, Ch. 3](#)

- See also [Notation of duration](#)

[Roman numerals, 11.5](#)

- [for inverted triads, Ch. 13](#)

[Root position, 12.1](#)[SATB notation, 14.1 - 14.2](#)[Scale degree, 4.5](#)

- [names \(tonic, supertonic...\), 11.3](#)

- [numbers, 11.1](#)

[Scales](#)

- major

- [on the keyboard, 4.4](#)

- [on the staff, 4.8](#)

- natural minor

- [and minor key signatures, 6.5](#)

- [half steps and whole steps, 6.2](#)

- [writing with key signature, 7.4](#)

- [on circular keyboard \(graphic\)](#)

- [on circular staves \(graphic\)](#)

- [harmonic minor, 7.5](#)

- [melodic minor, 7.6](#)

[Seventh chords, 19.2](#)[Sharp, 2.6](#)[Similar motion, 15.6](#)[Sixteenth notes, 3.4](#)[Spacing \(close and open\), 14.4](#)[Staff, 1.3](#)[Stem, 1.7](#)[Stem direction](#)

- [One note on a staff, 1.7](#)

- [SATB notation, 14.2](#)

[Subdominant, 11.3](#)[Submediant, 11.3](#)[Supertonic, 11.3](#)[Time signatures, 3.3](#)[Tonic, 11.3](#)[Treble Clef, 1.3](#)[Triads, Ch. 10](#)

- [augmented, 10.3](#)

- [diminished, 10.3](#)

- [inversions, Ch. 12](#)

- [inverted and in 4 voices, 13.4](#) and [Ch. 14](#)

- [inverted and in 4 voices, 13.4](#)

- [major, 10.1, 10.3](#)

- [minor, 10.1, 10.3](#)

- [on circle of fifths \(graphic\)](#)

- [writing given 3rd or 5th only, 10.6](#)

- [writing by comparison to major, Ch. 10B](#)

[Vocal ranges, 16.6](#)[Voice crossing, 16.7](#)[Voice leading, 15.1](#)[Whole note, 1.7](#)[Whole step, 4.1 - 4.3](#)[Back to Fundamentals home page](#)